



**SOCIAL STUDIES AND
RELIGIOUS EDUCATION**

Time: 2 hours 15 mins

INSTRUCTIONS TO CANDIDATES (please read these instructions carefully.)

1. You have been given this question booklet and a separate answer sheet. The question booklet contains 90 questions.
2. Do any necessary rough work in this booklet.
3. When you have chosen your answer, mark it on the **ANSWER SHEET**, not in the question paper.

HOW TO USE THE ANSWER SHEET.

4. Use an ordinary pencil only.
5. Make sure that you have written on the answer sheet:-
YOUR INDEX NUMBER
YOUR NAME
NAME OF YOUR SCHOOL
6. By drawing a **dark line** inside the correct numbered boxes, mark your full Index Number (i.e. School Code Number and the three-figure Candidate's Number) in the grid near the top of the answer sheet.
7. Do not make any marks outside the boxes.
8. Keep your answer sheet as clean as possible and **do not fold it**.
9. For each of the questions 1-90, four answers are given. The answers are lettered **A, B, C, D**. In each case, only **ONE** of the four answers is correct. Choose the correct answer.
10. On the answer sheet, show the correct answer by drawing a **dark line** inside the box in which the letter you have chosen is written.

Example:-

In the Question Booklet:

31. Which of these towns is the oldest?
- A. Mombasa.
 - B. Nairobi.
 - C. Kisumu.
 - D. Kericho.

The correct answer is A.

On the Answer sheet:

31. [A] [B] [C] [D] **32.** [A] [B] [C] [D] **33.** [A] [B] [C] [D] **34.** [A] [B] [C] [D]

In the set of boxes number 31, the box with letter **A** printed in it is marked.

Your dark line **MUST BE** within the box.

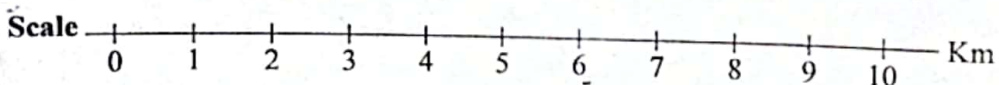
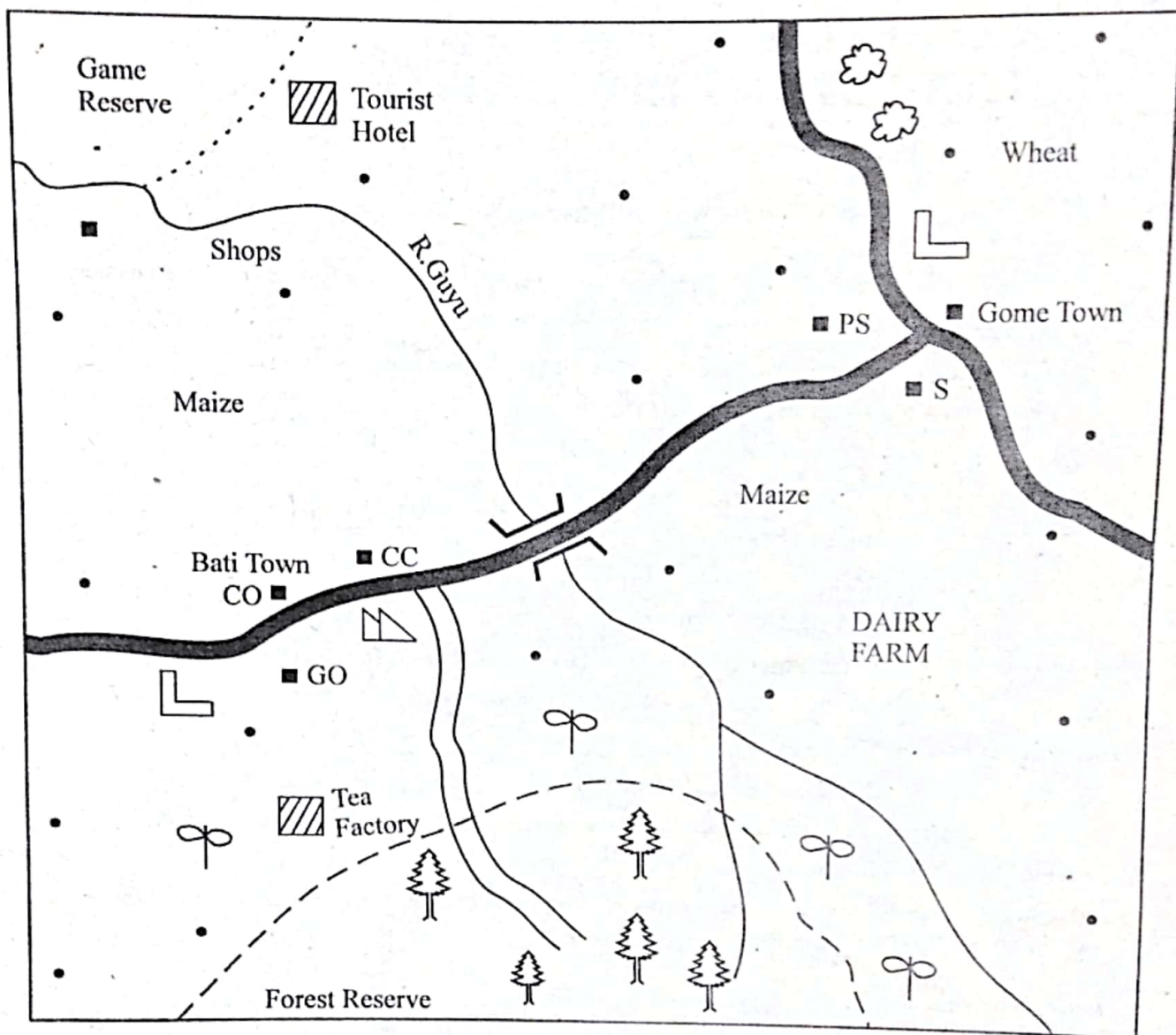
- 11.
12. For each question, **ONLY ONE** box is to be marked in each set of four boxes

This question paper consists of 12 printed pages.



PART I: SOCIAL STUDIES

TARA AREA



KEY

	Forest		Murrum road		Tea Farms	CC	County Commissioner
	Sawmill		Built - up Areas	PS	Police station	GO	Governor's Office
	Mining areas		Settlements	S	Stadium		
	Tarmac road	CO	County Offices		School		

Study the map of Tara Area and answer questions 1-7

1. The **main** economic benefit of the forest in Tara area is that
 - A. it conserves water-catchment areas
 - B. it protects the soil from erosion
 - C. it is a source of timber
 - D. it makes the landscape beautiful.
2. The approximate length of the murram road in Tara area is
 - A. 7.0km
 - B. 5.0km
 - C. 8.0km
 - D. 6.0km
3. The growth of Gome town was **mainly** influenced by
 - A. the road junction
 - B. mining activities
 - C. high population
 - D. high rainfall.
4. Tea is grown in the Southern part of Tara area because the area
 - A. has water to irrigate tea
 - B. experiences cool and wet climate
 - C. has a forest
 - D. is hilly.
5. Land in Tara area generally slopes towards
 - A. North West
 - B. North East
 - C. South West
 - D. South East.
6. Which one of the following places in Tara area is the highest above sea level?
 - A. Tea factory.
 - B. Game reserve.
 - C. Gome town.
 - D. Mining area.
7. The elected head of Tara area is
 - A. a county commissioner
 - B. a governor
 - C. a chief
 - D. a county representative.

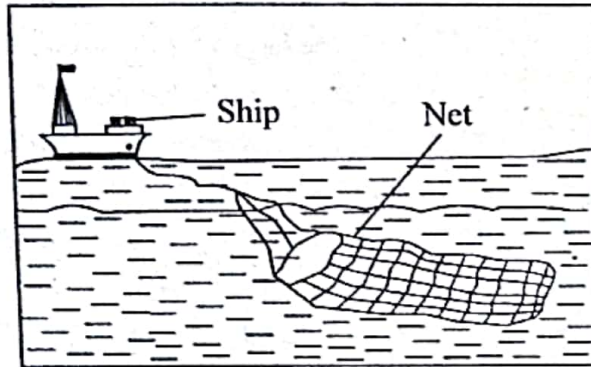
MERIT-003

8. Which one of the following statements about the political organization of the San people in the pre-colonial period is correct?
 - A. A chief came from the most senior clan.
 - B. They were led by a council of elders.
 - C. All adult males made decisions together.
 - D. A king was buried with his belongings.
9. Below are descriptions of a mountain in Africa.
 - (i) It has snow at the peak
 - (ii) It is found on the border of two countries
 - (iii) It was formed through faultingThe mountain described above is
 - A. mount Usambara
 - B. mount Kilimanjaro
 - C. mount Elgon
 - D. mount Ruwenzori.
10. The population of Germany increases at a low rate because
 - A. the country has a low population
 - B. people within reproductive age are few
 - C. most people live in towns
 - D. standards of living in the country are high.
11. The growing of cocoa in Ghana is **mainly** favoured by
 - A. hot and wet humid conditions in growing areas
 - B. availability of a large market for cocoa
 - C. availability of space
 - D. availability of water for irrigation.
12. Which one of the following duties is performed by a Board of Management in a public primary school in Kenya?
 - A. Buying school textbooks.
 - B. Supervising teachers.
 - C. Preparing a school routine.
 - D. Building new classrooms.

S/STUDIES/RE STD 8
TURN OVER

Use the diagram below to answer questions

13 and 14.



13. The marine fishing method illustrated in the above diagram is
- long lining method
 - trawling method
 - net drifting method
 - purse-seining method.
14. The marine fishing method shown above is used to catch fish
- that live near the seashore
 - that are small in size
 - in the deep parts of the sea
 - that are found in fast flowing rivers.
15. Which one of the following actions may disrupt peace during elections in Kenya?
- Formation of many political parties.
 - Small numbers of people turning up to vote.
 - Allowing many people to register as voters.
 - Rejecting election results.
16. Below are statements about a prominent African leader:
- He supported African liberation movements
 - He retired from presidency in 1985
 - He negotiated for peace in Burundi
- The person described above is
- Julius Nyerere
 - Nelson Mandela
 - Leopold Senghor
 - Haile Selassie.
17. Cushitic speaking communities came to Eastern Africa in search of
- goods for trade
 - iron for tool making
 - better grazing areas
 - fertile lands for crop farming.
18. Which one of the following traditional weather observation methods indicates approach of a dry season?
- Smell of moist soil in the air.
 - Croaking of frogs.
 - Shedding of leaves by some trees.
 - Appearance of dark heavy clouds.
19. It is important for Kenyan citizens to demonstrate patriotism in order to
- create good relations with other countries
 - enable the country to develop
 - enable elections to be held frequently
 - increase population in urban areas.
20. Which one of the following was a positive effect of European settler farming?
- It led to establishment of towns.
 - Africans lost their land.
 - Africans were forced to work in white settler farms.
 - Africans lived in reserves.
21. Lake Bangweulu in Zambia and lake Kyoga in Uganda were formed through
- deposition
 - downwarping
 - lava-damming
 - faulting.

22. The following are statements about an early visitor to Eastern Africa;
- (i) He was the first European to see Victoria falls
 - (ii) He met David Livingstone at Ujiji
 - (iii) He came to confirm the source of River Nile
 - (iv) He was sent by the Church Mission Society
- Which one of the following combinations is true about Henry Morton Stanley?

- A. iii and iv
- B. i and ii
- C. ii and iii
- D. ii and iv

23. Testate method of succession is done in a family if
- A. the deceased had no children
 - B. the deceased had not left a will
 - C. the deceased had left no property
 - D. the deceased has written a will.

24. The highland regions of Kenya have high population due to
- A. absence of tsetse flies
 - B. adequate rainfall in the regions
 - C. good roads in the areas
 - D. presence of large towns.

25. Which one of the following human rights may **not** be exercised by prisoners in jail?
- A. Right to medical care.
 - B. Freedom of worship.
 - C. Freedom of movement.
 - D. Right to education.

26. Which one of the following statements about subsistence farming before the 19th century is correct?
- A. Cash crops were grown for sale.
 - B. Crops were grown in large plantations.
 - C. Machines were used for harvesting.
 - D. Only food crops were grown.

MERIT-003

Use the diagram below to answer question 27.



27. Kiprotich was driving a car when he came across the road sign shown above. The most appropriate action that he took was that he
- A. turned back
 - B. stopped the car
 - C. reduced the speed of the car
 - D. called for help.
28. The youth were taught moral values in traditional African societies **mainly** to
- A. make them grow into responsible adults
 - B. promote unity among themselves
 - C. teach them technical skills
 - D. help them become courageous.
29. Which one of the following statements about traditional industries is correct?
- A. Goods were produced in large quantities.
 - B. They produced household items.
 - C. They led to building of roads.
 - D. Goods were produced for export.
30. Before the coming of Europeans the Baganda people were ruled by
- A. a queen mother
 - B. a chief
 - C. a king
 - D. a council of elders.

5

S/STUDIES/RE STD 8

TURN OVER

MERIT-003.

31. Which one of the following colonial administration policies was used by Britain to rule Northern Nigeria?
- A. Direct rule.
 - B. Assimilation.
 - C. Indirect rule.
 - D. Association.

32. The sun is directly overhead the tropic of capricorn in the month of
- A. March
 - B. June
 - C. September
 - D. December.

33. Below are functions of council of elders in traditional African governments
- (i) Allocating land to clan members
 - (ii) Settling disputes
 - (iii) Blessing warriors
 - (iv) Foretelling the future
 - (v) Treating the sick

Which one of the following combinations is made up of functions of the Ameru council of elders?

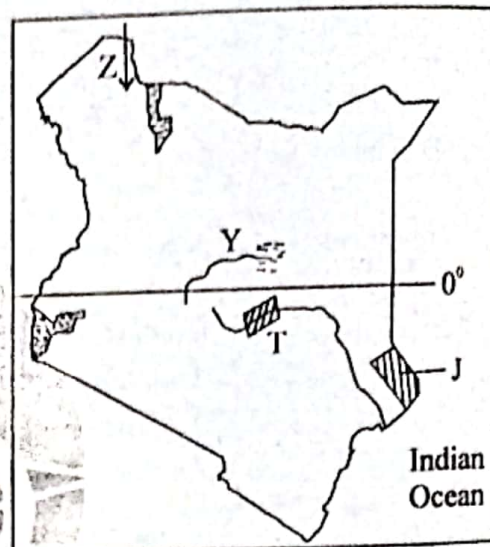
- A. iii, iv, v
 - B. i, iii, iv
 - C. ii, iv, v
 - D. i, ii, iii
34. Which one of the following groups of people belong to a nuclear family?
- A. Mother, son, daughter.
 - B. Grandfather, mother, daughter.
 - C. Father, son, aunt.
 - D. Grandmother, son, daughter.

35. Which one of the following communities is correctly matched with the commodity it traded in during the pre-colonial period?

Community	Goods
A. Abagusii	Red ochre
B. Maasi	Grains
C. Akamba	Wood carvings
D. Agikuyu	Soap stones

36. The best way of ensuring that the school compound is clean all the time is by
- A. employing workers to clean the compound.
 - B. punishing learners who make the compound dirty
 - C. providing dustbins in the school
 - D. educating learners on the importance of cleanliness.

Use the map of Kenya below to answer questions 37 to 40.



37. The river projects marked T were established mainly to
- A. control flooding
 - B. produce electricity
 - C. provide water for irrigating rice
 - D. create an inland waterway.

38. Which one of the following language groups migrated into Kenya using the route marked Z?
- A. Plains Nilotes.
 - B. River and lake Nilotes.
 - C. Bantu.
 - D. Cushites.

39. The natural forest marked J is
- A. Arabuko Sokoke Forest.
 - B. Marsabit Forest.
 - C. Boni Forest
 - D. Shimba Hills Forest.

40. Which one of the following statements is true about the river marked Y?

- A. It forms a delta.
- B. It crosses five counties.
- C. It starts from Mau escarpments.
- D. It ends in a swamp.

41. Below are statements that describe a traditional African leader

- (i) He was killed by the British
- (ii) He was a prophet
- (iii) He disrupted the construction of the Kenya-Uganda railway.

The person described above is

- A. Masaku
- B. Waiyaki wa Hinga
- C. Laibon Lenana
- D. Koitalel Arap Samoei.

42. Which one of the following statements correctly describes rainforest vegetation?

- A. There is plenty of tall grass.
- B. Trees are tall and evergreen.
- C. Trees are thorny and scattered.
- D. There are short dry bushes.

43. The main contribution of petroleum to the economy of Nigeria is that it has led to

- A. growth of towns
- B. establishment of processing industries
- C. increase of foreign exchange
- D. development of transport network.

44. Who among the following traditional African leaders resisted French colonial rule in West Africa?

- A. King Lewanika.
- B. Samouri Toure.
- C. Menelik II
- D. Koitalel Arap Samoei.

45. Which one of the following countries is correctly matched with its capital city?

Country	Capital city
A. Botswana	— Gaborone.
B. Zimbabwe	— Lusaka.
C. Zambia	— Lilongwe.
D. Malawi	— Harare.

46. Three of the following are problems faced by rice farmers in Mwea irrigation scheme. Which one is not?

- A. Water-borne diseases.
- B. Destruction of rice by birds.
- C. Shortage of rice seedlings.
- D. Siltation of water canals.

47. Which one of the following is a difference in horticultural farming between Kenya and Netherlands?

- A. In Kenya farming is less mechanised.
- B. Co-operatives in Kenya are better managed.
- C. Netherlands has a smaller market for flowers.
- D. In Netherlands crops are grown in large plantations.

48. In Kenya game reserves have been established mainly to

- A. control movement of animals
- B. make good use of dry areas
- C. increase meat supply in the country
- D. ensure safety of wild animals.

49. The main reason why the Organisation of African Unity (OAU) was formed in 1963 was to

- A. fight for independence in Africa
- B. reduce trade with foreign countries
- C. promote closer ties among member countries
- D. support African liberation movements.

50. Which one of the following statements is false about Tswana pastoralists?
- A. They keep large herds of livestock.
 - B. They graze in the cool and wet highland areas.
 - C. They use livestock to pay bride price.
 - D. They grow food crops around their temporary shelters.
51. Which one of the following is a function of the body in charge of elections in Kenya?
- A. Registering political parties.
 - B. Making laws in the country.
 - C. Creating new constituencies.
 - D. Campaigning for candidates.
52. Which one of the following groups consists of countries that formed the East African Community (EAC) in 1967?
- A. Kenya, Rwanda, Burundi.
 - B. Kenya, Uganda, Burundi.
 - C. Kenya, Tanzania, Rwanda.
 - D. Kenya, Uganda, Tanzania.
53. Which one of the following crops is grown under irrigation in the valleys of River Blue Nile and Atbara in Sudan?
- A. Sugarcane.
 - B. Cotton.
 - C. Rice.
 - D. Coffee.
54. Three of the following are roles of political parties in a democratic state. Which one is not?
- A. Organising citizens to take part in elections.
 - B. Campaigning for equal rights.
 - C. Approving bills to be discussed in parliament.
 - D. Monitoring activities of the government.
55. One of the problems affecting fishing in Lake Victoria is
- A. parts of the lake have rocks
 - B. parts of the lake have water hyacinth
 - C. water level in the lake keeps changing
 - D. silt is deposited in the lake by rivers.
56. The best way through which prefects can help other learners to behave well is by
- A. punishing learners who misbehave
 - B. advising learners to behave well
 - C. giving presents to well behaved learners
 - D. setting good examples of behaviour.
57. Which one of the following is a service industry?
- A. Banking.
 - B. Coffee milling.
 - C. Vehicle assembly.
 - D. Furniture making.
58. Which one of the following is a function of parliament in Kenya?
- A. Judging people who break the law.
 - B. Advising the President on matters of law.
 - C. Making laws.
 - D. Implementing laws.
59. A foreigner living in Kenya may enjoy the following rights except
- A. right to fair trial
 - B. right to vote
 - C. right to own property
 - D. right to life.
60. In Kenya flourspar is extracted from the ground using
- A. drilling method
 - B. deep-shaft method
 - C. dredging method
 - D. open-cast method.

SECTION II

CHRISTIAN RELIGIOUS EDUCATION

61. The result of the disobedience of Adam and Eve in the garden of Eden was that human beings were to
A. become sick
B. face death
C. till the land
D. fill the earth.
62. During the time of Noah God punished human beings because they
A. had become too many
B. were building a high tower
C. were speaking one language
D. were evil and wicked.
63. The call of Abraham teaches christians to be
A. merciful B. tolerant
C. caring D. obedient.
64. On the night the Israelites left Egypt they ate unleavened bread because
A. they were in hurry to leave Egypt
B. they wanted to remember their suffering
C. there was no yeast in Egypt
D. they wanted to make a covenant with God.
65. Which one of the following was a problem that the Israelites faced during the exodus?
Lack of
A. water B. clothes
C. leaders D. livestock.
66. Which one of the following was a quality of leadership demonstrated by David when he went to fight Goliath?
A. Honesty. B. Humility.
C. Courage. D. Faithfulness.
67. A sin that was committed by King Solomon was that he
A. killed the prophets of Baal
B. married foreign wives
C. took the property of other people
D. traded with other kings.
68. Which one of the following miracles was done by both prophet Elijah and Elisha?
A. Bringing fire from heaven.
B. Healing lepers.
C. Raising dead people.
D. Multiplying flour.
69. Jeremiah did not want to become a prophet when he was called by God because
A. he was not an important person
B. he was not known in Israel
C. he was afraid of the king
D. he felt he was too young.
70. Who among the following people is correctly matched with the activity he or she did ?
A. Zechariah - visiting Elizabeth.
B. Wisemen - looking after sheep.
C. Anna - burning incense.
D. Simeon - following a star.
71. How did Joseph know that Herod was planning to kill baby Jesus?
A. An angel warned him in a dream.
B. The wisemen told him.
C. He learnt from the scriptures.
D. The shepherds told him.
72. At which occasion did Jesus teach his disciples how to pray?
A. When they were walking to Emmaus
B. When he was seated in a boat.
C. When he was eating the last supper.
D. During the sermon on the mount.
73. The parable of Jesus that teaches christians to bring more people back to the church is
A. the ten young women
B. the lost sheep
C. Lazarus and the rich man
D. the sower.
74. "The son of man is the Lord of the Sabbath" (Luke 6:5). Jesus spoke these words when
A. he healed a paralysed man
B. he ate with Zacchaeus in his house
C. his disciples picked ears of corn.
D. he healed a Roman officer's servant.
75. A lesson that christians learn from the miracle when Jesus healed a demon possessed man is that
A. he forgives sins
B. he has power over evil
C. he has power over nature
D. he is the protector.

76. From the teaching of Jesus about wealth Christians learn that it should be
- used to support the needy
 - used to make profit
 - used to make friends
 - used for personal gain.
77. Which one of the following events took place when Jesus was praying at the garden of Gethsemane?
- His clothes changed to dazzling white.
 - An angel came down and comforted him.
 - Moses and Elijah appeared.
 - A cloud covered him.
78. Who among the following believers met the resurrected Christ on the road to Emmaus?
- Saul.
 - Philip.
 - Thomas.
 - Cleopas.
79. On the day of Pentecost the Jews accused the disciples of
- mixing with sinners
 - speaking in languages they could not understand
 - being drunk
 - claiming to destroy the temple.
80. In the early church, money was distributed to the widows by
- pharisees
 - deacons
 - gentiles
 - priests.
81. Which one of the following acts of worship was done by Paul and Silas when they were in jail?
- They sang songs.
 - They read the scriptures.
 - They preached to fellow prisoners.
 - They took the Holy Communion.
82. A common belief about God in both Christianity and traditional African communities is that
- God is the father of Jesus
 - God is the creator
 - God lives in heaven
 - God wrote the scriptures.

83. During marriage in traditional African communities a couple is given prescriptions **mainly to**
- show the importance of marriage
 - show them that they are special people
 - teach them to be responsible
 - ensure they have property in their home.
84. Who among the following people is a religious specialist in traditional African communities?
- Priest.
 - Medicineman.
 - Herbalist.
 - Warrior.
85. In traditional African communities, children are taught moral values in order to
- enable them get marriage partners
 - make them acquire good behaviour
 - help them grow into elders
 - teach them the origin of their communities.
86. In which one of the following ways do Christians demonstrate respect for authority?
- Obedying the laws of the country.
 - Singing songs of praise for leaders.
 - Praying for leaders.
 - Taking part in development projects.
87. Your classmate picked a hundred shillings note near the staffroom. The best advice you can give her is to tell her to
- share the money with you
 - give it to the teacher on duty
 - give it to a needy child
 - buy some food for orphaned children.
88. Elizabeth has some free time during the school holiday. She can best help the community by
- attending her cousin's birthday party
 - resting at home
 - reading a story book
 - visiting and helping the aged.
89. Christians are encouraged to work in order to
- create wealth for themselves
 - be rewarded by leaders
 - avoid being a burden on other people
 - become famous in the society.
90. Christians show unity in Christ when they
- work to earn their living
 - meet in their homes to pray
 - donate food to the needy.
 - take part in development projects.

SECTION II

ISLAMIC RELIGIOUS EDUCATION

61. Which one of the following surah must be recited when performing salat?
 A. *Al-Kafirun*. B. *Al-Fatiha*.
 C. *Al-Asr*. D. *An-Nasr*.
62. "Wara'aita n-nasa yadkhuluna fii diini illhali afwaeija". This verse is found in surah
 A. *Al-Fiil* B. *Al-Falaq*
 C. *Al-Nasr* D. *An-Nasr*.
63. A whole surah that teaches on the oneness of Allah is
 A. *Al-Falaq*. B. *Al-Kauthar*.
 C. *Al-Ikhlās*. D. *An-Nasr*.
64. A lesson that muslims learn from surah Al-Asr is that they should
 A. *keep away from worldly things*
 B. *observe punctuality in swalat*
 C. *take care of orphans*
 D. *exercise patience*.
65. Which one of the following is a teaching from surah Kafirun?
 A. *Muslims should perform regular prayers.*
 B. *Muslims should be patient in times of difficulties.*
 C. *Muslims should be prepared to defend their religions.*
 D. *Muslims should be faithful to their religion.*
66. According to hadith, one of the signs of hypocrites is that they do not
 A. *fulfill promises*
 B. *respect parents*
 C. *help other muslims*
 D. *greet people*.
67. Which one of the following words completes the quoted hadith? "The generous man is nearer Allah, nearer paradise, nearer man and far from..."
 A. *hell* B. *home*
 C. *the truth* D. *the last day*.
68. Which among the following phrases is found in Iqamah but not Adhan?
 A. *Haiya alal swalat*
 B. *Qadqamti swalat*.
 C. *Ash-hadu an la ilaha illa llahi*.
 D. *Allahu Akbar*.
69. On which one of the following occasions is a muslim not required to pronounce the Kalima?
 A. *When a person converts to Islam.*
 B. *When a person is getting married.*
 C. *When a baby is born.*
 D. *When a person is dying.*
70. A muslim's swaam can be nullified by
 A. *eating deliberately* B. *engaging in sports*
 C. *sleeping* D. *watching news*.
71. Who among the following categories of people are exempted from fasting?
 A. *Widows.* B. *Orphans.*
 C. *Travellers.* D. *Debtors.*
72. The reason why muslims throw stones at the Jamarat during Hajj is to
 A. *purify themselves*
 B. *complete Hajj*
 C. *protect themselves from evil*
 D. *remember the prophet*.
73. Which one of the following is a pillar of Iman?
 A. *Praying five times a day.*
 B. *Belief that Allah exists.*
 C. *Paying of zakat.*
 D. *Performance of Hajj.*
74. During break time, Najma, a standard three pupil notices her classmate Amal hiding a friend's books in her school bag. The correct action for Najma to take is to
 A. *report Amal to the class teacher*
 B. *tell Amal that stealing is bad*
 C. *ask Amal to give her the book*
 D. *forcefully take the book from Amal.*
75. Musa, a standard four pupil, invited his non-muslim classmates to his brother's Aqiqah celebration. In which one of the following ways can Musa show tolerance towards his non-muslim classmates?
 A. *By allowing them to pray.*
 B. *By giving them enough food.*
 C. *By escorting them back to their homes.*
 D. *By accepting gifts from them.*
76. Who among the following prophets is correctly matched with the scripture that he received?
- | <u>Prophet</u> | — | <u>Scripture</u> |
|----------------|---|------------------|
| A. Musa | — | Zabur |
| B. Issa | — | Taurat |
| C. Ibrahim | — | Suhuf |
| D. Dawud | — | Injil |

77. Three of the following are similarities between Idd and Friday prayers. Which one is **not**?
 A. They have two *rakah*.
 B. They have *khutbah*.
 C. They are performed in the morning.
 D. They are performed in congregation.
78. During lunch time two pupils in standard eight fought in class. The correct and just way in which the class teacher can solve the case is by
 A. listening to both pupils before deciding
 B. sending the pupils home to call their parents
 C. reporting the pupils to the head teacher
 D. punishing both pupils for breaking school rules.
79. Najma arrives at school and finds other pupils are at assembly. What is the right cause of action for her to take?
 A. Go to the assembly and explain to the teacher why she is late.
 B. Go home and come to school early the following day.
 C. Hide until the assembly is over and then go to class.
 D. Go to class and wait for other pupils.
80. Which one of the following is a halal source of earning profits?
 A. Buying money with interest.
 B. Lending money with interest.
 C. Keeping goods and selling at higher prices.
 D. Selling milk that has been mixed with water.
81. Which one of the following is not an Islamic teaching on the treating of orphans?
 A. They should be provided with the basic necessities.
 B. They should be accorded compassion.
 C. They should be given zakat if they are poor.
 D. They should have part of their property donated to charity.
82. Your classmate Nasra tells you that she does not like helping with house work at home because it makes her tired. The correct advice to give her is to tell her to
 A. ask her mother to employ a worker
 B. sacrifice and do the work
 C. share the work with you
 D. rest and do the work.
83. Which one of the following is true about *salatul Janazah*?
 A. It has four *takbir*.
 B. It has *rukuu*.
 C. It has two *khutbah*.
 D. It has *sijdat*.
84. Which one of the following events took place as a result of the pledge of Aqabah?
 A. Muslims migrated to *Abbyssinia*.
 B. The prophet (p.b.u.h) migrated to *Madina*.
 C. The battle of *Badr* was fought.
 D. *Ummar al-Khattab* converted to Islam.
85. The year AD 630 when muslims conquered Makka without bloodshed is referred to as
 A. the year of the elephant
 B. the year of sorrow
 C. the year of peace
 D. the year of suffering.
86. Who among the following was a slave who was persecuted by the Quraish and later on became a *muadhin*?
 A. *Amar Ibn Yassir*.
 B. *Bilal Ibn Rabbah*.
 C. *Summaya*.
 D. *Uthman*.
87. Which one of the following was a result of the persecution of early muslims in Makkah?
 A. Strengthening of Islam.
 B. Promotion of worship.
 C. The spread of Islam stopped.
 D. Muslims population was greatly reduced.
88. The first surah in the Qur'an is
 A. *Fatiha*.
 B. *Nas*.
 C. *Alaq*.
 D. *Falaq*.
89. What did the prophet (S.A.W) describe fasting as?
 A. Shield.
 B. Charity.
 C. Security.
 D. Dua.
90. Which one of the following is sunnah *salat*?
 A. *Dhuha*.
 B. *Taraweh*.
 C. *Dhuhr*.
 D. *Tahajjud*.