

1. 120 cm³ of oxygen gas diffused through a porous partition in 50 seconds. How long would it take 80 cm³ of Sulphur (IV) oxide to diffuse ^{through} the same partition under the same conditions? (S=32.0, O=16.0)

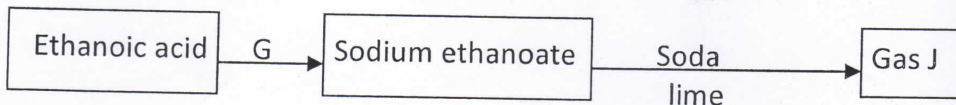
(3mks)

$$R_{O_2} = \frac{120}{50} = 2.4 \text{ cm}^3/\text{sec}$$

$$R_{SO_2} = \sqrt{\frac{64}{32}} \times 2.4 = 1.697 \text{ cm}^3/\text{sec}$$

$$t = \frac{80}{1.697} = 47.14 \text{ sec}$$

2. The flow chart represents a series of reactions. Study it and answer the questions that follow.



- i. Identify substances G and J


(2mks)

G... Sodium hydroxide

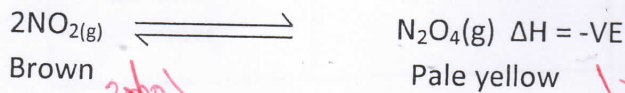
J... Methane

- ii. Write a chemical equation for the formation of J.

(1mk)



3. At 20°C, NO₂ and N₂O₄ gases exist in equilibrium as shown in the equation below.



State and explain the observation that would be made when.

- (a) The syringe containing the mixture is immersed in ice-cold water. ^{because it is exothermic} (2mks)

Forward reaction is favoured ✓
 Pale yellow colour intensifies as the brown colour fades ✓

- (b) The volume in the gaseous mixture in the syringe is reduced. (2mks)

Forward reaction is favoured ✓
 Backward reaction is favoured ✓
 Pale yellow colour intensifies as pale brown colour fades ✓