



20210102



CAPITAL TRIAL SERIES

SCHOOL BASED
STD 8 - YEAR 2021

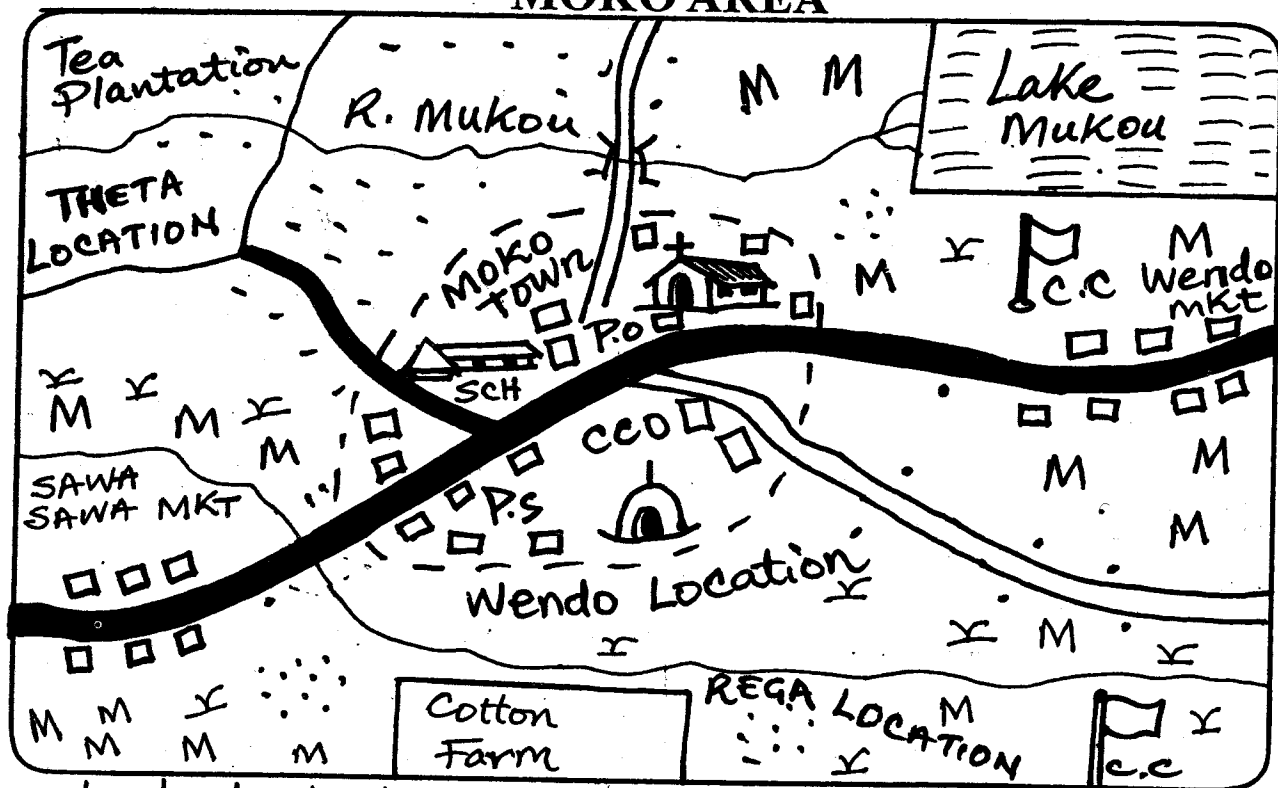
SOCIAL STUDIES / C.R.E

READ THESE INSTRUCTIONS CAREFULLY

Time: 2 Hrs 15 Mins

1. Use only an ordinary pencil.
2. Make sure that you have written on the answer sheet:-
(I) YOUR NAME (II) NAME OF YOUR SCHOOL
3. For each question show the correct answer by drawing line in the brackets in which the letter you have chosen is written.

MOKO AREA



SCALE: 0 1 2 3 4 5 6 7 8 9 10 11 12 13 14 15 16 Km

KEY			
	Tarmac road		Murram road
	Permanent buildings		Settlement
	Locational boundary	P.O	Post Office
	SCH	School	C.C.O
	Market	C.O	Chief's office
	Church	P.S	Police station
	Grass		

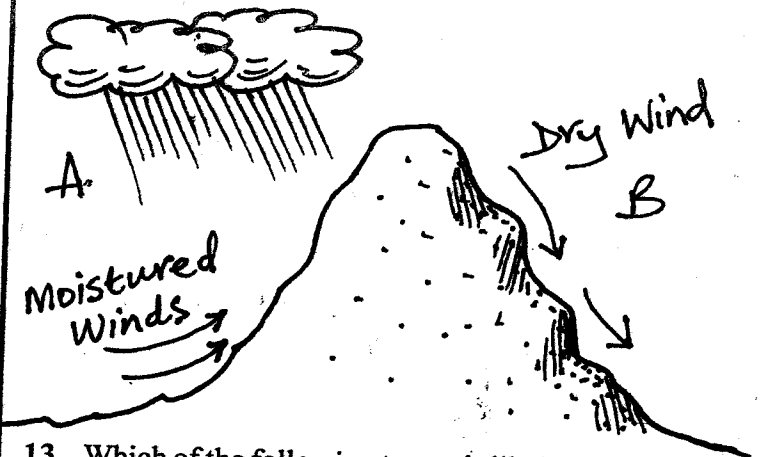
Study the map of Moko area and use it to answer questions 1-7.

- The **main** reason why the Northwestern part of Moko area is highly populated is:-
 - good transport network
 - good climatic conditions
 - availability of large land
 - it is near Moko town
- The highest point in Moko area is to the:-
 - West
 - South
 - North West
 - North East
- What type of climate is experienced in most parts of Moko area?
 - Cool and wet
 - Hot and dry
 - Cool and dry
 - Hot and wet
- Moko town serves all the following functions except it is a centre for:-
 - education
 - recreation
 - transport
 - administration
- A mother has given birth in Rega location. Where should she report the birth?
 - At chief's camp in Rega
 - At police station in Moko town
 - At county commissioner's office in Moko town
 - Chief's camp in Wendo market
- Which of the following economic activities is **not** taking place in Moko area?
 - Transport and communication
 - Crop farming
 - Trading
 - Fishing
- The **main** religion of the people of Moko area is:-
 - Islam
 - Christianity
 - Atheism
 - Hinduism
- Three of the following are responsibilities of parents in a family. Which one belongs to the children?
 - To provide the basic needs
 - To provide security
 - To take care of family property
 - To advise the young members of the family
- Which one of the following groups consists of people found in central Africa?
 - Berbers and Arabs
 - Lozi and Bemba
 - Yoruba and Soninke
 - Bantu and Asians
- Which one of the following is a function of a school committee in a public school in Kenya?
 - To manage the school
 - To discipline teachers
 - To expel pupils from the school
 - To admit new pupils to the school

- The **main** reason for conserving forests in Kenya is to:-
 - protect sources of rivers
 - provide areas of recreation
 - protect medicinal plants
 - protect suitable environment for wild animals

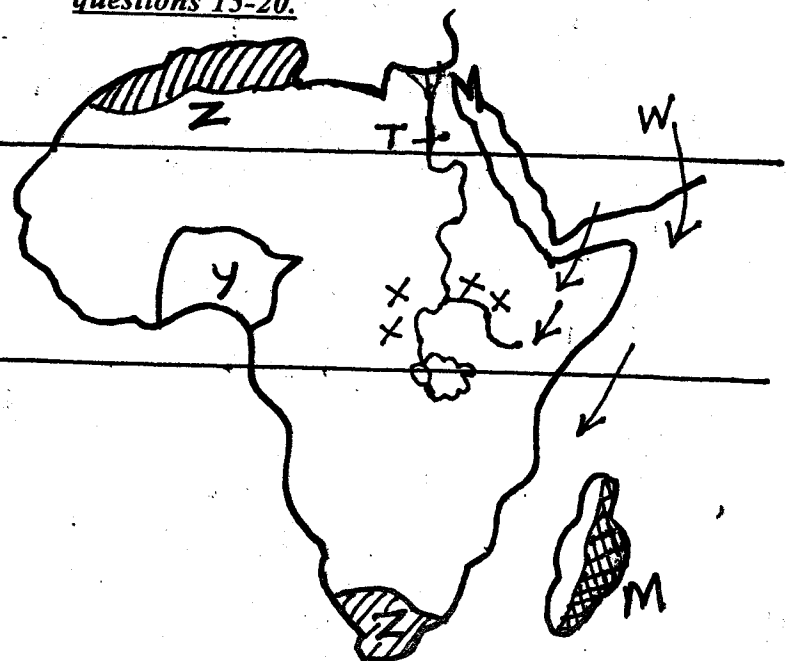
- Which one of the following actions **does not** lead to the spread of HIV/AIDS?
 - Shaking hands
 - Unscreened blood transfusion
 - Sharing injection needles
 - Sexual immorality

Study the diagram below to answer questions 13-14.



- Which of the following towns is likely to be found at side B?
 - Embu
 - Nanyuki
 - Mombasa
 - Kisii
- The **main** economic activity likely to be practiced at B is:-
 - dairy farming
 - forestry
 - nomadic pastoralism
 - crop farming

Use the map of Africa below to answer questions 15-20.



44. Railway transport services have declined in recent years in Kenya mainly due to:-
 A. mismanagement of the sector
 B. high cost of transport
 C. scarcity of commodities to transport
 D. frequent railway accidents
45. The following symbols indicate fishing activity is taking place in an area covered by a map except:-
 A. fish factory B. fish traps
 C. fish market D. lakes
46. Who is the chairperson of the County Education Board?
 A. Permanent Secretary Ministry of Education
 B. County Commissioner
 C. County Director of Education
 D. County Executive Officer
47. Which is the smallest country in Eastern Africa?
 A. Eritrea B. Uganda
 C. Djibouti D. Somalia
48. Among the Akamba, people who were initiated together formed:-
 A. a clan
 B. an age set
 C. an age group
 D. a sub-tribe
49. Which one of the following plateaus in Africa is correctly matched with the country it is found in?
- | <u>Plateau</u> | <u>Country</u> |
|------------------|----------------|
| A. Bie | Kenya |
| B. Fouta Djallon | Cameroon |
| C. Nyika | Angola |
| D. Jos | Nigeria |
50. Mombasa has grown into a major sea port in Eastern Africa mainly because:-
 A. many industries are located in the town
 B. there is space for expansion
 C. it has a large population of foreigners
 D. most products from the inland are exported through the port
51. Who heads the county executive committee?
 A. County Commissioner
 B. County Assembly Speaker
 C. Deputy Governor
 D. County Governor
52. The head quarter of COMESA is found in:-
 A. Addis Ababa - Ethiopia
 B. Lusaka - Zambia
 C. Dodoma - Tanzania
 D. Durban - South Africa
53. The following are ways of promoting inclusion of people with special needs in the society except:-
 A. providing equal opportunities
 B. paying taxes to government
 C. creating friendly environment
 D. creating positive attitudes
54. The following are factors that undermine peace **except:-**
 A. unemployment B. corruption
 C. security D. poverty
55. One of the following is not a factor influencing population distribution. Which one is it?
 A. Climate B. Urbanization
 C. Cultural practices D. Vegetation
56. The government of Uganda is headed by:-
 A. a hereditary king B. prime minister
 C. an elected president D. a nominated president
57. Which group consists of Cushitic speakers only?
 A. Dahalo, Afar, Burji
 B. Amharans, Arabs, Falasha
 C. Tugen, Sabaot, Lugbara
 D. Dinka, Nuer, Shilluk
58. Which one of the following European countries used the policy of assimilation to administer its colonies in Africa?
 A. Germany B. Britain
 C. France D. Portugal
59. Drug abuse is discouraged mainly because it:-
 A. leads to ill health
 B. promotes illegal trade
 C. pollutes the environment
 D. encourage corruption
60. A standard 7 prefects finds two of her classmates quarreling over a textbook in class. The best action for the prefect to take is to:-
 A. report the pupils to the teacher on duty
 B. punish the pupils
 C. encourage the pupils to talk about the problem peacefully
 D. send the pupils out of class

SECTION II

CHRISTIAN RELIGIOUS EDUCATION

61. Which one of the following sins was committed by king Solomon? He _____
 A. took Uriah's wife
 B. killed God's prophets
 C. took Naboth's vineyard
 D. married many wives
62. Which one of the following is an epistle?
 A. Mathew B. John C. Romans D. Corinthians

63. When sharing in the breaking of bread, Christians should have the following values except:-
 A. share gladly B. impatience
 C. love D. compassion
64. Who among the following people was anointed as the second king of Israel?
 A. Saul B. Ahab C. David D. Solomon
65. Human beings were created in the image of God and likeness in the _____ day.
 A. seventh B. eighth C. sixth D. third
66. The last books in the Old Testament is:-
 A. Genesis B. Revelation
 C. Malachi D. Deutronomy
67. In which stage were boys and girls taught how to behave like adults?
 A. Death B. Initiation C. Marriage D. Birth
68. The following are good gifts we can receive from friends except:-
 A. drugs B. food C. clothes D. shoes
69. The rich tax collector who was visited by Jesus was called:-
 A. Stephen B. Zacheaus C. Lazarus D. Paul
70. Sharing a meal is a sign of:-
 A. selfishness B. unity C. envy D. hatred
71. Jesus was born in the town of:-
 A. Nazareth B. Judea C. Bethlehem D. Jerusalem
72. During the time of Noah, God punished people through:-
 A. drought B. fire C. storm D. floods
73. As a Christian, what should we do to orphans?
 A. Help them B. Chase them away
 C. Kill them D. Beat them
74. The word Emmanuel means:-
 A. The holy one B. The Messiah
 C. Brought out of water D. God with us
75. Which one of the following is a gift of the Holy Spirit?
 A. Kindness B. Preaching
 C. Humility D. Gentleness
76. Rehema likes picking pens from her friend's bags. What advice can you give her as a Christian?
 A. Share the pens with her other friends
 B. Stop and change
 C. Take books as well
 D. Stop coming to school
77. Which of the following behaviours is allowed by the Bible?
 A. Adultery B. Stealing C. Murder D. Honesty
78. Which one of the following talents did David son of Jesse have?
 A. Skillful musician B. Drawing
 C. Good athletes D. Mason
79. In which ways can we use our talents at home?
 A. Helping our parents with work
 B. Beating others as we play
 C. Stealing neighbours mangoes
 D. Fighting with parents
80. What type of a giver does God love?
 A. Complaining B. Boastful
 C. Cheerful D. Regular
81. A Christian can live a life of integrity by:-
 A. being greedy
 B. stealing from others
 C. being honest
 D. hiding from non Christians
82. Which one of the following is an occasion when Christians pray and fast? During _____
 A. drought and famine B. Christmas
 C. Child birth D. Weddings
83. In which ways can Christians promote peace in the society?
 A. being untrustworthy B. being just
 C. disrespecting others D. not accepting others
84. As a Christian, the Bible teaches that God knew us:-
 A. when we were born
 B. before birth
 C. when we were baptized
 D. when we accept him
85. "This is my son with whom I'm well pleased." The words were heard from heaven during Jesus _____
 A. crucifixion B. death
 C. baptism D. birth
86. All these are gospel books except:-
 A. Revelation B. Mathew C. Mark D. Luke
87. People work because of the following reasons. Which one is not?
 A. To get money
 B. To build a good house
 C. To buy food
 D. To please others
88. The offering given to God in church as ten percent of all our earnings is called:-
 A. gift B. present
 C. love offering D. tithe
89. Who among the following wanted Jesus killed when he was born?
 A. Moses B. Pilate
 C. Herod D. Nicodemus
90. Which one of the following ceremonies is not practiced in the traditional African society?
 A. Wedding B. Circumcision
 C. Baptism D. Naming