



PREMIUM ASSESSMENT

2021

20210312

EARLY YEARS' ASSESSMENT
MONITORING LEARNER'S PROGRESS
GRADE 2 - YEAR 2021

INTEGRATED LEARNING AREAS

Name: _____

TICK YOUR
GENDER

BOY

GIRL



Name of your school: _____

Your number _____

The teacher to fill in the grid below after marking the learner's work

Number of Marks scored		Exceeds Expectations	Meets Expectations	Approaching Expectations	Below Expectations

ENVIRONMENTAL

Use the weather chart to answer the questions

Day	Morning	Afternoon
Monday		
Tuesday		
Wednesday		
Thursday		
Friday		


- The weather on Monday morning was? _____
- Which day was the weather

sunny throughout the day ?


- Name the days of the week which the weather was sunny
 - _____
 - _____
 - _____
- On Tuesday afternoon the weather was? _____
- Name three domestic animals
 - _____
 - _____
 - _____
 (lion, zebra, donkey, monkey, sheep, cow)

6. Draw the sources of light


(a) bulb



(b) sun




(c) candle




7. Name the things used to store water

(a)



(b)

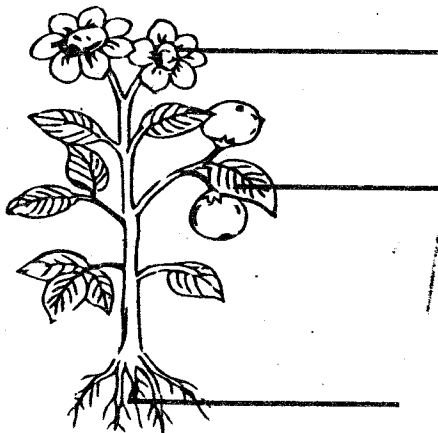


(c)



(pipe, bucket, pot, jerrycan, cup)

8. Name parts of a plant



(stem, fruit, flower, leaf, roots)

9. We go to _____ to learn (hospital, school)

10. _____ teaches pupils at school. (doctor, teacher)

HYGIENE AND NUTRITION

1. The first food we eat in the morning is called? (lunch, breakfast)

2. Breakfast provide us with _____ (food, energy)

3. We should brush our teeth _____ times a day to keep them clean. (4,3,1)

4. Name the personal items


(a)




(b)



(c)



(d)



(handkerchief, mask, toothbrush, comb)

5. Write "good habit" or poor habit" for our teeth



(a) Sucking your finger _____

- (b) Eating healthy food _____
- (c) Biting your nails _____
- (d) Use tooth picks _____

6. A _____ is a doctor who treats our teeth. (nurse, dentist)

7. A new born baby has _____ teeth. (1, 32, 0)

8. Name the food we eat



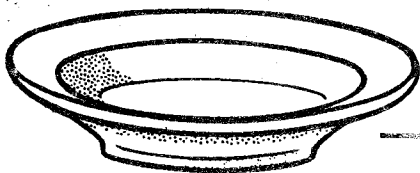


(c) _____



(maize, carrot, pineapple, fish)

9. We sleep on a _____



10. Name the utensils below




(plate, pot, folk, sufuria)

PSYCHOMOTOR/CREATIVE ARTS

1. Complete the pattern

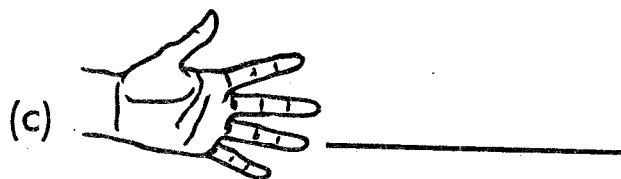



2. Colour the pictures (2mks)



3. We draw with _____ and _____


4. Name three body parts used when running



(ear, eye, leg, hand, nose)

C.R.E ACTIVITIES

1. Name the following God's creation



2. The bible is divided into two parts, the _____ and _____ (new and old, black and red)

3. Psalms 139:13 "You created every part of me: You put me together in my mother's _____ (mouth, womb, eye)

4. Jesus was born in _____

5. The mother of Jesus was called _____ while the father was _____


6. Name the three members of extended family

(a) _____

(b) _____

(c) _____

7. What is this



8. _____ saw a burning bush. (David, Moses)

IRE

1. Muslims follow the teachings of _____ (Quran, gospel, sheitwan)


2. According to Surah Al-fatiha, Allah is the master of _____ (Yaumul-Oyama, Yaumul Eid)

3. The prophet (SAW) was born in the month of _____

4. I do _____ when I visit the toilet. (Istijmar, Istinjai, ta-yammum)

5. We should not enter the toilet with _____ (Qurai, water, clothes)

6. Draw a mosque (2mks)



7. Name three Allah's creation

(a) _____

(b) _____

(c) _____