

# DISCOVERY NATIONAL EXAMINATIONS

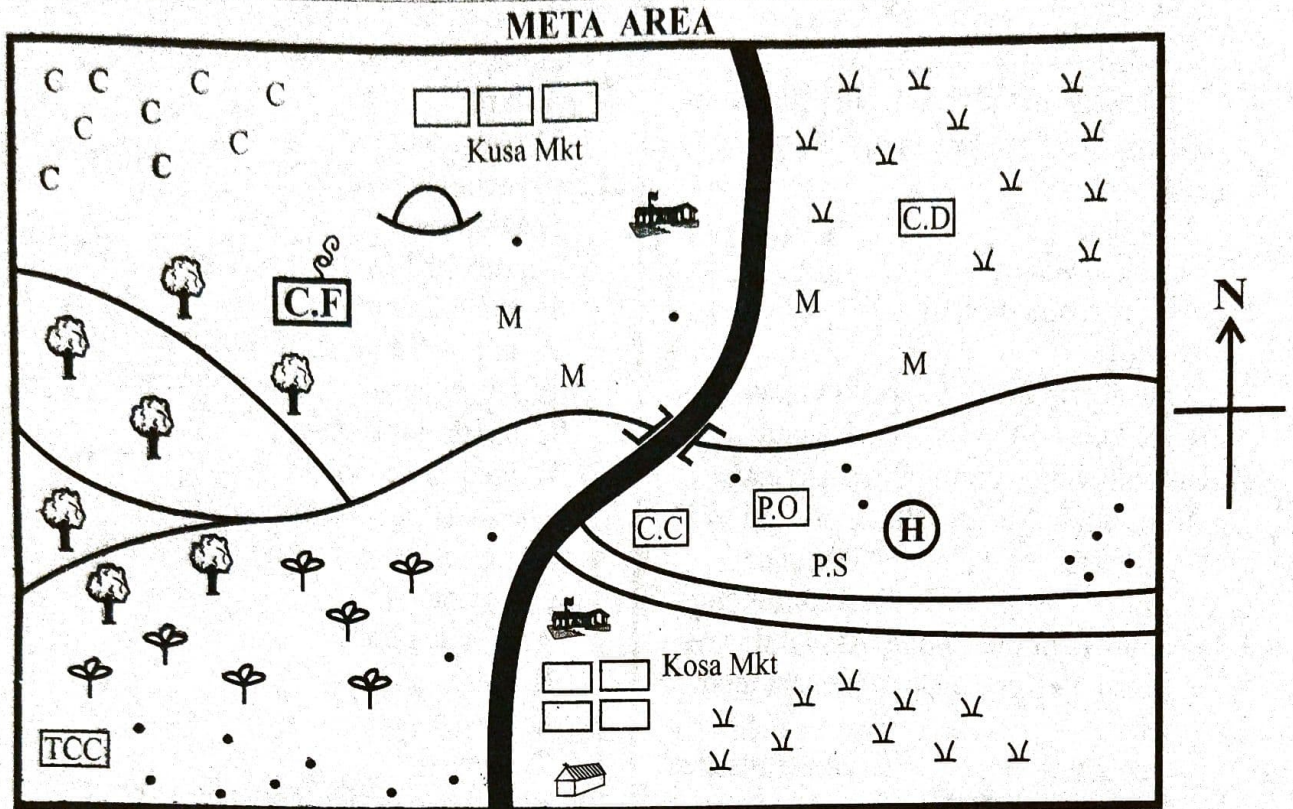
## STANDARD SIX - YEAR 2021

### SOCIAL STUDIES & C.R.E



001

Time : 2 hours 15 minutes



Scale: 0 1 2 3 4 5 6 7 8 9 10 11 12 13 14 15 16 17 Km

#### KEY

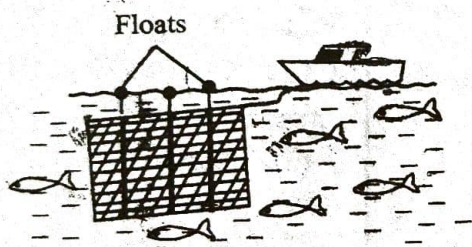
Forest	Tarmac road	Shrine
River & Bridge	Murrum road	Chief's camp
Tea	Settlements	School
Coffee	Grass	Hospital
Tea collection center	Maize	Police station
Coffee factory	Cattle dip	Church
		Post office

Study the map of Meta Area above and use it to answer questions 1 to 7.

- Meta area is likely to be a;
  - Location
  - District
  - County
  - Sub-county
- River Meta flows from \_\_\_ to \_\_\_
  - West to East
  - East to West
  - North to South
  - West to North
- What is the climate of the western side of Meta area?
  - Hot and dry
  - Cool and dry
  - Cool and wet
  - Hot and wet
- A thief was caught breaking into a shop in Kusa market. The best action for the people to take was;
  - take him to the chief office
  - take him to the police station
  - beat him to death
  - take him to church for the prayers
- People near Kusa market belong to \_\_\_ religion;
  - Christianity
  - Hindu
  - Islam
  - Traditional religion



6. What is the direction of the tea collection center from the post office?  
 A. North east                      B. South west  
 C. South east                      D. North west
7. The main means of transport in Meta area is;  
 A. Railway                      B. Water  
 C. Road                      D. Air
8. Which one of the following plateaus in Kenya is referred to as plateau within the plateau?  
 A. Nyika                      B. Merti  
 C. Uasin Gishu                      D. Yatta
9. All the rivers drain in lake victoria except?  
 A. R. Kerio                      B. R. Nzoia  
 C. R. Yala                      D. R. Mara
10. The following communities originated from South Sudan. Which one did **not**?  
 A. Maasai                      B. Rendile  
 C. Luo                      D. Karamojong
11. Members of the County Assembly are elected by Kenyans to represent **them** in their;  
 A. counties                      B. constituencies  
 C. wards                      D. senates
12. The fishing method shown in the diagram below is called;

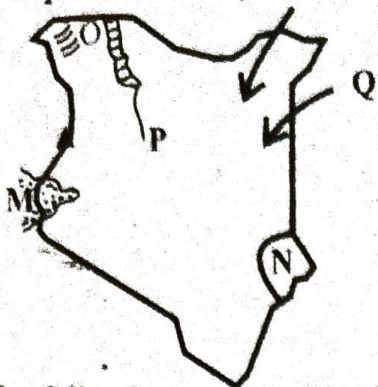


- A. purse seining                      B. trawling  
 C. net drifting                      D. basket fishing
13. Which one of the following lakes in Kenya is **not** a fresh water lake?  
 A. L. Naivasha                      B. L. Baringo  
 C. L. Turkana                      D. L. Magadi
14. The Bantus who had settled at Shungwaya later migrated into Kenya because of;  
 A. overpopulation  
 B. attacks by the Oromo  
 C. need for farming land  
 D. shortage of water

15. Below are ways of promoting peace in the country **except**?  
 A. tolerating other peoples opinions  
 B. obeying the laws of the land  
 C. inciting people to strike from work  
 D. respecting human rights
16. A person born in Kenyan by Kenyan parents became a Kenya citizen by;  
 A. birth  
 B. registration  
 C. recommendation  
 D. adoption
17. Disagreements in school can be caused by the following **except**;  
 A. fair distribution of learning materials  
 B. favoritism of some pupils by teachers  
 C. unfair punishment  
 D. unclear school rules
18. The **most** popular way of sending messages to very many people at the same time;  
 A. mobile phone  
 B. radio  
 C. newspapers  
 D. television
19. Which one of the following is **not** an element of a map?  
 A. scale  
 B. compass  
 C. size  
 D. title
20. Which one of the following minerals is **not** correctly matched with its method of mining;  
 A. sand - open cast  
 B. salt - evaporation  
 C. soda ash - dredging  
 D. limestone - open cast
21. Which one of the following was **not** a traditional method of teaching children;  
 A. story telling  
 B. imitation  
 C. composition writing  
 D. proverbs



Use the map of Kenya below to answer the questions that follows



22. The following communities followed the route marked Q except;

- A. Somali
- B. Rendile
- C. Oromo
- D. Maasai

23. The National reserve marked N is known as;

- A. Amboseli
- B. Boni
- C. Maasai mara
- D. Shiba hills

24. The following islands are found in the lake marked M except;

- A. Mfangano
- B. Rusinga
- C. Mageta
- D. Lamu

25. Name the plain marked Q

- A. Awara
- B. Bilesa
- C. Lotikipi
- D. Woyamdero

26. The mineral mined at the area marked P is;

- A. diatomite
- B. flourspar
- C. soda ash
- D. salt

27. Which one of the following communities resisted the imposition of colonial rule in Kenya?

- A. Ababukusu
- B. Abawanga
- C. Maasai
- D. Agikuyu

28. Which box below consist of **manufactured** industries only?

<p><b>A.</b></p> <p>Milk creamery Meat canning Sisal processing</p>	<p><b>B.</b></p> <p>Cement making Glass making Shoe making</p>
<p><b>C.</b></p> <p>Banking Watch repair Printing</p>	<p><b>D.</b></p> <p>Oil refinery Tobacco curing Plastic making</p>

29. The governor and the deputy governor are member sof the;

- A. County assembly
- B. National assembly
- C. County of executive communities
- D. National government

30. The following are methods of conserving wildlife .Which one is **not** ?

- A. Creating electronic fences around the parks
- B. Establishing animal orphanages
- C. Banning trade in wild animals products
- D. Encouraging poaching

31. The following are functions of the IEBC. Which one is **not**?

- A. To register voters
- B. To nominate candidates
- C. To appoint and train election officers
- D. To conduct civic education

32. Which one the following is **not** a method of rearing chicken?

- A. Herding
- B. Free range
- C. Deep litter
- D. Battery system

33. Which one of the following is **not true** about traditional agriculture?

- A. Farmers used simple tools
- B. It relied on family labor
- C. Was mainly on large scale
- D. Simple methods of farming were used

34. The arm of the government responsible for making and amending laws is;

- A. executive
- B. legislature
- C. judiciary
- D. police

35. Who was the first African to be norminated in the Legco?

- A. Jomo Kenyatta
- B. Harry Thuku
- C. Eliud Mathu
- D. Tom Mboya

36. The following consist of basic need of a family .Which one is **not**?

- A. food
- B. money
- C. shelter
- D. clothing

37. Lawlessness will lead to all the following **except**;

- A. slow development
- B. fear
- C. loss of life and property
- D. rapid development



38. The following are facts about a traditional

African leader;

i) led the community in resisting the British rule

ii) administered oath in the shrines

iii) was arrested and deported to Gusii land

The leader described is;

A. Laibon Lenana

B. Koitalel Arap Samoei

C. Mekatilili wa Menza

D. Nabongo Mumia

39. The religious leader among the Ameru was called?


A. Njuri Ncheke

B. Mugwe

C. Laibon

D. Orkoiyot

Use the diagram below to answer questions 40-41.



40. The above diagram shows the formation of;

A. orographic rainfall

B. convectional rainfall

C. sea breeze

D. land breeze

41. Which one of the following countries in Kenya receive the above type of rainfall?

A. Kisumu

B. Mombasa

C. Homa bay

D. Meru

42. Magadi town is densely populated mainly because;

A. it receives high rainfall

B. mining activities around L. Magadi

C. good infrastructure

D. warm climate

43. Kenya became a republic on;

A. 20th October 1952

B. 1st June 1963

C. 12th Dec 1964

D. 12th Dec 1963

44. Which weather instrument below is correctly matched with its aspect of weather it used to measure;

A. windsock - speed of wind

B. rain gauge - amount of rainfall

C. thermometer - pressure

D. wind vane - strength of wind

45. The type of trade where goods are exchanged for other goods is called ;

A. currency trade

B. goods trade

C. international trade

B. barter trade

46. The most developed means of transport in Kenya is;

A. road

B. air

C. pipeline

D. railways

47. Which one of the following communities in Kenya does not belong to central bantus?

A. Ameru

B. Akamba

C. Mijikenda

D. Agikuyu

48. Which one of the following is a way of practicing democracy in schools?

A. Bullying others

B. Electing club officials

C. Forcing children to join clubs

D. Teachers appointing class prefects

49. Which one of the following trees is an example of planted forest?

A. Jilore

B. Aberdare

C. Mau

D. Turbo

50. The famous Kamba leader who was also a long distance trader was called;

A. Kimnyole

B. Masaku

C. Mekatilili

D. Lenana

51. Which one of the following is not an age set among the Kalenjin?

A. Maina

B. Kipkoimet

C. Kipng'etich

D. Kaplalech

52. Which one of the following is not a hardwood tree?

A. Mvule

B. Camphor

C. Cedar

D. Elgon teak

53. The following are tourist attractions in Kenya. Which one is not?

A. Beautiful people

B. Sandy beaches

C. Wildlife

D. Culture attraction



54. The best means of transporting oil from Changamwe in Mombasa to Nairobi and other towns is by;  
 A. tankers B. pipeline  
 C. railways D. air
55. Sanye and Dahalo are examples of;  
 A. Eastern cushites  
 B. Southern cushites  
 C. Plain nilotes  
 D. Coastal bantus
56. The main problem facing wildlife in Kenya is;  
 A. insecurity  
 B. pest and diseases  
 C. poaching  
 D. drought
57. The most distractive form of soil erosion is;  
 A. sheet erosion  
 B. gulley erosion  
 C. rill erosion  
 D. splash erosion
58. Which one of the following is **not** a dairy cattle breed?  
 A. Aberdeen Angus B. Freshian  
 C. Guernsey D. Jersey
59. The type of democracy where people elect leaders to make decisions on their behalf is called;  
 A. participatory democracy  
 B. direct democracy  
 C. indirect democracy  
 D. pure democracy
60. The act of showing love to ones country is known as ;  
 A. citizenship B. loyalty  
 C. kindness D. patriotism
62. The sign of covenant between Noah and God is;  
 A. circumcision B. lightening  
 C. the rainbow D. thunder
63. The eldest son of Jacob was  
 A. Benjamin B. Rueben  
 C. Joseph D. Judah
64. Who was the father of John the Baptist?  
 A. Elikana B. Zecharia  
 C. Joseph D. Moses
65. Abraham was told to go and sacrifice Isaac on Mt;  
 A. Ararat B. Sinai  
 C. Moriah D. Carmel
66. God appeared to Moses;  
 A. in a cloud B. in lightening  
 C. in a burning bush D. in a loud voice
67. Which prophet annointed the first King of Israel?  
 A. Elijah B. Elisha  
 C. Nathan D. Samuel
68. King David annoyed God when he:  
 A. committed adultery  
 B. built a big temple  
 C. killed Goliath  
 D. worshiped idols
69. The new covenant was to be written:  
 A. in the Bible  
 B. in people's hearts  
 C. on a scroll  
 D. on the walls
70. The greatest commandment according to Jesus is:  
 A. do not steal  
 B. love the lord your God  
 C. do not commit adultery  
 D. worship no other god but me
71. \_\_\_\_\_ referred to Jesus as the lamb of God.  
 A. Bartimaeus B. John the Baptist  
 C. Isaiah D. Jeremiah
72. Who were the two people who were in the temple during the dedication of Jesus:  
 A. Prophetess Anna and Simeon  
 B. Elijah and Moses  
 C. Herod and Pilate  
 D. Mary and Martha

### C.R.E

61. According to Genesis stories of creation why was man chased in the garden of Eden?  
 A. He talked to the serpent  
 B. He disobeyed God  
 C. He needed a farm to work on  
 D. He chose to live outside the garden



73. Which one of the following miracles was performed by Jesus at Bethany?  
 A. Raising Lazarus  
 B. Raising Tabitha  
 C. Raising Jairus' daughter  
 D. Raising a widows son
74. The parable of the good Samaritan teaches us to:  
 A. forgive others  
 B. help the needy  
 C. obey God's word  
 D. avoid temptation
75. Happy are those who mourn for;  
 A. they will see God  
 B. God will be merciful to them  
 C. God will comfort them  
 D. God will satisfy them fully
76. Who among the following people was healed from blindness?  
 A. Lazarus  
 B. Bartimeaus  
 C. Centurion's servant  
 D. Jairus' daughter
77. Jesus ascended to heaven at a place called:  
 A. Jericho  
 B. Bethany  
 C. Nazareth  
 D. Jerusalem
78. We celebrate the resurrection of Jesus on:  
 A. Easter Monday  
 B. Easter Sunday  
 C. Good Friday  
 D. Sabbath day
79. We are not true witnesses of Christ if we:  
 A. help the needy  
 B. live holy lives  
 C. obey God's commandments  
 D. accuse others falsely
80. According to the apostle's creed, Jesus will come again as a:  
 A. judge  
 B. saviour  
 C. king  
 D. friend
81. The Holy Spirit descended on the apostles on the day of:  
 A. Pentecost  
 B. Passover  
 C. Easter  
 D. Good Friday
82. Who raised Tabitha?  
 A. Peter  
 B. Paul  
 C. Jesus  
 D. John
83. Which one of the following is **not** one of the books of the Bible?  
 A. David  
 B. Kings  
 C. Samuel  
 D. Job
84. In Traditional African Societies, which one of the following roles was carried out by boys?  
 A. Cooking  
 B. Fetching water  
 C. Cleaning  
 D. Herding
85. We should have responsible sexual behaviour because;  
 A. we can be punished  
 B. our bodies are temples of God  
 C. it cannot cause death  
 D. we are not ready to become parents
86. Christians should take care of plants and animals because;  
 A. we eat them  
 B. it is the law of the land  
 C. they attract tourists  
 D. they are God's creation
87. Rich christians should help the community by;  
 A. throwing parties to celebrate  
 B. buying people new clothes  
 C. helping the needy  
 D. visiting new places
88. We should all respect leaders because;  
 A. they are rich  
 B. they are famous  
 C. they can punish us  
 D. they are chosen by God
89. The believers in Christ were first called christians at a place called;  
 A. Jerusalem  
 B. Rome  
 C. Antioch  
 D. Canaan
90. Who among the following made poor choices?  
 A. Abraham  
 B. Ananias  
 C. Ruth  
 D. Matthew