



PRECIOUS SERIES 2021

SOCIAL STUDIES & C.R.E

STEPPING - IN

6

001

READ THESE INSTRUCTIONS CAREFULLY

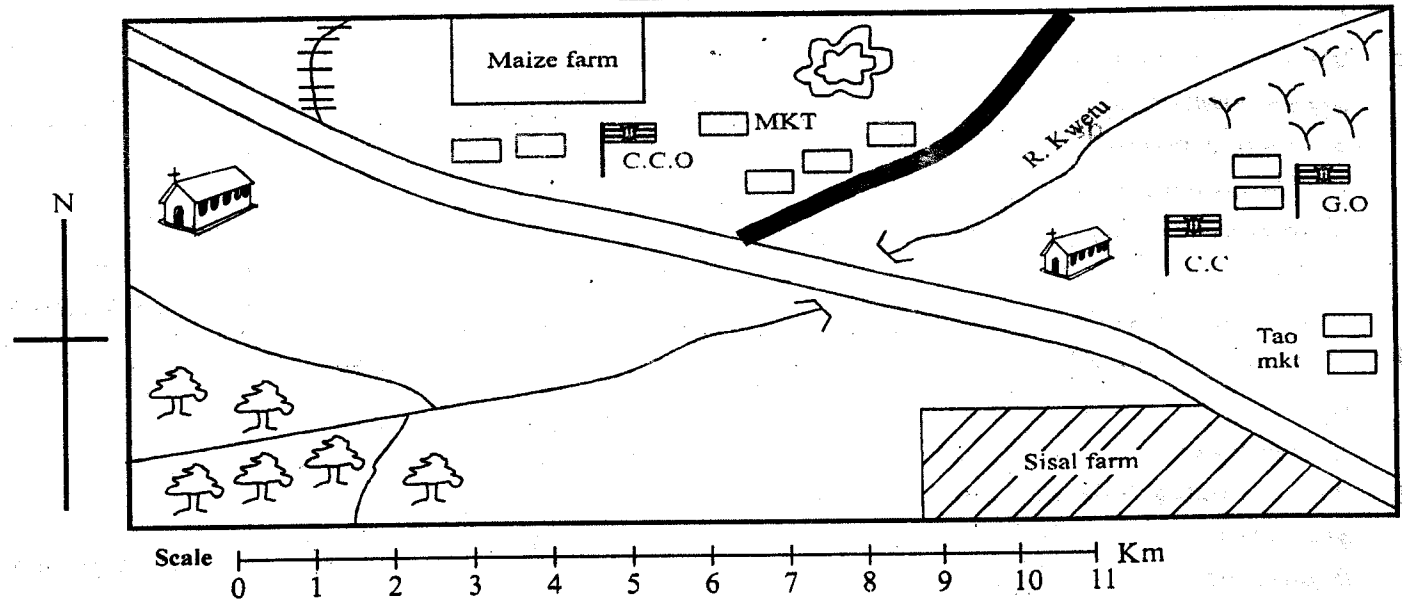
- You have been given this question paper and a separate answer sheet. The question paper contains 90 questions.
- Make sure that you have written on the answer sheet

TIME: 2HRS 15MINS

(i) Your name

(ii) Name of your school

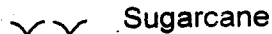
CHACHA AREA



Key:-



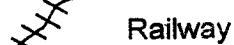
Forest




Sugar cane



C.C.O County Commissioner Office



Railway



Church

MKT Market



Tarmac road



G.O Governor's office



Quarry



C.C Chief's camp



Permanent building



Murram road

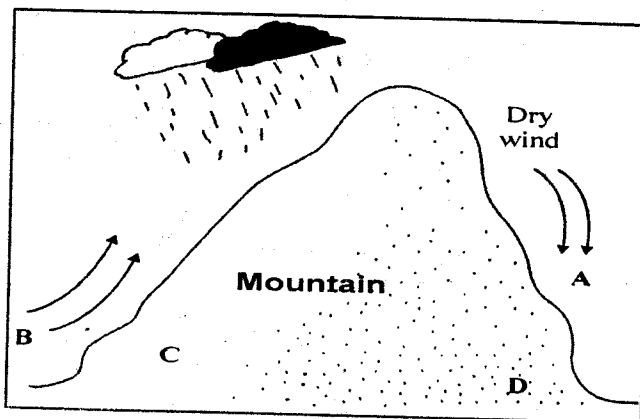
Study the map of Chacha Area and answer questions 1 - 7.

- What is the direction of the church from the forest?
A. South B. North
C. West D. East
- People of Chacha area are mainly
A. Muslims B. Hindus
C. Christians D. Pagans

- Which form of transport is mainly used in Chacha area?
A. Air B. Railway
C. Water D. Road
- Which of these economic activities is **not** carried out in Chacha area?
A. Fishing B. Trading
C. Transport D. Crop growing

5. What shows that mining takes place in the area? Presence of
 - A. houses
 - B. a governor's office
 - C. a market
 - D. a quarry
6. The head of administration in Chacha area is the
 - A. governor
 - B. chief
 - C. senator
 - D. police
7. Which of these statements is true about the area shown on the map?
 - A. There is no source of water
 - B. The area has no transport system
 - C. Maize is the only cash crop grown in the area
 - D. River Kwetu has tributaries
8. The following are Highland Nilotes **except**;
 - A. Kipsigis
 - B. Nandi
 - C. Marakwet
 - D. Pokomo
9. Small streams of rivers joining the main river are called
 - A. streams
 - B. tributaries
 - C. springs
 - D. distributaries
10. Which one of the following is a fresh water lake?
 - A. L. Magadi
 - B. L. Nakuru
 - C. L. Bogoria
 - D. L. Victoria
11. One of the following is a modern way of communication. Which one is it?
 - A. Horn blowing
 - B. Drum beating
 - C. Telephone calls
 - D. Smoke signals
12. Which of the following national holidays do Kenyans celebrate on 1st June?
 - A. Madaraka day
 - B. Jamhuri day
 - C. Labour day
 - D. Mashujaa day
13. Several age groups make
 - A. a community
 - B. an age set
 - C. a clan
 - D. a society
14. The following communities are Highland Nilotes **except**;
 - A. Kipsigis
 - B. Nandi
 - C. Marakwet
 - D. Pokomo

15. The diagram below shown the formation of a certain types of rainfall



The side marked **B** is called

- A. rain shadow
 - B. rain side
 - C. wind ward side
 - D. leeward side
16. A farmer who grows crops and keeps livestock practices
 - A. mixed farming
 - B. crop growing
 - C. livestock keeping
 - D. subsistence farming
 17. Who among the following people are responsible for keeping law and order in Kenya?
 - A. Members of parliament
 - B. The county representatives
 - C. Police
 - D. Chiefs
 18. Which one of the following is **not** a cause of conflicts in the society?
 - A. Selfishness
 - B. Hatred
 - C. Theft
 - D. Love
 19. The county assembly members represents a
 - A. constituency
 - B. location
 - C. country
 - D. ward
 20. Which one of the following is **not** a benefit of industries?
 - A. They are a source of employment
 - B. They pollute both air and water
 - C. Industrial exports earn the country foreign exchange
 - D. They lead to establishment of towns

52. Which one of the following is an cause of disagreements in school?
- Good performance in exams
 - Reliable communication between teachers and pupils
 - Involving pupils in making school rules
 - Breaking school rules
53. Zero grazing is practised in many places mainly because
- farmers have small pieces of land
 - it is more profitable
 - it is cheap to maintain the animals
 - it is recommended by veterinary doctors
54. Which one of the following methods is commonly used for fishing in oceans?
- Gill net
 - Purse - seining
 - Hook and line
 - Basket trap
55. Which one of the following species is a soft wood tree?
- Meru oak
 - Elgon teak
 - Camphor
 - Cypress
56. The main problem facing wildlife in Kenya is .
- drought and famine
 - flooding during rainy seasons
 - overgrazing
 - poaching
57. Which one of the following is not a type of service industry?
- Hotel and accommodation
 - Tourism
 - Banking
 - Vehicle assembly
58. Which one of the following is the best way of transporting petroleum from Mombasa to Kisumu?
- Railway
 - Water
 - Pipeline
 - Air
59. Which one of the following actions shows responsible citizenship?
- Obeying the laws of the country
 - Taking your neighbour's things without permission
 - Encouraging people to fight one another
 - Creating a shortage of goods by refusing to sell them to people

60. Three of the following are ways of protecting children from child abuse. Which one is not?
- Encouraging children to study hard
 - Providing counselling services to victims
 - Educating children on their rights
 - Giving stiff punishments to child abusers

C.R.E

61. God created human beings in his own image and
- likeness
 - sight
 - good
 - creator
62. The ark of Noah rested on mount
- Sinai
 - Moriah
 - Ararat
 - Carmel
63. Who among the following was not a son of Noah?
- Abel
 - Ham
 - Shem
 - Japheth
64. King David killed Goliath with
- leaf
 - panga
 - string
 - stone
65. God gave Moses the ten commandments at mt.
- Carmel
 - Ararat
 - Sinai
 - Olive
66. Who led the Israelites to Canaan?
- Joshua
 - Daniel
 - Moses
 - Haran
67. Emmanuel means
- our saviour
 - God with us
 - the father of faith
 - the prince of peace
68. When he was called by God, Abraham was living in
- Haran
 - Ur
 - Bethlehem
 - Canaan
69. Who among the following was the first king of Israel?
- David
 - Saul
 - Solomon
 - Ahab
70. Who were the first people to see baby Jesus?
- Wisemen
 - Shepherds
 - Soldiers
 - Women

71. "Whenever you go I will go. Your people shall be my people and your God will be my God". Who said these words?
 A. Naom B. David
 C. Mahlon D. Ruth
72. How many times did the devil tempt Jesus?
 A. One B. Three
 C. Two D. Four
73. One of the following was Solomon's request to God. Which one?
 A. Wealth
 B. Wisdom
 C. Long life
 D. Protection from enemies
74. Jesus was a refugee in
 A. Bethlehem B. Egypt
 C. Nazareth D. Jerusalem
75. Which one of the following is a gift of the Holy spirit?
 A. Faith B. Humility
 C. Joy D. Kindness
76. Who among the following were put in prison?
 A. Paul and Silas
 B. John and James
 C. Paul and John
 D. David and Jonathan
77. Joseph forgave his brothers by
 A. giving them work
 B. welcoming them
 C. chasing them away
 D. reporting them to the king
78. Who among the following was called by God four times?
 A. Samuel B. David
 C. John D. Noah
79. Who among the following people denied Jesus?
 A. Judas Iscariot B. Simon Peter
 C. James D. Barabbas
80. Who among the following cheated God?
 A. Peter and John
 B. Ruth and Naom
 C. Annania and Simeon
 D. Annania and Saphirah
81. Which of the following is the greatest commandment?
 A. Love your neighbour as you love yourself
 B. Do not worship idols
 C. Do not steal
 D. Love God with all your mind, heart, soul
82. Honesty means
 A. sharing with others B. talking with people
 C. telling the truth D. loving others
83. The name given to the day God rested is
 A. Christmas day B. sabbath day
 C. Pentecost D. Passover
84. The disciples received the Holy spirit during the day of
 A. Passover B. Pentecost
 C. Last supper D. Christmas
85. The wife of Moses was called
 A. Deborah B. Miriam
 C. Rahab D. Zipporah
86. The first person to disobey God was
 A. Isaac B. Eve
 C. Adam D. Abraham
87. In the parable of the sower, Jesus used the word seeds to mean
 A. the word of God B. the people
 C. the sower D. the observers
88. Jesus died on the
 A. tree B. cross
 C. heaven D. road
89. Where was Jesus baptised?
 A. Galilee B. River Jordan
 C. River Nile D. Euphrates
90. Who was thrown into the den of lions?
 A. Peter B. Samuel
 C. Daniel D. John