

MONITORING LEARNERS PROGRESS

SASON
002


GRADE 4 - YEAR: 2021

Time: 1 Hr 40 Min.


ART & CRAFT / MUSIC & PHYSICAL HEALTH EDUCATION

ART & CRAFT


1. Using your pencil show light and dark gradation on the pot below. (2 marks)



2. What is still-life drawing? _____ (2 marks)
3. Create a still-life composition consisting of a cup, jug and glass in the space below. (5 marks)




4. What is painting? _____ (2 marks)
5. What is crayon etching? _____ (2 marks)
6. Create a tonal value on the cylindrical form below. (5 marks)



7. List any 4 sharp objects that can be used in crayon etching. (4 marks)

8. On the space below draw a proportional human form. (5 marks)



9. List 3 materials that are needed when creating still life composition using smudge technique. (3 marks)

Assessment Rubrics - Art & Craft

Level	4	3	2	1
Score	28 - 30	19 - 27	10 - 18	0 - 9

MUSIC

1. Outline 5 types of songs. (5 marks)

2. What is solo performance? (2 marks)

3. What is choral performance? (2 marks)

4. Write the **first verse** of the national anthem in Kiswahili. (5 marks)

5. Write the meaning of the following terms.

(a) Pitch - _____

(b) Tempo _____ (2 marks)

(c) Rhythm - _____ (2 marks)

_____ (2 marks)

6. What is a folk song? _____ (2 marks)

7. Outline 4 safety measures that should be observed when performing a folk song. (4 marks)

8. List 4 musical instruments that can be played when performing folk songs. (4 marks)

Assessment Rubrics - Music

Level	4	3	2	1
Score	28 - 30	19 - 27	10 - 18	0 - 9

PHYSICAL & HEALTH EDUCATION

1. An athletics track has the starting point and the _____ (1 mark)

2. Name 4 games you can play on an athletics track. (4 marks)

3. Name 4 harmful substances that should be removed from an athletics track. (4 marks)

4. What is fair play? _____ (1 mark)

5. State one place where you can get an athletics track in your locality. (1 mark)

6. When you are injured when playing at school, who should you tell? (1 mark)

7. List 4 locally available materials that can be used to improvise a ball. (4 marks)

8.



The boy is _____ (1 mark)

9. Draw an improvised ball in the space below. (2 marks)

10. Outline 4 safety measures that should be observed when improvising a ball. (4 marks)

11. Give 2 importance of honesty during games. (2 marks)

12. I can kick a ball using my _____ (1 mark)

13. State 3 items that we can use when hand juggling. (3 marks)

Assessment Rubrics - Physical & Health Education

Level	4	3	2	1
Score	28 - 30	19 - 27	10 - 18	0 - 9