

# COMPETENCY BASED CURRICULUM

GRADE 3 - YEAR: 2021

## MATHEMATICAL ACTIVITIES

SASON  
002

Name: \_\_\_\_\_

Learner's Number:

Gender: Boy  Girl

County Name: \_\_\_\_\_ County code

Sub-county Name: \_\_\_\_\_ Sub-county code

School Name: \_\_\_\_\_ School code

The grid below is to be filled by the teacher  
after marking the learner's work.

	Level 1	Level 2	Level 3	Level 4
Task 1				
Task 2				
Task 3				
Task 4				
Task 5				

1. Write these numbers in words.

(3 marks)

a) 61 - \_\_\_\_\_

b) 82 - \_\_\_\_\_

c) 104 - \_\_\_\_\_

2. Write the missing numbers.

(3 marks)

a) 

2		6	8	10
---	--	---	---	----

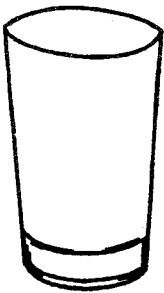
b) 

5	10	15		25
---	----	----	--	----

c) 

18	17		15	14
----	----	--	----	----

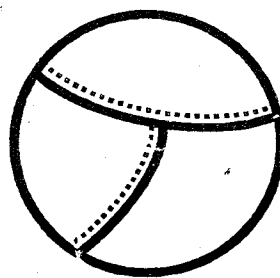
3. Janet arranged the following objects. Glass is in the first position. (3 marks)




Glass



Pen



Ball



Phone

a) Which object is in the third position? \_\_\_\_\_

b) Which object is in the second position? \_\_\_\_\_

c) The phone is in the \_\_\_\_\_ position.

4. Add:

(4 marks)

$$\begin{array}{r} \text{a)} \quad 3 \\ \quad 6 \\ + \quad 5 \\ \hline \\ \hline \end{array}$$

$$\begin{array}{r} \text{b)} \quad 16 \\ + \quad 12 \\ \hline \\ \hline \end{array}$$

$$\begin{array}{r} \text{c)} \quad 81 \\ + \quad 5 \\ \hline \\ \hline \end{array}$$

$$\begin{array}{r} \text{d)} \quad 74 \\ + \quad 9 \\ \hline \\ \hline \end{array}$$

5. Takeaway:

(4 marks)

$$\begin{array}{r} \text{a)} \quad 9 \\ - \quad 8 \\ \hline \\ \hline \end{array}$$

$$\begin{array}{r} \text{b)} \quad 40 \\ - \quad 20 \\ \hline \\ \hline \end{array}$$

$$\begin{array}{r} \text{c)} \quad 58 \\ - \quad 5 \\ \hline \\ \hline \end{array}$$

$$\begin{array}{r} \text{d)} \quad 96 \\ - \quad 4 \\ \hline \\ \hline \end{array}$$

6. William had 58 hens. He sold 7 hens. How many hens did he remain with? \_\_\_\_\_ (1 mark)

7. Caren had 16 bananas. Her mother added her 8 more bananas. How many bananas did she have altogether? \_\_\_\_\_ (1 mark)

8. Multiply:

(3 marks)


a)  $5 \times 4 =$  \_\_\_\_\_ b)  $6 \times 8 =$  \_\_\_\_\_ c)  $10 \times 5 =$  \_\_\_\_\_

9. Divide:

(3 marks)

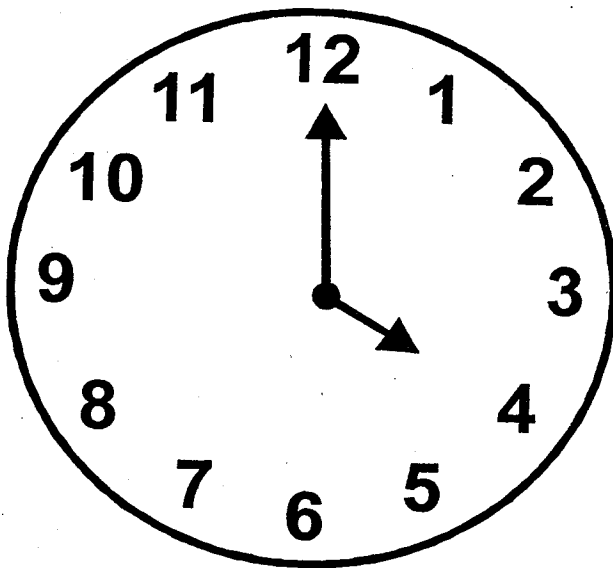
a)  $25 \div 5 =$  \_\_\_\_\_ b)  $20 \div 4 =$  \_\_\_\_\_ c)  $30 \div 3 =$  \_\_\_\_\_

10. Who is heavier?



\_\_\_\_\_ (1 mark)

11. What is the time?

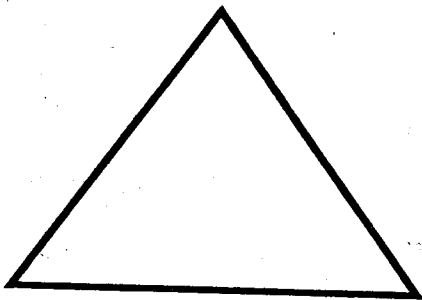


\_\_\_\_\_ (1 mark)

2. Waweru had Sh. 50. Alice has Sh. 20. How much money did they have altogether? \_\_\_\_\_ (1 mark)


3. Name the following shapes. (2 marks)

a)



\_\_\_\_\_

b)



\_\_\_\_\_

(Rectangle, triangle, circle)

**Assessment Rubrics - Mathematics**

Level	4	3	2	1
Score	28 - 30	19 - 27	10 - 18	0 - 9