

TARGETER WINGS
MONITORING LEARNER'S PROGRESS
GRADE 3 - 2021



INTEGRATED LEARNING AREAS

Name

Gender:

Boy

Girl

School name

The teacher to fill the grid below after marking the learner's work.

	Hygiene and nutrition	Environmental Activities	CRE Activities	Creative Activities
Number of marks	15	15	10	10
Marks scored				

HYGIENE AND NUTRITION ACTIVITIES(15mks)

1. **Name two healthy habits that promote our well being (2marks)**
a) _____
b) _____
2. **Name three items we use to clean the class room (3mks)**
a) _____
b) _____
c) _____
3. **Name two common accidents at home (2mks)**
a) _____ b) _____
4. **When listening to the teacher, we should sit _____
(bending, upright, sleeping) (1mark)**
5. **Name two external parasites (2marks)**
a) _____ b) _____
6. **Tooth cavities in our teeth cause a lot of _____
(laughter, warmth, pain) (1mark)**
7. **Write two ways of contaminating water (2marks)**
a) _____
b) _____
8. **Draw and name two types of vegetables. (2marks)**











ENVIRONMENTAL ACTIVITIES (15mks)

1. **Name two unfavourable weather conditions (2mks)**
a) _____ b) _____
2. **Which soil feels; (3marks)**
a) Smooth _____
b) Rough _____
c) Medium _____
3. **Name two rights of a child. (2marks)**
a) _____
b) _____

4. Which part of a mango do we eat? _____ (1mark)
(roots, leaf, fruit)

5. Too much rain causes _____ (1mk)
(floods, drought, dryness)

6. Use the weather chart below to answer question 6 (a-c)

DAY	MORNING	EVENING
MONDAY		
TUESDAY		
WEDNESDAY		
THURSDAY		
FRIDAY		

- (a) Which day was rainy and windy? _____
(b) The best days for flying kites are _____ and _____
(c) The best day for washing clothes is _____

7. Name two sources of heat. (2marks)

a) _____ b) _____

8. Name one thorny plant _____ (1mark)

CRE ACTIVITIES (10marks)

1. Every part of my body was created by? _____ (1mk)

2. Name two gospel books in the bible? (1mk)

a) _____ b) _____

3. The father-in-law of Moses was called _____ (1mk)

4. _____ was called father of great faith.

(Moses, Abraham, Jethro) (1mk)

5. Who healed Naaman? _____ (1mk)
(Prophet Isaiah, Prophet Elisha, Prophet Elijah)
6. The commandment, Honour your father and mother has a
_____ (curse, hatred, promise) (1mk)
7. _____ is a christian value. (1marks)
(Rudeness, Disobedient, Honesty)
8. Name any household chores that you do at home _____ (1mk)
9. Adam and Eve lived in the garden of _____. (1mk)

MUSIC ACTIVITIES

1. Name five parts of the body that we use while dancing (5mks)


a) _____	d) _____
b) _____	e) _____
c) _____	
2. Name three materials used to improvise a shaker (3marks)

a) _____	c) _____
b) _____	
3. We sing the National Anthem on which days? (2marks)

a) _____	b) _____
----------	----------

CREATIVE ARTS ACTIVITIES (10marks)

1. Draw and colour a guitar (5mks)



2. What is a photomontage? (2mks)

3. Name 3 materials used to make a photomontage. (3mks)

a) _____	c) _____
b) _____	