

COMPETENCY BASED CURRICULUM

MONITORING LEARNER'S PROGRESS

GRADE 2 -YEAR 2021

2



MATHEMATICAL ACTIVITIES

LEARNER'S NAME:

LEARNER'S ADMISSION NO.

GENDER BOY GIRL

INSTRUCTIONS TO LEARNERS

1. This paper consists of 25 Questions.
2. Answer all the questions by circling / ticking the correct answer.

FOR OFFICIAL USE ONLY

SCORING GRID (25 Marks)

QUESTION	Numbers															Measurements				
	1	2	3	4	5	6	7	8	9	10	11	12	13	14	15	16	17	18	19	20
Mark (s)	1	1	1	1	1	1	1	1	1	1	1	1	1	1	1	1	1	1	1	1
Score																				

QUESTION	Geometry					TOTAL SCORE
	21	22	23	24	25	
Mark (s)	1	1	1	1	1	25
Score						

Assessment Rubric

Exceeds expectation	Meet expectation	Approaching expectation	Below expectation
4	3	2	1

1. How many balls are there?



2. $54 =$ _____ tens _____ ones

3. Write the missing number

20, 25, 30, 35, 40, _____

4. Shade $\frac{1}{2}$



5. Add 91 to 3 = _____

6. Ben had 5 pencils. He gave Peter 2 pencils. How many pencils was Ben left with? _____

7. = _____

8. $2 \times 7 =$ _____

9. Write in words

23 _____

10. Musa had 76 camels. He bought 22 more camels. How many camels does he have altogether? _____

11. Write the missing number

$77 - \square = 71$

12. Share 8 oranges equally between 2 pupils _____

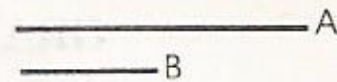
Write numbers and objects

Number	Objects
13. 6	
14. _____	

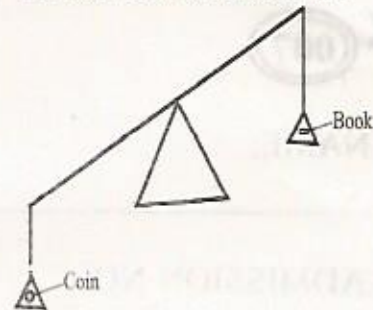
15. Write the missing numbers

5, 8, 11, _____, _____

16. Which one is longer?



17. Which one is heavier?



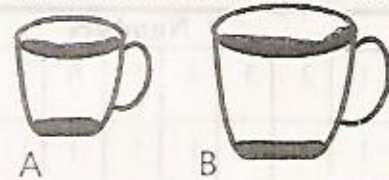
18. A year has _____ months.

19. How much money?



20. Which one is a need? _____
(ball, car, house)

21. Which one holds less water?



22. The first month of the year is _____

23. You were born in the month of _____

24. Draw a straight line

25. Complete the pattern

