

# TARGETER WINGS

## MONITORING LEARNER'S PROGRESS

### GRADE 1 - 2021



## INTEGRATED LEARNING AREAS

Name .....

Gender:

Boy

Girl

School name .....

The teacher to fill the grid below after marking the learner's work.

	Hygiene and nutrition	Environmental Activities	C.R.E. Activities	Creative Activities
Number of marks	15	15	10	10
Marks scored				

# HYGIENE ACTIVITIES (15mks)

1. Tick (✓) if it is a good behaviour (2mks)

- (a) Washing hands before eating.
- (b) Talking while eating.
- (c) Closing mouth while chewing.

2. Match food with where it is bought (1mk)



shop



open air market



hotel


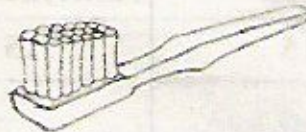


butchery

3. Name these common accidents at home (5mks)



4. Draw these things we use to clean the body (5mks)



5. Name these things found in the home.



\_\_\_\_\_



\_\_\_\_\_

(2mks)

## ENVIRONMENTAL ACTIVITIES (15mks)

1. Name these people who do different activities to make money.



\_\_\_\_\_



\_\_\_\_\_



\_\_\_\_\_

(5mks)



\_\_\_\_\_



\_\_\_\_\_

2. Name these things found at home.



\_\_\_\_\_



\_\_\_\_\_



\_\_\_\_\_

(5mks)




\_\_\_\_\_




\_\_\_\_\_


3. Draw these animals found at home. (5mks)




Cow



cat




dog



## C.R.E. ACTIVITIES

(10mks)

1. Who baptised Jesus? \_\_\_\_\_ (1mk)
2. Jesus was baptized in river \_\_\_\_\_ (1mk)
3. Jesus attended a wedding at \_\_\_\_\_ of Galilee. (1mk)
4. Jesus turned water into \_\_\_\_\_ (1mk)
5. Who healed Simon Peter's mother-in-law? \_\_\_\_\_ (1mk)
6. Who were the parents of Jesus? \_\_\_\_\_ and \_\_\_\_\_ (2mks)
7. Jesus was born in a city called \_\_\_\_\_ (1mk)
8. Draw and colour baby Jesus (2mks)



## ART, CRAFT & MUSIC (10mks)


1. Name the materials used to make this mosaic.

(6mks)



2. We paint a fabric using \_\_\_\_\_ and \_\_\_\_\_ (2mks)

3.  This is a \_\_\_\_\_. It is used for painting. (1mk)

4. This is a . It is played by \_\_\_\_\_ (2mks)

5. Write two materials that can be used to make a drum (2mks)

(a) tin c \_\_\_\_\_ ns

(b) rubber b \_\_\_\_\_ nds

Total = 50mks