

TARGETER WINGS
MONITORING LEARNER'S PROGRESS
GRADE 2 - 2021



MATHEMATICAL ACTIVITIES

Name

Gender:

Boy

Girl

School name

The teacher to fill the grid below after marking the learner's work.

| Strand | Numbers | Measurement | Geometry |
|------------------------|---------|-------------|----------|
| Question numbers | 1 - 7 | 8 - 10 | 11 |
| Number of marks | 43 | 4 | 3 |
| Number of marks scored | | | |

1. Subtract.

(5mks)

$28 - 17 = \underline{\hspace{2cm}}$

$38 - 23 = \underline{\hspace{2cm}}$

$46 - 14 = \underline{\hspace{2cm}}$

$57 - 35 = \underline{\hspace{2cm}}$

$95 - 60 = \underline{\hspace{2cm}}$

2. Add.

(5mks)

$$\begin{array}{r} 74 \\ + 18 \\ \hline \end{array}$$


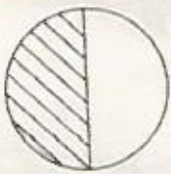
$$\begin{array}{r} 36 \\ + 58 \\ \hline \end{array}$$

$$\begin{array}{r} 45 \\ + 39 \\ \hline \end{array}$$

$$\begin{array}{r} 62 \\ + 28 \\ \hline \end{array}$$

3. Circle the bigger fraction.

(2mks)



4. Write the missing number.

(3mks)

100, 95, 90, 85, _____, 75

70, 60, 50, 40, _____, 20

65, 60, 55, 50, _____, 40

5. Write the numbers in symbols or words.

(5mks)

Fifty _____

Eighty five _____

20 _____

15 _____

Sixty seven _____

6. Place value.

(5mks)

62 is _____ hundreds _____ tens _____ ones.

78 is _____ hundreds _____ tens _____ ones.

0 hundreds 8 tens 6 ones = _____

1 hundreds 0 tens 0 ones = _____

97 is _____ hundreds _____ tens _____ ones.

7. Multiply.

(5mks)

$10 \times 3 =$ _____

$10 \times 8 =$ _____

$10 \times 7 =$ _____

$10 \times 9 =$ _____

10

x 4

8. Divide.

(5mks)

$4 \div 2 =$ _____

$8 \div 4 =$ _____

$9 \div 3 =$ _____

$10 \div 5 =$ _____

Mary shared 15 bananas equally among 5 children. How many bananas did each child get? _____

9. Write from number 40 to 36 counting backward.


(5mks)

MEASUREMENTS


10. Which is shorter than, longer than or same as?

(6mks)


(3mks)

A 


B is _____ D

B 

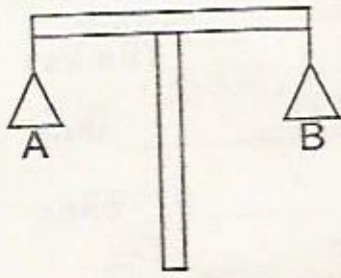
A is _____ B

C 

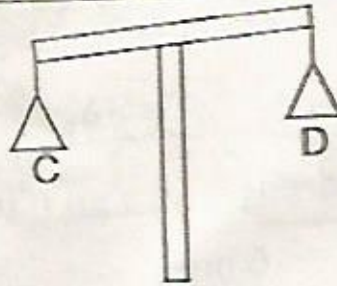
C is _____ A

D 

11. Write heavier than, lighter than or same as.

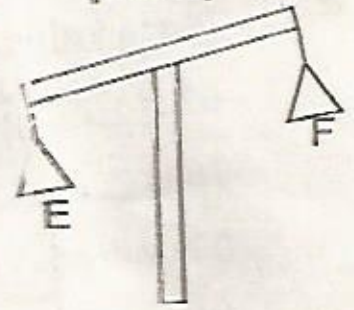


A is _____ B



C is _____ D

(3mks)



F is _____ E

GEOMETRY

(4mks)

12. Which one is a straight line?



A

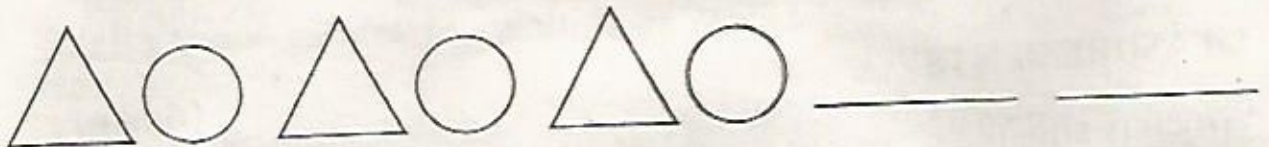


B

13. Draw a triangle.

14. Complete the pattern.

(2mks)



TOTAL = 50 Marks