



CODE0072021

TIMER NATIONAL SERIES

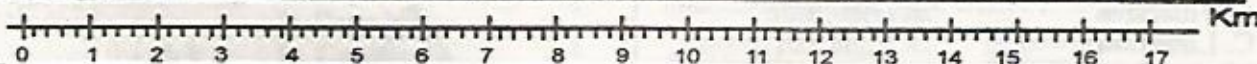
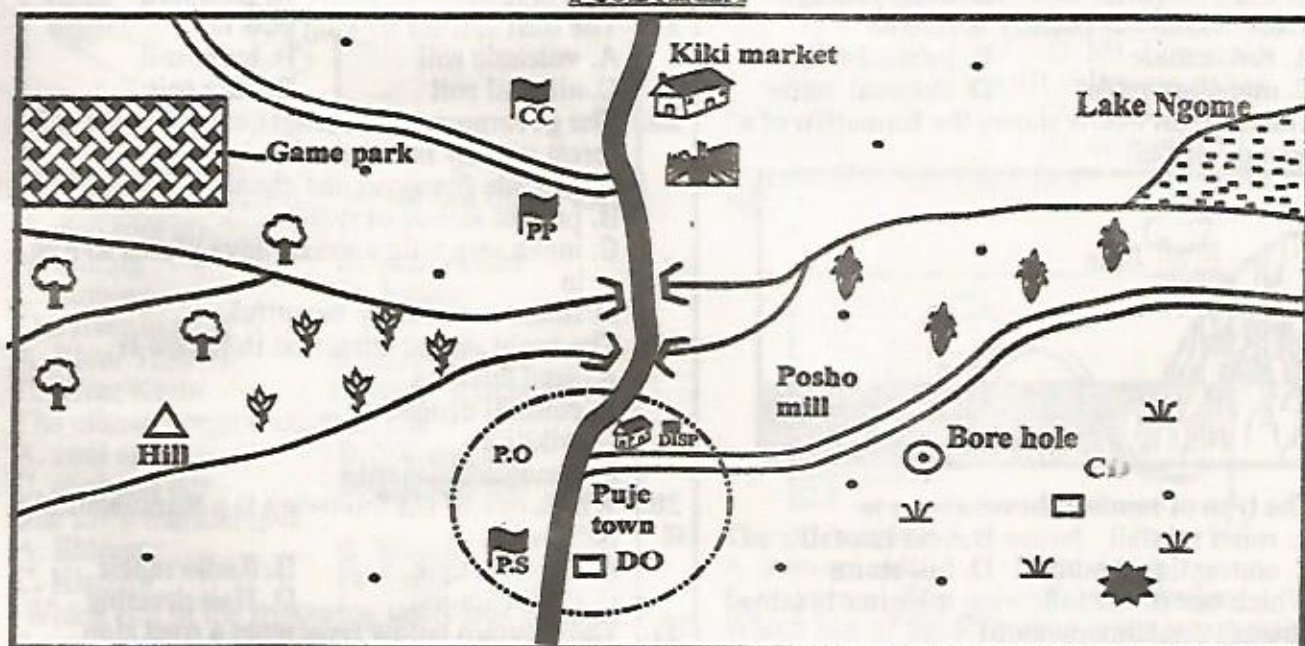
EVALUATION TEST

STD 5 SOCIAL STUDIES & CRE

{5}

Time: 2 hrs 15 min

PUJE AREA



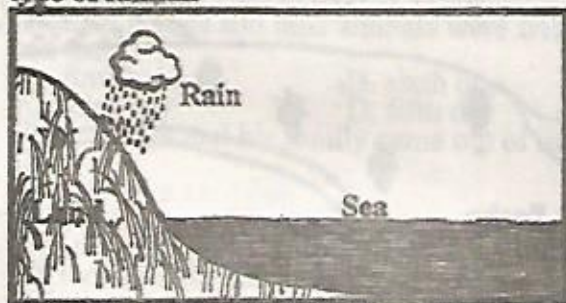
Maize	Forest	Police Post	Tarmac road	Permanent buildings
Church	Settlement	School	Murrum road	Police Station
Tea	Grass	Cattle Dip	River	Town boundary
P.O Post Office	Chief's Camp	Quarry	Borehole	

Study the map of Puje area and answer questions 1 to 7.

- What is the direction of the cattle dip from the game park?
A. South east B. North east
C. South west D. North west
- Which one of the following resources is not found in Puje area?
A. Railway line B. Minerals
C. Forest D. Wildlife
- Three of the following economic activities are carried out in Puje area **except**:-
A. mining B. fishing
C. farming D. trading
- The **main** source of water for the people of Puje town is :-
A. a lake B. a river
C. a borehole D. a well
- Which one of the following physical features is not found in Puje area?
A. A river B. A lake
C. Hill D. Swamp
- The administrator in charge of Puje area is a:-
A. District officer
B. Chief
C. Governor
D. County Commissioner

- Which other crop can be grown in the western part of Puje area?
A. Sisal B. Wheat
C. Cotton D. Coffee
- The compass direction that is found between West and South west is :-
A. West North West
B. South South west
C. West south west
D. East south east
- Which one of the following statements is **true** about the position of Kenya?
A. It lies East of Somalia
B. It lies South of Ethiopia
C. It is located west of Uganda
D. It lies South of Tanzania
- Which one of the following language groups consists of Eastern cushites only?
A. Dohalo, Burji, Somali
B. Keiyo, Boran, Samburu
C. Boran, Sanye, Oromo
D. Rendile, Gabbra, Somali
- The population density in the Kenya highlands can be described as
A. low B. medium
C. high D. scattered

12. Things that guide us on how to behave and live well with others are called
 A. moral values B. behaviour
 C. gestures D. habits
13. Which one of the following is a fresh water lake in the rift valley?
 A. Lake Nakuru B. Lake Magadi
 C. Lake Bogoria D. Lake Baringo
14. Trade within our country is referred to as
 A. barter trade B. internal trade
 C. monetary trade D. external trade
15. The diagram below shows the formation of a type of rainfall



The type of rainfall shown above is

- A. relief rainfall B. acid rainfall
 C. convectional rainfall D. hill storm
16. Which one of the following minerals is mined through dredging method?
 A. Fluorspar B. Diatomite
 C. Limestone D. Soda ash
17. Marine fishing in Kenya is mainly done in
 A. Indian ocean B. Lake Naivasha
 C. Lake Victoria D. River Tana
18. The original homeland of the Semites was
 A. South Sudan B. Arabia
 C. Horn of Africa D. Congo forest
19. Which one of the following groups of animals consists of the big five?
 A. Elephant, giraffe, rhino, cheetah and lion
 B. Buffalo, rhino, hippo, giraffe and buffalo
 C. Lion, elephant, rhino, leopard and buffalo
 D. Rhino, buffalo, zebra, elephant and giraffe
20. Which one of the following is a processing industry?
 A. Making sweets B. Leather tanning
 C. Steel rolling D. Barber shop
21. Which one of the following colours of the national flag of Kenya represents peace?
 A. Red B. Green
 C. Black D. White
22. Which one of the following crops is mainly grown for export?
 A. Cotton B. Flower
 C. Wheat D. Tea
23. The main factor that influences population distribution in Kenya is
 A. climate B. relief
 C. towns D. government policy
24. The country that borders Kenya to the north west is
 A. Ethiopia B. Sudan
 C. Uganda D. South Sudan

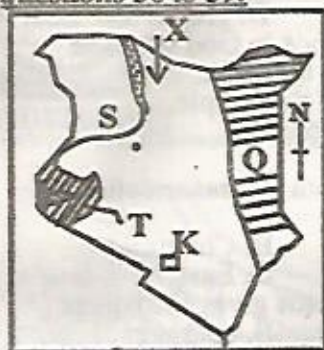
25. During the pre-colonial days, the Maasai and the Abagusii interacted mainly through :-
 A. intermarriages B. civil wars
 C. trade D. games and sports
26. Three of the following are pastoral communities in Kenya. Which one is not?
 A. Boran B. Pokomo
 C. Turkana D. Samburu
27. The best soil for making pots is
 A. volcanic soil B. loam soil
 C. alluvial soil D. clay soil
28. The government encourages conservation of forest mainly in order to
 A. provide firewood and charcoal
 B. protect source of rivers
 C. make sure wild animals have places to live in
 D. make our country beautiful.
29. The main tourist attraction in Kenya is
 A. sand beaches
 B. cultural dances
 C. wildlife
 D. beautiful sceneries
30. Which one of the following is a manufacturing industry?
 A. Shoe making B. Radio repair
 C. Fruit canning D. Hair dressing
31. The diagram below represents a road sign



The road sign informs motorists that

- A. there are pastoralists around
 B. cattle could be crossing the road
 C. cattle are slaughtered around
 D. there is a cattle dip around
32. The quality of showing love for one's country is referred to as
 A. loyalty
 B. citizenship
 C. obedience
 D. patriotism
33. A county executive committee is headed by
 A. the county governor
 B. clerk of the county assembly
 C. the county senator
 D. speaker of the county assembly
34. Trade can be defined as
 A. selling of different goods
 B. buying and selling of goods and services
 C. buying and selling goods
 D. importing and exporting
35. Which one of the following groups consists of early forms of transport?
 A. Railway, donkey, aeroplanes
 B. Porters, bicycles, ship
 C. Donkeys, oxen, porters
 D. Vehicles, handcarts, aeroplanes

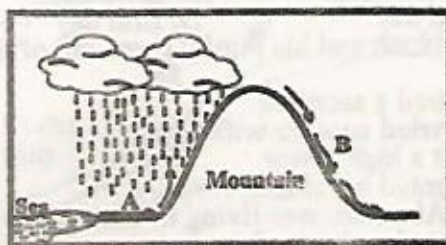
Use the map of Kenya below to answer questions 36 to 39.



36. The main economic activity carried out in the shaded area marked Q is
 A. mining
 B. pastoralism
 C. farming
 D. fishing
37. The river marked S is
 A. River Turkwel
 B. River Nzoia
 C. River Kerio
 D. River Ewaso Nyiro
38. The climatic region marked T is
 A. cool and wet
 B. hot and dry
 C. cool and dry
 D. hot and wet
39. The town marked K is
 A. Eldoret
 B. Nairobi
 C. Kisumu
 D. Thika
40. Which one of the following skills was taught through apprenticeship?
 A. Herding
 B. Farming
 C. Treating the sick
 D. Cooking
41. Which one of the following weather measuring instruments is correctly matched with the element it measures?

<u>Instrument</u>	<u>Weather element</u>
A. Thermometer	rainfall
B. Raingauge	temperature
C. Windsock	speed of wind
D. Windvane	wind direction
42. Which one of the following rights of a child guarantees him or her a name?
 A. Schooling
 B. Food
 C. Identity
 D. Protection
43. Which one of the following was a way of storing meat in the ancient times?
 A. Hanging it over the fireplace
 B. Putting it in tightly covered containers
 C. Canning
 D. Refrigeration
44. Which one of the following groups is made up of national parks only?
 A. Maasai Mara; Sibiloi; Tsavo
 B. Aberdare, Malka Mari, Mt Elgon
 C. Amboseli, Marsabit, Boni
 D. Mt. Kenya, Dodori, Nairobi
45. Dairy farming in Kenya is mainly practised in the
 A. coastal region
 B. lake basin region
 C. Kenya highlands
 D. plateaus region
46. The main railway line in Kenya connects
 A. Voi with Konza
 B. Thika with lake basin
 C. Nairobi with Nanyuki
 D. Mombasa with Kisumu

47. Ol-karia near Naivasha and lake Bogoria are important tourists attraction centres because they
 A. are historical sites
 B. are good sports grounds
 C. have hot springs
 D. have good conference facilities
48. The second highest mountain in Kenya is
 A. Mt. Kenya
 B. Mt. Elgon
 C. Mt. Marsabit
 D. Mt. Longonot
49. The steep sides of the rift valley are called
 A. faults
 B. walls
 C. craters
 D. escarpments
- Use the diagram below to answer question 50.



50. The side marked A is called
 A. leeward side
 B. slopes
 C. windward side
 D. rain shadow
51. Which one of the following crops is wrongly matched with the area where it is grown?

<u>Crop</u>	<u>Where grown</u>
A. Wheat	Nakuru
B. Cotton	Kericho
C. Flowers	Naivasha
D. Tea	Nyamira
52. The statement below describes a traditional leader in Kenya.
 i. He was a spiritual leader
 ii. He led his community to resist colonial rule
 iii. He was a medicineman
 iv. He was captured and killed by the British
 The leader described above was :-
 A. Masaku
 B. Waiyaki wa Hinga
 C. Koitalel Arap Samoei
 D. Mekatilili wa Menza
53. Which one of the following towns in Kenya serves as a military centre for Kenya Navy?
 A. Mombasa
 B. Nakuru
 C. Kisumu
 D. Nairobi
54. Wildlife refers to all the following except
 A. animals
 B. plants
 C. insects
 D. mountains
55. The medium of exchange used in traditional trade was
 A. foreign exchange
 B. other goods
 C. money
 D. barter trade
56. Planted forests in Kenya are found in all the following areas except
 A. Timboroa
 B. Maji Mazuri
 C. Burnt forest
 D. Kakamega
57. Which one of the following modern methods of fishing uses two ships to pull a net?
 A. Net- drifting
 B. Long-lining
 C. Purse-seining
 D. Trawling

58. The main duty of the Kenya police service is to
 A. arrest law breakers
 B. keep law and order
 C. inspect public service vehicles
 D. protect the country from external attacks.
59. General election in Kenya is done after a period of
 A. 21 years
 B. 10 years
 C. 2 years
 D. 5 years
60. The third president of Kenya was
 A. Jomo Kenyatta
 B. Mwai Kibaki
 C. Daniel Moi
 D. Uhuru Kenyatta

CHRISTIAN RELIGIOUS EDUCATION

61. Human beings and land animals were created on the
 A. fourth day
 B. sixth day
 C. third day
 D. fifth day
62. When Noah and his family came out of the ark he
 A. offered a sacrifice
 B. married another wife
 C. built a high tower
 D. repented his sins
63. When Abraham was living in Canaan he
 A. planted a vineyard
 B. married Sarah
 C. went to live in Canaan
 D. accepted to sacrifice Isaac
64. When the Israelites left Egypt they were led by
 A. Aaron
 B. Joshua
 C. Moses
 D. Jethro
65. When Moses went up Mount Sinai God gave him
 A. the ten commandments
 B. a walking stick
 C. a Bible
 D. manna
66. _____ was a young Moabite woman who was loyal to her mother-in-law Naomi.
 A. Elizabeth
 B. Ruth
 C. Deborah
 D. Hannah
67. _____ was a strong man in Israel who killed a lion with bare hands.
 A. Gideon
 B. Samuel
 C. Samson
 D. David
68. The value seen in Daniel when he refused to worship the king is
 A. faith
 B. patience
 C. tolerance
 D. kindness
69. Which of the following prophets prayed for fire from heaven?
 A. Elisha
 B. Jeremiah
 C. Isaiah
 D. Elijah
70. The wife of Zechariah who had no child was
 A. Mary
 B. Elizabeth
 C. Sarah
 D. Salome
71. The temptation of Jesus teaches Christians to
 A. be faithful to God
 B. share food with other people
 C. show kindness
 D. forgive their enemies
72. When Jesus called John and James he found them
 A. ploughing
 B. preaching
 C. sleeping
 D. fishing
73. Jesus taught Christians the importance of repenting their sins when he taught the parable of the
 A. good samaritan
 B. ten young women
 C. lost son
 D. two house builders

74. Jesus fed a large crowd of people with
 A. meat and milk
 B. bread and fish
 C. wine and bread
 D. grapes and meat
75. Jesus showed obedience to God when he
 A. accepted to die on the cross.
 B. drove traders from the temple.
 C. chose twelve disciples.
 D. ate the last supper.
76. We remember the death and resurrection of Jesus during
 A. Pentecost
 B. Christmas
 C. Passover
 D. Easter
77. The resurrection of Jesus gives Christians
 A. hope
 B. courage
 C. kindness
 D. humility
78. What did Saul do to followers of Jesus before conversion? He
 A. ate with them
 B. prayed with them
 C. persecuted them
 D. played with them
79. _____ sold their property and lied to the disciples.
 A. Zechariah and Elizabeth
 B. Ananias and Sapphira
 C. Paul and Silas
 D. Thomas and Peter
80. _____ is a book of the Bible in the old testament.
 A. Exodus
 B. Matthew
 C. John
 D. Mark
81. Leisure time for Christians is when they
 A. go to sleep
 B. eat their meals
 C. worship in the church
 D. are free from their work
82. In the past Africans prayed in
 A. shrines
 B. churches
 C. mosques
 D. synagogues
83. Children in the past were given names after
 A. their friends
 B. their enemies
 C. strangers
 D. their ancestor
84. People in the past showed kindness by
 A. ploughing their farms
 B. giving food to strangers
 C. shaking hands
 D. storing their food
85. The verse, 'children respect your father and mother' is
 A. a rule at school
 B. taught in school
 C. God's commandment
 D. a law of the country
86. An act that Christians should not do is
 A. stealing
 B. dancing
 C. singing
 D. playing
87. The Lord's prayer was taught by
 A. disciples
 B. Jesus
 C. elders
 D. Christians
88. A value all Christians should practice is
 A. pride
 B. boast
 C. cheat
 D. love
89. When Christians sin against God they should
 A. be punished
 B. rest
 C. repent
 D. hide
90. What should Christians do on the day of worship? They should
 A. rest at home.
 B. go to church.
 C. work on their farms
 D. not eat