

ACHIEVERS FOCUS EXAMINATION SERIES

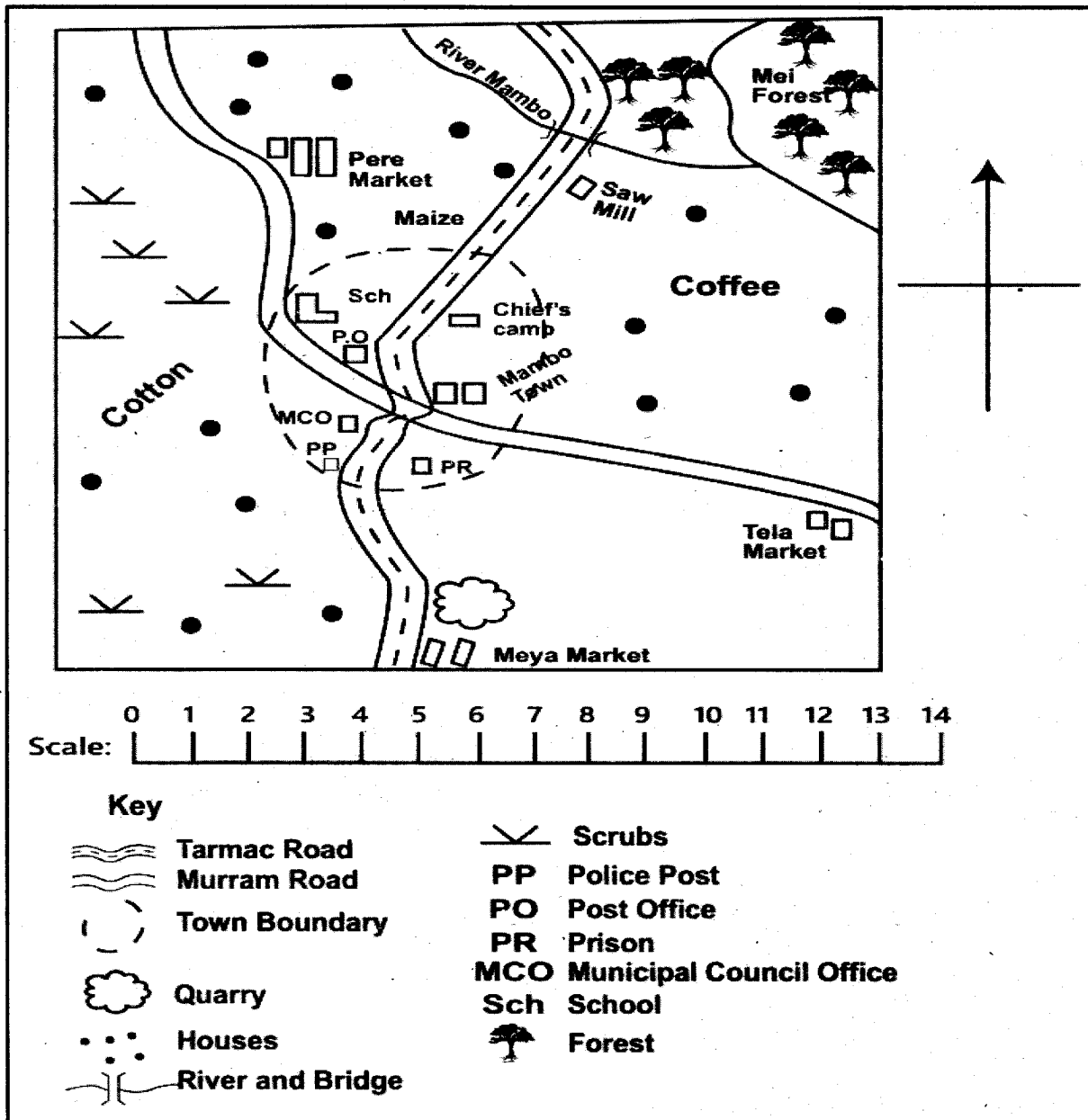


STANDARD 7 – 2021 SOCIAL STUDIES AND RELIGIOUS EDUCATION

AF005

Time: 2 hours 15 minutes

PART I: SOCIAL STUDIES MAMBO AREA

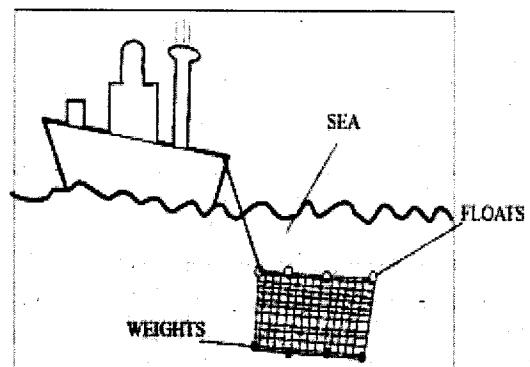


Use the map of area to answer question 1-7.

1. What is the approximate length of the tarmac road from the junction at Mambo to the Saw mill?
- A. 6km
B. 8mk
C. 10km
D. 13km

2. Members of public found a person breaking into a shop in mambo town the correct action for them to take would be to
- A. Beat up the person
B. Take the person to the police post
C. Take the person to the prison
D. Run away for safety

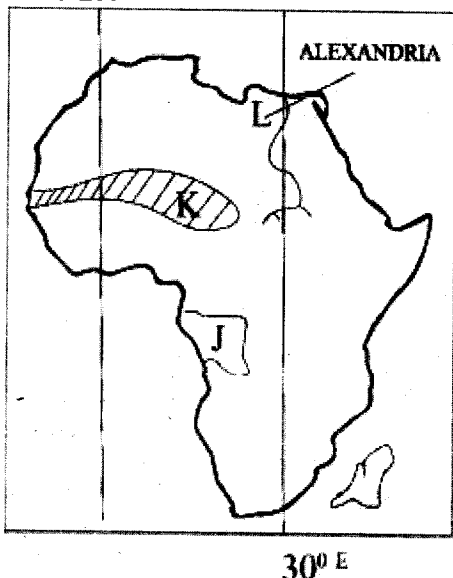
3. The highest point in Mambo area is likely to be around
 A. Zuba market C. Tela market
 B. Mambo town D. Peke market
4. The climate of the area to the west of Mambo town can be described as
 A. Hot and wet C. Hot and dry
 B. Cool and wet D. Cool and dry
5. Which one of the following local authorities is in charge of mambo town?
 A. Municipal council C. County council
 B. City council D. Urban council
6. What is the direction of Tela market from Peke market?
 A. North West C. South West
 B. South East D. North East
7. The main two economic activities carried out around Meya market are
 A. Trading and mining
 B. Trading and cattle keeping
 C. Trading and manufacturing
 D. Trading and crop growing
8. Which one of the following communities in Kenya make up the Plain Nilotes?
 A. Turkana – Pokot – Tugen
 B. Maasai – Njemps – lteso
 C. Kipsigis – Keiyo – Marakwet
 D. Samburu- Saboat – Nandi
9. Traditional artefacts are kept in museums because
 A. They are symbols of cultural heritage
 B. They are symbols of national unity
 C. They are used for rewarding hard working citizens
 D. They are for export
10. Which one of the following was a result of the coming of the Arabs to eastern Africa?
 A. Introduction of growing of cloves in Zanzibar
 B. Building of fort Jesus at Mombasa
 C. Settling up of kingdoms in the interior
 D. Construction of the railway to the interior
11. One of the uses of soda ash is to make
 A. Cement C. Washing soap
 B. Plastics D. Roofing material
12. Most mountains in Africa were formed as a result of
 A. Erosion C. Folding
 B. Volcanicity D. Faulting
13. The floor of the rift valley in Kenya receives little rainfall because
 A. It lies in between the eastern and western highlands
 B. It is located far from the Indian ocean
 C. It is located near the equator
 D. It has many salty lakes
14. What is the time in Kigali on longitude 30° E when it is 10:00 am in Accra on longitude 0°?
 A. 8:00 am C. 2:00 am
 B. 6:00 am D. 12:00 noon
15. The most common problem facing dams in Africa is
 A. Frequent flooding
 B. Floating vegetation
 C. Collection of silt in the dams
 D. Concentration of settlement around the dam
16. Three of the following roles are played by the community in the development of the school. Which one is not?
 A. Donating land to the school
 B. Teaching children
 C. Buying books for the school
 D. Providing labor to the school
17. Which one of the following is not a benefit of interaction among communities?
 A. Promotion of trade
 B. Spread of ideas and information
 C. Contribution of population growth
 D. Enriching different culture
18. The diagram below represents a method of fishing



- The fishing method shown in the diagram is
 A. Basket method C. Purse seining
 B. Net drifting D. Trawling method

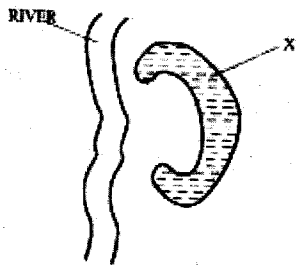
19. Which one of the following countries in Africa is correctly matched with its capital city?
- Angola – Cairo
 - Zambia – Lusaka
 - Egypt – Yaoundé
 - Cameroon – Luanda
20. Which one of the following statements describes the social organization of the san during the pre-colonial period?
- They lived in small groups of families
 - They had a strong clan system
 - They lived in permanent homes
 - They practiced circumcision
21. The main problem limiting trade among African countries is that
- They use different national language
 - They have poor transport links
 - They use different currencies
 - They produce similar goods
22. Olorgesaille and Kariandusi are both
- Mining sites
 - National museums
 - Historical sites
 - Early trading centre
23. In traditional African communities, the basic unit of social organization was
- The family
 - The age-group
 - The clan
 - The warriors
24. The Eastern bantu dispersed from Shungwaya during the pre-colonial period mainly because
- The area became dry
 - They fought among themselves
 - There was an outbreak of diseases
 - They were attacked by the Galla

Use the map of Africa below to answer questions 25-27.



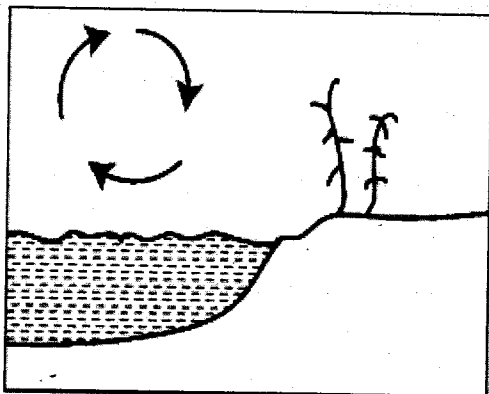
25. The country marked J was colonized by
- France
 - Portugal
 - Italy
 - Belgium
26. The main economic activities carried out the shaded area marked K is
- Mining
 - Crop growing
 - Tourism
 - Nomadic pastoralism
27. The multi- purpose project found in the place marked I is the
- Aswan high Dam
 - Akosombo Dam
 - Owen falls Dam
 - Kamba Dam
28. To make a complete rotation on its axis, the earth takes
- 12 hours
 - 7 hours
 - 24 hours
 - 30 hours
29. Which one of the following is a way of promoting peace in the society?
- Allowing many foreigners into the country
 - Punishing suspected criminals
 - Encouraging the spirit of forgiveness
 - Reducing the number of political parties
30. Three of the following statements are true about the Tswana pastoralists. Which one is not?
- They lived in the wetter part of their country
 - They keep large herds of livestock
 - They use some of their animals to pay the pride price
 - They grow food crops around their temporary shelter
31. Fresh flowers from Kenya are transported to European by air because air transport is
- Fast
 - Cheap
 - Safe
 - Comfortable
32. In Kenya a national population census is carried out after a period of
- 10 years
 - 8 years
 - 5 years
 - 2 years
33. Which one of the following places is the safest for pupils to cross the road?
- Where there are bumps
 - Where there are traffic lights
 - Where there are road junctions
 - At roundabout
34. Which one of the following is a service industry
- Banking
 - Coffee milling
 - Vehicle assembly
 - Furniture making

Use the diagram below to answer questions 35-36.



35. The physical feature market X is
- A lava – darned lake
 - A crater lake
 - A man-made lake
 - An ox-bow lake
36. Which one is an example of a physical feature in Africa illustrated above?
- Lake Nyos
 - Lake Mweru
 - Lake Shala
 - Lake Gambo
37. Which one of the following is the main effects of destruction of forest in Kenya?
- Reduces volume of water in rivers
 - Shortage of herbal medicine
 - Shortage of timber for building
 - Reduced supply of firewood
38. The main source of county government revenue is
- Dividends
 - Tax
 - Licenses
 - Treasury bills & bonds
39. Which one of the following is not a landlocked country?
- Botswana
 - Chad
 - Swaziland
 - Mauritania

Use the diagram below to answer questions 40-43.



40. The diagram represents
- Sea breeze
 - Land breeze
 - Relief rainfall
 - Frontal rainfall

41. The above condition is experienced during which time of the day
- Night
 - Day time
 - In the morning
 - In the evening
42. The main factors leading to the formation of the above conditions is
- Relief
 - Human activities
 - Shape of the coastline
 - Distance from a large water body
43. The above condition is experienced in all of the following areas except
- Malindi
 - Lamu
 - Nairobi
 - Mombasa
44. Which one of the following is as a result of lawlessness?
- Improved economy
 - Increased investment
 - Loss of lives
 - Better infrastructure
45. Who among the following was not a missionary?
- Johann Rebman
 - Ludwiq Krapt
 - John Speke
 - David Livingstone
46. River Nile and River Niger have a common characteristic. It is that both rivers
- Originates from the same highland
 - End in the Mediterranean Sea
 - Are navigable through the course
 - Have a delta at the mouth
47. Which one of the following marriage is presided over by the district commissioner?
- Civil marriage
 - Christian marriage
 - Customary marriage
 - Islamic marriage
48. Countries in North Africa experience winter season during the months of
- December to February
 - June to August
 - March to May
 - September to November
49. Three of the following skills were taught through apprenticeship in Africa traditional societies. Which one was not?
- Harvesting of honey
 - Treating the sick
 - Collecting firewood
 - Hunting for wild animals

50. Which one of the following is a duty of the police force in Kenya?
- To punish the law breakers
 - To judge cases
 - To defend the country
 - To arrest suspected criminal
51. Which one is an economic right?
- Right to life
 - Right to work
 - Right to education
 - Right to privacy
52. The Organization of Africa (OAU) has its members drawn from
- Independent states of Africa
 - English speaking states of Africa
 - States with similar systems of government
 - States with common currency
53. Pupils should participate in school management so that they
- Ensure the teachers do their work effectively
 - Prepare their class timetables
 - Understand the rules that guide them
 - Take care of the school money
54. Kenya's philosophy of African socialism is important in that it
- Promotes traditional system of system
 - Promotes traditional system of government
 - Encourages people to work as team
 - Promotes the use of different currencies
55. One of the recent means of communication to be introduced in Africa is the
- Radio
 - Television
 - Telegram
 - Mobile phone
56. Which one of the following combination consists of only National symbols in Kenya?
- The National flag
The Coat of arms
The National school
 - The public seal
The National currency
The Constitution
 - The National Anthem
The Coat of Arms
The Publics seal
 - The Constitution
The National schools
The National Anthem
57. Which one of the following is a role of political parties in Kenya?
- Register voters
 - Approve national budget
 - Appoint members of cabinet
 - Educate people on their rights
58. Which one of the following groups of people are members of parliament?
- Speaker- senator – Woman representative
 - Cabinet secretary – senator – speaker
 - President – cabinet secretary - woman representative
 - President – Senator- Woman – representative
59. The color of the National flag of Kenya which represents peace is
- White
 - Green
 - Black
 - Red
60. The members of parliament in the republic of Kenya are sworn in by the
- Chief justice
 - The speakers of the National assembly
 - Attorney General
 - Chairman of the Electoral commission

**PART II: RELIGIOUS EDUCATION
CHRISTIAN RELIGIOUS EDUCATION**

61. On which day were the heavenly bodies created
- Third
 - Sixth
 - Forth
 - Fifth
62. When Jesus healed the blind man, he showed that
- Blind people are sinners
 - He had power over the world
 - All the above
 - He was the light of the world
63. The following books are found in the Old Testament except
- Letters
 - Prophetic
 - Law
 - History
64. God gave Solomon wisdom and
- Wives
 - Wealth
 - Power
 - Strength
65. Those members of the family who have died but can physically be remembered by the living are called
- Living
 - Living dead
 - Ancestors
 - Unborn

66. What are secular values?
 A. Qualities of life determined by society
 B. Qualities of Christianity
 C. Qualities taught by Christian
 D. None of the above
67. Who was the father of John the Baptist?
 A. Zachariah C. Solomon
 B. Abraham D. Paul
68. "This is my own dear son with whom I am pleased" (Matthew 3:17) these words were spoken during the ____ of Jesus.
 A. Baptism C. Birth
 B. Crucifixion D. Temptation
69. Who among the following prepared the way for the ministry of Jesus?
 A. Disciple C. Saul
 B. Peter & John D. John the Baptist
70. One of the following is found in the Apostles creed. Which one?
 A. God is love C. God is King
 B. God is merciful D. God is all powerful
71. In traditional African communities a man was most respected if his wife gave birth to
 A. Twins C. Beautiful girls
 B. Girls D. Boys
72. Another word for agreement is
 A. Commandment C. Law
 B. Directions D. Covenant
73. "A prophet is never welcomed in his own home" (Luke 4:24) Jesus said these words when he was
 A. Nailed on the cross
 B. Tempted by the devil
 C. Rejected in Nazareth
 D. In Gethsemane
74. The main significance of the marriage in African society was to
 A. Prove that the bridegroom was wealthy-
 B. Have a life time companion
 C. Have a person under your authority
 D. Have children who continue with the ancestor's lineage
75. Who among the following is a major prophet?
 A. Hosea C. Habakkuk
 B. Zechariah D. Daniel
76. A person who dies for his Christian belief is a
 A. Martyr C. Disciples
 B. Reformer D. Evangelist
77. What role did Saul play in the synagogue before seeing the vision of Christ on his way to Damascus?
 A. Sadducee C. Levite
 B. Pharisee D. priest
78. Who held the cloaks of the people stoning Stephen, the first Christian martyr?
 A. Saul C. Nicodemus
 B. Peter D. Cornelius
79. What was the main duty of prophets in Israel?
 A. Fore-telling the future
 B. Giving people Gods message
 C. Foreseeing
 D. Forewarning people
80. The act of Abraham moving from Haran to Canaan is a sign of?
 A. Belief C. Prayer
 B. Faith D. Courage
81. The Acts of Apostles was written by
 A. Luke C. Paul
 B. John D. Mark
82. Who among the following people was a judge in Israel?
 A. Joshua C. Zachariah
 B. Gideon D. Elikana
83. The main message of John the Baptist was
 A. Become his disciples
 B. Repent their sins
 C. Love one another
 D. Feed one another
84. "Worship the Lord your God and serve only Him" these words were said by Jesus during
 A. Temptation
 B. Baptism
 C. Crucifixion
 D. Transfiguration
85. Which one of the following rituals in traditional African society was mainly carried out by a priest?
 A. Burying the after birth
 B. Circumcising
 C. Shaving the hair
 D. Offering sacrifices

86. Which one of the following activities BEST promotes love among Christians?
- Going to church everyday
 - Speaking in tongues
 - Helping one another in times of need
 - Reading the bible
87. John found the money that his classmate had lost. The Best thing for him to do was
- To buy chips and sausage
 - To leave it there
 - To take it to the church
 - To give it back to the classmate
88. Susan welcomed the needy in her home. The fruit of the Holy which she showed is ____
- | | |
|-------------|-------------|
| A. Joy | C. Peace |
| B. Kindness | D. Patience |
89. Which of the following places was not sacred in traditional African communities?
- | | |
|------------------|--------------|
| A. Churches | C. Mountains |
| B. Certain trees | D. Lakes |
90. Christians can build the kingdom of God by ____
- | | |
|---------------------|-----------------------|
| A. Abusing others | C. working together |
| B. Going to parties | D. inviting preachers |

ISLAM RELIGIOUS EDUCATION

61. Which surah mentions the three places where different prophets received wahyi?
- Tiyin
 - Naas
 - Nasr
 - Fatiha
62. In surah Al-Alaq Allah(s.w) that He created man from a clot of blood. Which attribute of Allah(s.w) supports this statement?
- Aswamad
 - Almajid
 - Alkhaliq
 - AR.Rahman
63. In which surah does Allah(s.w) warn backbiters and rumour mongers that they are going to face a severe punishment?
- Qadar
 - Humaza
 - Bayyinah
 - Masad
64. The night of power has been mentioned in one of the following surahs. Which surah is it?
- Maun
 - Qadar
 - Munafiqun
 - Kauthar

65. In which month did the prophet (s.a.w) receive the first revelation?
- Muharram
 - Rajab
 - Shaaban
 - Ramadhan
66. Which of the following is a signs of a person who believes in Allah(s.w) and the last day?
- Not annoying neighbours
 - Welcoming visitors
 - Teaching children Qur'an
 - Visiting the sick
67. Choose the best name for a Muslim child from the list given below.
- Khabith
 - Shidah
 - Abu Jahal
 - Abdurahman
68. Which one of the surahs below is recommended to be read before a Muslim goes to sleep?
- Ikhlas
 - Kauthar
 - Fiyl
 - Imran
69. One of the following is haraam for a Muslim man as taught by the prophet (s.a.w)?
- Silver and plastic
 - Plastic and cotton
 - Silk and gold
 - Gold and wool
70. Which title was given to prophet Ibrahim (a.s) for being a friend of Allah(s.w)?
- Khalilullah
 - Habibullah
 - Saifullah
 - Asadullah
71. Why did the archers come down from mount Uhud against the advice of the prophet (s.a.w)?
- To help the Muslims to fight the Quraish
 - They thought the war was over
 - Someone called them from down
 - They saw the prophet being attacked
72. Who among the following was a relative of prophet Nuh (a.s) who drowned after disobeying him?
- His son
 - His father
 - His daughter
 - His cousin
73. What is the name given to the meal served during the Nikah ceremony?
- Biriani
 - Pilau
 - Walima
 - Aqiqa

74. Which of the following is not among the six pillars of iman?
 A. Belief in angels
 B. Belief in Allah(s.w)
 C. Belief in prophets
 D. Belief in saum
75. What does the second pillar of Islam teach us?
 A. Helping the needy in the society
 B. Punctuality
 C. Swabr
 D. Brotherhood
76. Which of the following should be used to guide Muslims in making the best decisions in life?
 A. Qur'an
 B. Law
 C. Punishment
 D. Advice
77. One of the following is only done to a baby boy during aqiqah, which one is it?
 A. Circumcision
 B. Naming
 C. Slaughtering
 D. Shaving
78. Which of the following items should be used by a Muslim to perform tayyammam when there is no water for wudhu?
 A. Water
 B. Stones
 C. Sand
 D. Tissue
79. How many recipients of Zakah are mentioned in the Qur'an?
 A. Three
 B. Four
 C. Ten
 D. Eight
80. Why did Allah(s.w) send Adam(a.s) and Hawa away from paradise?
 A. They disrespected other creatures
 B. They refused to prostrate to the angels
 C. They quarreled with a snake
 D. They went against the orders of Allah(s.w)
81. Who among the following angels of Allah(s.w) will blow the trumpet on the day of Qiyama?
 A. Jibril
 B. Israfil
 C. Malik
 D. Ridhwan
82. Which prayer among the following is only performed on 1st of Shawwal?
 A. Swalatul-Idul-fitr
 B. Swalatul-Jumua
 C. Swalatul-janaza
 D. Swalatu-fardh
83. Which of the following attributes of Allah(s.w) is correctly matched with its meaning?
 A. Al-Khaliq-The Creator
 B. Al-Baswir-The Designer
 C. Al-Fattah-The Provider
 D. Al-Musawwir-The Creator
84. Why did the Quraish nick name the prophet(s.a.w) Al-Amin?
 A. They didn't believe in his prophet hood
 B. They liked his way of preaching
 C. He was trustworthy
 D. He was born without a father
85. Which one of the following forms of torture was inflicted to the early Muslims in Makkah during the early days of Islam?
 A. Eyes and ears being chopped off
 B. Being burnt alive
 C. Limbs being cut off
 D. Made to lie under the hot sun
86. Which one of the following motivated Abrahah to attack the Kaaba?
 A. He wanted to conquer Makkah
 B. He wanted to destroy the idols housed in the Kaaba
 C. He wanted to kill all the idol worshippers
 D. He wanted people to perform hajj in his beautiful temple
87. Which one of the following consists of qualities of prophets of Allah(s.w)?
 A. Truthful, honest, patient, learned.
 B. Trustworthy, honest, patient, truthful
 C. Patient, sinless, greedy, honest
 D. Sinless, patient, wealthy, proud
88. Which of the following events marked the end of prophethood of Muhammad (s.a.w)?
 A. Wahyi
 B. Isra
 C. Death of the prophet(s.a.w)
 D. Qur'an
89. How old was Khadija when she married the prophet (s.a.w)?
 A. Forty years
 B. Twenty five
 C. Sixty three
 D. Fifty three
90. What is the name given to the sunnah prayer performed before any fardh prayer?
 A. Tahajjud
 B. Witr
 C. Baadiya
 D. Qabliyah