



SCHOOL BASED EVALUATION TEST

STANDARD EIGHT YEAR - 2020

SOCIAL STUDIES & C.R.E

73314403

READ THESE INSTRUCTIONS CAREFULLY


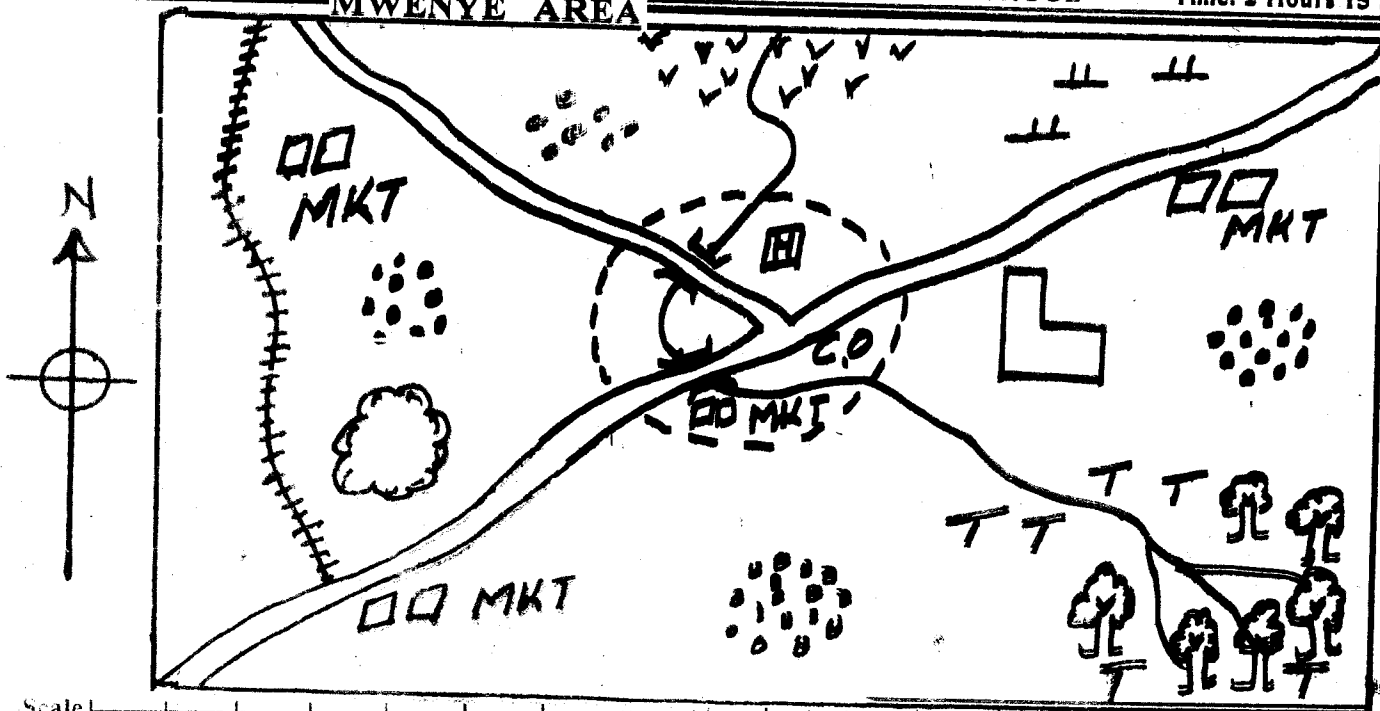
1. Use an ordinary pencil only.
2. Make sure that you have written on the answer sheet.

I. YOUR NAME _____

II. NAME OF YOUR SCHOOL _____

Time: 2 Hours 15 Mins.

MWENYE AREA



- | | | | | | | | |
|------------------|--------|---------|------------------|--------|---------------|---------------|----------|
| Forest | Tea | Papyrus | All weather road | School | Town boundary | County office | Hospital |
| Human settlement | Quarry | Market | Railway line | Seriba | | | |

Use the map of Mwenye area to answer questions 1-7.

1. The land in Mwenye area slopes towards
 - A. South
 - B. North
 - C. South East
 - D. West
2. Which one of the following physical features is likely to be found to the North of Mwenye area?
 - A. Lake
 - B. Valley
 - C. Swamp
 - D. Ocean
3. The climate in South Eastern part of Mwenye area can be described as
 - A. cool and wet
 - B. hot and wet
 - C. hot and dry
 - D. cool and dry

4. The main economic activity carried out in Mwenye area
 - A. farming
 - B. fishing
 - C. mining
 - D. trading
5. The main settlement pattern in Mwenye area is
 - A. linear
 - B. clustered
 - C. dense
 - D. sparse
6. Which of the following social services is not provided in Mwenye area?
 - A. Health
 - B. Education
 - C. Security
 - D. Administration

7. The railway line shown on the map is likely to transport

- A. tea
- B. timber
- C. minerals
- D. tourists

8. The origin of human beings is explained through the following except

- A. parables
- B. evolution theory
- C. creation theory
- D. myths

9. The school routine is important because

- A. the teachers' work is increased
- B. it ensures that planned activities run smoothly
- C. it ensures that learners do not follow the timetable
- D. school rules and regulations are not obeyed

10. The following are elements of a good citizen except

- A. patriotism
- B. honesty
- C. loyalty
- D. tribalism

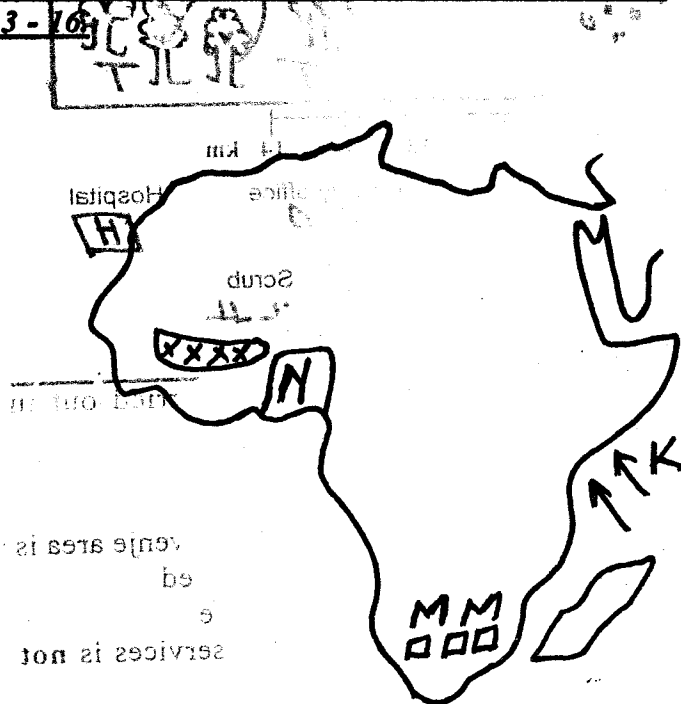
11. A street boy was beaten to death for stealing a lady's handbag. Which right was he denied?

- A. Right to life
- B. Right to fair trial
- C. Right to freedom
- D. Right to peace

12. The main cause of conflict in Kenya is

- A. economic differences
- B. cultural differences
- C. political differences
- D. religious differences

Use the map of Africa below to answer questions 13 - 16



13. The method of mining in the area marked 'mm' is

- A. open cast
- B. shaft method
- C. dredging
- D. drilling

14. The physical feature marked 'N' is

- A. Jos plateau
- B. Nyika plateau
- C. Bialla plateau
- D. Fouta Djallon plateau

15. The main effect of the winds marked K to the adjacent land is

- A. causes dry conditions
- B. causes rain in winter
- C. brings a lot of rainfall
- D. causes fog and mist

16. The main export crop of the country marked 'N' on the map is

- A. cocoa
- B. sugarcane
- C. cloves
- D. coffee

17. The following are members of the executive arm of the government except

- A. Attorney General
- B. Speaker
- C. President
- D. Cabinet Secretary

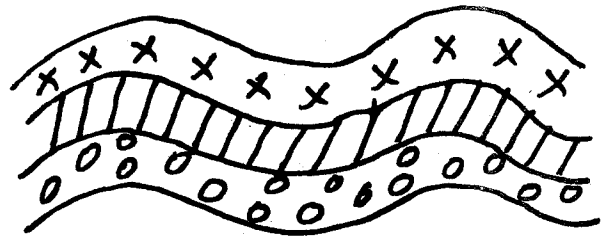
18. Below is a description about a community in Africa:

- (i) Decisions were mainly made by consensus
- (ii) They were organized in clans
- (iii) They were nomad pastoralism
- (iv) They had a chief who was usually assisted by elders

The community described above was the

- A. San
- B. Baganda
- C. Nyamwezi
- D. Khoikhoi


Use the diagram below to answer questions 19 - 20.



19. Three of the following mountains were formed through the above process except

- A. Atlas mountains
- B. Cape Ranges
- C. Tibesti mountains
- D. Drakensberg mountains

20. The type of mountain shown in the diagram above was formed as a result of
- folding
 - volcanicity
 - faulting
 - erosion
21. Pokot, Sabaot and Tugen have one thing in common in that, they are
- originated from Horn of Africa
 - fishermen
 - found in South Africa
 - Highland Nilotes
22. Who among the following early visitors to Eastern Africa was a missionary?
- William Mackinnon
 - Ludwig Kraft
 - Seyyid Said
 - John Speke
23. Which of the following are beef farming areas in Kenya and Tanzania?
- Kisumu and Dodoma
 - Laikipia and Kongwa
 - Taita and Dar - es - Salaam
 - Nyeri and Arusha
24. The following are benefits of democracy **except**
- people are treated fairly
 - promote peace and prosperity
 - promote injustice
 - promotion of freedom
25. The following are duties of the County Government **except**
- make laws
 - receive important visitors
 - initiate development
 - head the County Executive Committee
26. The **best** way to discourage drug and substance abuse is by
- offering moral guidance to the victim
 - strengthening police inspections
 - being role models to the drug abusers
 - educating people on the dangers of drugs
27. Three of the following are some aspects of cultural that should be preserved **except**
- taking care of the needy
 - female circumcision
 - discouraging early marriages
 - performing traditional songs
28. The following are causes of lawlessness in the society **except**
- equality before the law
 - poverty
 - corruption
 - religious differences
29. Berbers and Tuaregs are **mainly** found in which region of Africa?
- South
 - North
 - West
 - Eastern
30. Who among the following African traditional leaders fought against the establishment of French rule in West Africa?
- Lewanika
 - Kabaka Mwanga
 - Kinjekitile Ngwale
 - Samoei Toure
31. Which one of the following is **not true** about early immigrants into Kenya?
- They came as traders
 - They came as missionaries
 - They came as students
 - They came as colonizers
- Use the diagram below to answer questions 32 - 33.



32. The winds labelled Y are
- hot and wet
 - cool and wet
 - hot and dry
 - cool and dry
33. The type of rainfall shown above is
- convectional
 - orographic
 - landbreeze
 - sea breeze
34. Three of the following are methods used by the Europeans to establish their rule in Eastern Africa **except**
- marrying African women
 - signing treaties
 - use of company rule
 - use of force
35. African socialism was adopted as a national philosophy in the year
- 1975
 - 1965
 - 1960
 - 1963

INDEPENDENTS

36. Which crop requires the following conditions to grow?
- (i) High temperatures of between 21°C to 26°C
(ii) Heavy rainfall
(iii) Deep, fertile and well- drained soils
(iv) Props to support plants with fruit
- A. Maize B. Coffee
C. Bananas D. Sugarcane
37. Human rights are outlined in the fourth chapter of the constitution under
- A. parliamentary bills
B. arms of the government
C. government of Kenya
D. bill of Rights
38. After the 8th August 2017 presidential election results were announced, a dispute arose. The dispute was resolved through
- A. mediation B. litigation
C. dialogue D. arbitration
39. The following are functions of the Independent Electoral and Boundaries Commission except
- A. nominating members
B. registering voters
C. preparing election materials
D. educating voters
40. Which one of the following was not an indication of the onset of a rainy season in the past?
- A. Excitement in some animals
B. Cloudy skies
C. Croaking of frogs
D. Appearing of full moon
41. Which language group came to Kenya mainly because of trade?
- A. Cushites B. Nilotes
C. Semites D. Bantus
42. After assimilation policy of administration failed in Senegal. They adopted a policy known as
- A. Direct rule B. Association
C. Indirect rule D. Paternalism
43. The main problem facing trade in Africa is
- A. lack of common currency
B. inadequate capital
C. political instability
D. production of similar goods
44. On which date was the current constitution of Kenya promulgated?
- A. 27th August, 2010 B. 4th August, 2010
C. 27th August, 2013 D. 21st November 2005
45. Three of the following lakes are sources of fresh water fish in Africa. Which one is not?
- A. Lake Tanganyika B. Lake Malawi
C. Lake Bogoria D. Lake Baringo
46. Three of the following welcomed the establishment of colonial rule in their area except
- A. Chief Mkwawa B. Lenana
C. Lewanika D. Kabaka Mutesa I
47. Which one of the following is correctly matched with its use?
- A. Rain gauge - temperature
B. Hygrometer - strength of wind
C. Anemometer - speed of wind
D. Windsock - humidity
48. The following are benefits of tourism except
- A. source of foreign exchange
B. create market for goods and services
C. encourages immoral activities
D. creates employment
49. The following are stages in the parliamentary electoral process:
- (i) Election date is announced
(ii) Parliament is dissolved
(iii) Speaker declares seat vacant
(iv) Election materials are prepared
- A. iii, iv, i, v B. ii, iii, i, iv
C. ii, i, iii, iv D. ii, iii, iv, i
50. The correct meaning of the term conflict is
- A. a disagreement between people
B. a tribal gathering
C. displacement of people
D. emigration of people
51. The following are contributions of a prominent leader in Africa:
- (i) He set up private schools
(ii) Introduced a new constitution
(iii) He helped to abolish the ownership of slaves
(iv) He was a founder member of OAU
- The leader described is
- A. Julius Nyerere B. Nelson Mandela
C. Haile Sellasie D. Abdel Nasser
52. Another name for young soil is
- A. volcanic soil
B. alluvial soil
C. sandy soil
D. clay soil

53. The community that migrated from South Africa and entered Eastern Africa from the South were

- A. Ngoni B. Wachagga
C. Wanyamwezi D. Wa Sukuma

54. Which of the following are electronic means of communication?

- A. Radio and newspapers
B. Newspapers and magazines
C. Cellphons and journals
D. Radio and television

55. Which one of the following is **not** a result of peace in the society?

- A. Cattle rustling
B. Promotion of tourism
C. Construction of roads
D. Children going to school without fear

56. Which of the following forms of transport is least developed in Eastern Africa?

- A. Pipeline B. Road
C. Cables D. Air

57. In Buganda Kingdom, administering justice was the work of

- A. Omwanika
B. Omulamuzi
C. Katikiro
D. Kabaka

58. Three of the following are problems facing urban centres **except**

- A. unemployment B. crime
C. proper housing D. growth of slums

59. Which one of the following is not a pastoral community in Africa?

- A. Fulani B. Maasai
C. Tswana D. Akamba

60. Who among the following is elected by legislators?

- A. The Deputy president
B. The Speaker
C. Nominated MPS
D. The Governor

C.R.E

61. In the story of creation, Genesis 1 God created the following in day five **except**

- A. owl B. gazelle
C. whale D. Nile perch

62. God gave Abraham the sign of circumcision to

- A. make a covenant with him
B. change the name Abraham and Sarai
C. unite the Jews
D. identify his descendant

63. Joseph gave land to his father and brothers at a place called

- A. Meribah B. Gihon
C. Goshen D. Marah

64. The freezing of the Israelites from the land of Egypt is narrated in the book of

- A. Numbers B. Exodus
C. Leviticus D. Genesis

65. Who among the following people in the Bible stories broke the sixth commandment?

- A. Noah B. Naboth
C. Jonathan D. Ahab

66. Daniel was thrown in den of lions during the reign of king

- A. Darius B. Nebukadnezar
C. Saul D. Herod

67. Who was **not** a prophet of hope among the following?

- A. Isaiah B. Ezekiel C. Jeremiah D. Micah

68. Prophet Elijah, Elisha and Jesus had one thing in common. Which is it?

- A. Feeding people B. Multiplication of oil
C. Healing lepers D. Raising the dead

69. The following are reasons why God rejected king Saul. Which one is **not**?

- A. Consulted a medium at Endor
B. Saved king Agag and fat animals
C. Performed the duties of a priest
D. Killed Uriah

70. Which one of the following reasons made Gideon reluctant about fighting the Midianites?

- A. Poor speaker
B. Least member in the family
C. Too young to lead
D. Afraid of Midianites

71. One of these gifts symbolised that Jesus was to be a priest. Which one is it?

- A. Gold B. Silver
C. Frankincense D. Myrrh

72. When Jesus was tempted thrice by satan in the wilderness He was able to overcome because

- A. Knew the word of God
B. He was the Messiah
C. He was protected by God
D. He was the son of God

73. According to the teachings of Jesus in Matthew 5; Blessed are the humble

- A. they will see God
B. they will receive God's promise
C. they will be comforted
D. God will satisfy them

74. Which one of the following parables of Jesus teaches Christian about humility in Prayer?
- The judge and woman
 - Friend at midnight
 - Good Samaritan
 - The Pharisee and the tax collector
75. The following are miracles performed by Jesus showing that He had power over nature **except**
- feeding five thousand people
 - calming the storm
 - raising Lazarus
 - miraculous catch
76. The death and resurrection of Jesus makes Christians to be
- tolerant
 - obedient
 - hopeful
 - honest
77. Jesus and His disciples celebrated the Last Supper in the town of
- Jerusalem
 - Bethany
 - Nazareth
 - Jericho
78. The following are events that took place during the day of Pentecost. Which one is not?
- Disciples filled with Holy Spirit
 - Peter preached
 - Noise that sounded like strong wind
 - The curtain torn into two
79. Who among the following people was the first Christian martyr...
- Abel
 - Stephen
 - Peter
 - Simeon
80. Who among the following was **not** among the seven helpers chosen by the early believers?
- Barnabas
 - Permenas
 - Timon
 - Philip
81. Which one of the following is a gift of the Holy Spirit?
- Kindness
 - Faithfulness
 - Healing
 - Self-control
82. The following are found in the apostles creed. Which one is **not**?
- Suffered under Pontius Pilate
 - Ascended into hell
 - Conceived by the Holy Spirit
 - Judge the living and the dead
83. Which among the following was **not** part of stage of life in African Traditional Society?
- Naming
 - Death
 - Birth
 - Initiation
84. Who among the following were found both in African Traditional Society and Christianity?
- Diviners and prophets
 - Priests and seers
 - Magician and medicinemen
 - Priests and prophets
85. The main way of reconciling with God in most African traditional practices was through
- reciting sacred prayers
 - offering sacrifices of animals
 - punishing offenders
 - sharing sacrificial meals
86. Your friend, Maria informs you that she has a boy friend. What action would you take?
- Pray with her
 - Tell her to use contraceptives
 - Inform her the dangers of irresponsible boy-girl relationships
 - Inform your class teacher
87. Which one of these is a good way of spending ones leisure time?
- Helping the less privileged
 - Sleeping
 - Watching movies
 - Drinking alcohol
88. One of the following is **not** a reason why people work today. Which one is it?
- Make them tired
 - Improve their lives
 - Please God
 - Get basic needs
89. Mariga, who is a rich man is thinking of how to use his extra money. As a Christian, what advice would you give?
- Build a big house for himself
 - Pay school fees for orphans
 - Buy a farm for his family
 - Go for trip abroad
90. The first Christian mission school was built in Coast at a place called
- Rabai
 - Kaloleni
 - Kilifi
 - Vihiga