



PREMIUM ASSESSMENT

20210307

**EARLY YEARS' ASSESSMENT**  
MONITORING LEARNER'S PROGRESS  
GRADE 1 - YEAR 2021

**2021**

**ENGLISH ACTIVITIES**


Name: \_\_\_\_\_

Learner's Number

**TICK YOUR GENDER**

**BOY**

**GIRL**



County Name: \_\_\_\_\_

County Code

Sub-County Name \_\_\_\_\_

Sub-County Code

School Name: \_\_\_\_\_

School code

**The teacher to fill in the grid below after marking the learner's work**

Number of Marks scored		Exceeds Expectations	Meets Expectations	Approaching Expectations	Below Expectations

## Listening and speaking

(5mks)

### Teacher reads the story to the learner and they answer questions

Mary is a little girl in grade one. She is seven years old. Her mother is a teacher and her father is a doctor. Mary likes eating sweets and cakes. She has a friend called Eunice. She is in grade two.

1. Mary is in grade \_\_\_\_\_
2. How old is Mary? \_\_\_\_\_
3. Mary's mother is a \_\_\_\_\_
4. What does Mary like \_\_\_\_\_

### Read aloud

(10 marks)

I am a boy

My mother is a teacher.

Come here my friend.

This table is mine.

The cat has a rat.

### Read the story and answer questions

(10 marks)

Kelvin and Mercy are friends. They are in grade one. Kelvin likes playing football and Mercy likes playing skipping rope. Mercy's mother is a nurse and Kelvin's father is a shopkeeper. They live in the same village.

1. Name two friends  
(a) \_\_\_\_\_  
(b) \_\_\_\_\_
2. The two children are in grade \_\_\_\_\_
3. Kelvin likes playing \_\_\_\_\_ and Mercy likes playing \_\_\_\_\_.

4. Mercy's mother is a \_\_\_\_\_ and Kelvin's father is a \_\_\_\_\_.

5. Kelvin and Mercy live in the same \_\_\_\_\_.

6. **Write the plural of words used in the story** 2 marks

(a) nurse \_\_\_\_\_ (b) ball \_\_\_\_\_

7. **Fill in the missing sound** 5 marks

(a) t \_\_\_\_\_ ble

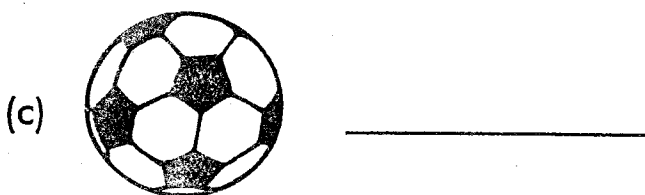
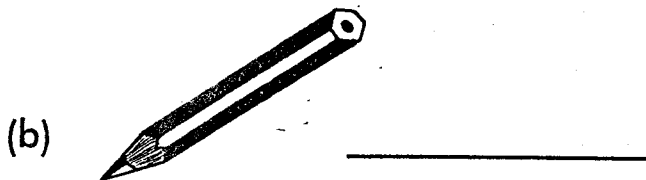

(b) g \_\_\_\_\_ rl


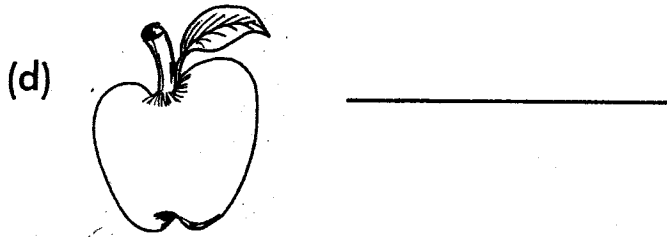
(c) r \_\_\_\_\_ t

(d) h \_\_\_\_\_ use

(e) c \_\_\_\_\_ p

8. **Name the pictures**





9. **Write in capital letters**

(a) dirty \_\_\_\_\_

(b) night \_\_\_\_\_

(c) house \_\_\_\_\_

(d) soap \_\_\_\_\_

(e) table \_\_\_\_\_

10. **Use an or a**

a) \_\_\_\_ cup

(b) \_\_\_\_ apple

(c) \_\_\_\_ ox

(d) \_\_\_\_ umbrella

(e) \_\_\_\_ pen



20210307

PREMIUM ASSESSMENT

**EARLY YEARS' ASSESSMENT**  
MONITORING LEARNER'S PROGRESS  
GRADE 1 - YEAR 2021


**2021**

**MATHEMATICS ACTIVITIES**

Name: \_\_\_\_\_

**TICK YOUR GENDER**

BOY  GIRL





Name of your school: \_\_\_\_\_



Your number \_\_\_\_\_



The teacher to fill in the grid below after marking the learner's work

Number of Marks scored		Exceeds Expectations	Meets Expectations	Approaching Expectations	Below Expectations


**1. Match the Shapes**

(a)  


(b)  

(c)  

(b)  =

(c)  =

**2. Count and Write**

(a)  =

**3. Add**

(a)  $9 + 1 =$  \_\_\_\_\_

(b)  $6 + 2 =$  \_\_\_\_\_

**4. Fill in the missing numbers**

(a) 2 3 4 \_\_\_\_ 6

(b) 10 11 12 13 \_\_\_\_

**5. Draw balls**

(a) 10 \_\_\_\_\_  
\_\_\_\_\_

**6. Subtract**

(a) 9  
- 7  
\_\_\_\_\_  
\_\_\_\_\_

(b)  $6 - 4 =$

**7. Match Numbers**

(a) 4                      ten

(b) 2                      one

(c) 1                      four

(d) 10                     two

**8. Fill in place value**

(a)  $41 =$  \_\_\_\_ tens \_\_\_\_ ones

(b)  $53 =$  \_\_ hundreds \_\_ tens \_\_

**9.** One week has \_\_\_\_\_ days

**10.** Name three days of the week

(a) \_\_\_\_\_

(b) \_\_\_\_\_

(c) \_\_\_\_\_

**11.** A cow has \_\_\_\_\_ legs

**Work out**

(a)  $9 + 1 =$

(b)  $8 - 4 =$

(c)  =

**12. Circle the bigger object**

(a) A



B



(b) A



B



**13.** Mr. Mwenda had 9 goats and 6 cows. How many animal were they altogether? \_\_\_\_\_

**14.**

$$\begin{array}{r} 11 \\ + 24 \\ \hline \end{array}$$

**15.**

$$\begin{array}{r} 94 \\ - 81 \\ \hline \end{array}$$

**16. Complete the pattern**

