

Gas laws

1. A sample of unknown compound gas **X** is shown by analysis to contain Sulphur and Oxygen. The gas requires 28.3 seconds to diffuse through a small aperture into a vacuum. An identical number of oxygen molecules pass through the same aperture in 20seconds. Determine the molecular mass of gas **X** (O= 16, S= 32)
2. (a) State Graham's Law of diffusion
(b) Gas **V** takes 10 seconds to diffuse through a distance of one fifth of a meter. Another gas **W** takes the same time to diffuse through a distance of 10 cm. if the relative molecular mass of gas **V** is 16.0; calculate the molecular mass of **W**
3. (a) State Charles' Law
(b) The volume of a sample of nitrogen gas at a temperature of 291K and 1.0×10^5 Pascals was $3.5 \times 10^{-2} \text{m}^3$. Calculate the temperature at which the volume of the gas would be $2.8 \times 10^{-2} \text{m}^3$ at 1.0×10^5 pascals.
4. 60 cm^3 of oxygen gas diffused through a porous partition in 50 seconds. How long would it take 60 cm^3 of sulphur (IV) oxide gas to diffuse through the same partition under the same conditions? (S = 32.0, O = 16.0)
5. (a) State Graham's law of diffusion
(b) 30 cm^3 of hydrogen chloride gas diffuses through a porous pot in 20seconds. How long would it take 42 cm^3 of sulphur(IV) oxide gas to diffuse through the same pot under the same conditions (H=1 Cl= 35.5 S= 32 O=16)
6. a) State **Boyles law**
b) Sketch a graph that represents Charles' law
c) A gas occupied a volume of 250 cm^3 at -23°C and 1 atmosphere. Determine its volume at 127°C when pressure is kept constant.
7. A factory produces Calcium Oxide from Calcium Carbonate as shown in the equation below:-
$$\text{CaCO}_3 (\text{s}) \rightarrow \text{CaO} (\text{s}) + \text{CO}_2 (\text{g})$$

(a) What volume of Carbon (IV) Oxide would be produced from 1000kg of Calcium Carbonate at s.t.p (Ca = 40, C = 12, O = 16, Molar gas volume at s.t.p = 22.4 dm^3)
8. A fixed mass of gas occupies 200 cm^3 at a temperature of 23°C and pressure of 740mmHg. Calculate the volume of the gas at -25°C and 780mmHg pressure
9. Gas **K** diffuses through a porous material at a rate of $12 \text{ cm}^3 \text{ s}^{-1}$ where as **S** diffuses through the same material at a rate of $7.5 \text{ cm}^3 \text{ s}^{-1}$. Given that the molar mass of **K** is 16, calculate the molar mass of **S**
10. (a) State Gay Lussac's law
11. (a) What is the relationship between the rate of diffusion of a gas and its molecular mass?
(b) A sample of Carbon (IV) Oxide takes 200 seconds to diffuse across a porous plug. How long will it take the same amount of Carbon (II) Oxide to diffuse through the same plug?(C=12, O=16)

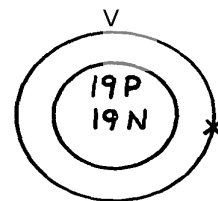
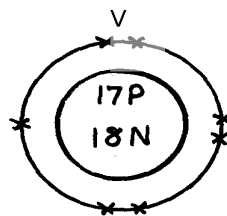
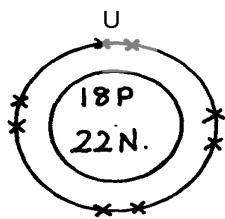
12. Below are structures of particles. Use it to answer questions that follow. In each case only electrons in the outermost energy level are shown

key

P = Proton

N = Neutron

X = Electron



- (a) Identify the particle which is an anion
 (b) Choose a pair of isotopes. Give a reason
13. The figure below shows two gases **P** and **Q** diffusing from two opposite ends 18 seconds after the experiment

(a) Which of the gases has a lighter density?

(b) Given that the molecular mass of gas **Q** is 17, calculate the molecular mass of **P**

14. Identify the particles that facilitate the electric conductivity of the following substances

(i) Sodium metal

(ii) Sodium Chloride solution

(iii) Molten Lead Bromide

15. Gas **B** takes 110 seconds to diffuse through a porous pot, how long will it take for the same amount of ammonia to diffuse under the same conditions of temperature and pressure?

(RMM of **B** = 34 RMM of ammonia = 17)

16. A gas occupies 5dm³ at a temperature of -27°C and 1 atmosphere pressure. Calculate the volume occupied by the gas at a pressure of 2 atmospheres and a temperature of 127°C

17. A fixed mass of gas occupies 200 cm³ at a temperature of 23°C and a pressure of 740 mm Hg. Calculate the volume of the gas at -25°C and 790 mm Hg pressure.

18. (a) State the Graham's law

(b) 100cm³ of Carbon (IV) oxide gas diffused through a porous partition in 30seconds. How long would it take 150cm³ of Nitrogen (IV) oxide to diffuse through the same partition under the same conditions? (C = 12.0, N = 14.0, O = 16.0)