

TARGETER WINGS

MONITORING LEARNER'S PROGRESS

GRADE 1 - 2020



MATHEMATICAL ACTIVITIES

Name

Gender:

Boy

Girl

School name

The teacher to fill the grid below after marking the learner's work.

Strand	Numbers	Measurement	Geometry
Question numbers	1 - 7	8	9
Number of questions	40	5	5
Number of questions correct			

1. Circle the smaller one.

(5mks)




2. Match the numbers with words.

(5mks)

- | | |
|---|-------|
| 2 | one |
| 4 | five |
| 1 | two |
| 5 | three |
| 3 | four |

3. Match and pair.

(5mks)



4



1



2



3



5

4. Add.

(10mks)

5 + 2 = _____

8

5

4

3 + 6 = _____

+ 2

+ 3

+ 3

4 + 4 = _____

9 + 1 = _____

6

7


2 + 3 = _____

+ 1

+ 0

5. Count and write how many.

(5mks)



=



=



=



=



=

6. Write the missing numbers.

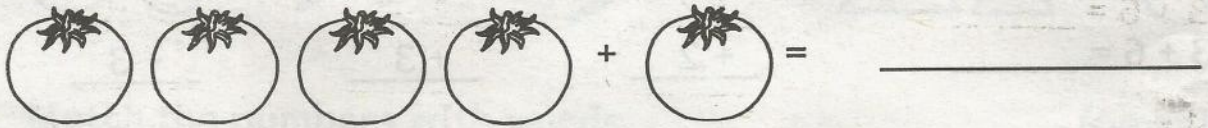

(5mks)

10, _____, 12, 13, _____, _____, 16, _____,

18, _____, 20

7. Put together.




(5mks)



(5mks)

8. Tick the one that holds more.

(5mks)



9. Colour these shapes.

(5mks)

 Green	 Orange	 Yellow
 Blue	 Red	

Total = (50marks)

**MATHEMATICAL ACTIVITIES
GRADE. 1**