

TARGETER WINGS

JUNIOR SECONDARY SCHOOL ASSESSMENT



GRADE 7 - 2024



PRE-TECHNICAL STUDIES

Time: 1 hr 20mins

Name _____
School _____
Adm No: _____ Date _____

Instructions:

- (a) Write your name, school, admission number and date in the spaces provided above.
- (b) Answer all questions in this question paper.

FOR EXAMINER'S USE ONLY			
Questions	Maximum score	Student's score	Performance scale
1	3		
2	3		
3	3		
4	2		
5	1		
6	1		
7	1		
8	2		
9	4		
10	4		
11	2		
12	5		
13	3		
14	1		
15	3		
16	3		
17	3		
18	2		
19	2		
20	2		
Total	50		

PRE-TECHNICAL STUDIES GRADE 7

PRE-TECHNICAL STUDIES

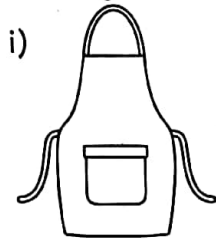
1. State one way in which each of the safety measures named below helps to protect one on the given work environment.

a) Wearing a face mask in class. (1mk)

b) Wearing a helmet when being carried by a motor cycle. (1mk)



c) Buckling a safety belt while in a vehicle. (1mk)

2. Identify and name each of the protective clothing shown below. (3mks)



3. List three hazards that one can face when working in the kitchen. (3mks)

4. Draw each of the safety gear named below. (2mks)



5. The things people wear when carrying out tasks to avoid injuring themselves and others are called _____ (1mk)

6. Name a protective clothing that should be worn by a person working in welding of metal parts. _____ (1mk)


7. List a career related to personal safety. _____ (1mk)

8. What is the importance of observing personal safety in the day-to-day life? Write two of them below. (2mks)

9. Match the following types of injuries with the correct cause. (4mks)
- | | |
|---------------|--|
| INJURY | CAUSE |
| A scald | Injury caused by a flame. |
| A burn | Partial or complete break of a bone. |
| A cut | Injury caused by hot liquid or steam. |
| A fracture | A tear in the skin caused by a sharp object. |

BUSINESS STUDIES

10. Look at the pictures below and write down what the people are doing in each picture. (4mks)



11. Grade 7 teacher asked his learners to use digital devices to search for the meaning of the terms Business and Business Studies. Write down the answers they were likely to find from the internet. (2mks)

a) Business _____

b) Business Studies _____

12. List five components of Business Studies. (5mks)

a) _____

b) _____

c) _____

d) _____

e) _____

13. Grade 7 learners were asked to give the meaning of the following terms. Which answers did they give. (3mks)

- a) Distribution - _____
- c) Consumption - _____

14. Peter was sent by her mother to buy bread, milk and sugar. Name one place he was likely to find the items. _____ (1mk)

COMPUTER STUDIES

15. A computer is a gadget that uses energy (electricity) to transform data into information using special instructions(programs). There are different types of computers. Write down examples of computers that you know. (3mks)

- a) _____ b) _____ c) _____
- d) _____ e) _____

16.



Define each term in the illustration above. (3mks)

- a) _____ b) _____
- c) _____

17. We need computers in almost every part of our lives. Write down reasons why people like using computers. (3mks)

- a) _____
- b) _____
- c) _____
- d) _____
- e) _____

18. Your parents brought a computer at home. They are only intending to use it for entertainment like listening to music and playing computer games. Advice your parents on other ways your family can use the computer. (2mks)

- a) _____ b) _____

19. A laptop computer is portable. This means that _____ (2mks)

20. How do we shut down a computer correctly? (2mks)

- a) _____
- b) _____