

# TARGETER WINGS JUNIOR SCHOOL ASSESSMENT



## GRADE 8 - 2024

### PRE-TECHNICAL STUDIES

**TIME: 1 hour 20 mins**

Name: _____
School: _____
Adm No: _____ Date _____

**Instructions:**

- (a) Write your name, school, admission number and date in the spaces provided above.
- (b) Answer all questions in this question paper.


FOR EXAMINER'S USE ONLY			
Questions	Maximum score	Student's score	Performance scale
1.	2		
2	2		
3	3		
4	3		
5	2		
6	2		
7	2		
8	2		
9	2		
10	4		
11	4		
12	2		
13	3		
14	4		
15	2		
16	2		
17	3		
18	2		
19	2		
20	2		
<b>Total</b>	<b>50</b>		

1. In each of the sentences below, write 'artistic' or 'technical' after the dash to indicate which type of drawing is being described. (2 marks)


- i) Used to provide accurate measurements of an object to scale \_\_\_\_\_
- ii) Used to express one's ideas, to decorate or to give pleasing appearance. \_\_\_\_\_

2. What do the following symbols represent as used in drawing; (2mks)

a)



b)



\_\_\_\_\_

3. List three causes of fire in a work environment. (3mks)

- a) \_\_\_\_\_
- b) \_\_\_\_\_
- c) \_\_\_\_\_

4. Name three safety rules and regulations in a work environment (3mks)

- a) \_\_\_\_\_
- b) \_\_\_\_\_
- c) \_\_\_\_\_

5. Which method of fire fighting is being explained in the sentence below? Choose your answer from among the ones in the bracket. (2mks)

"In this method, the supply of oxygen to the burning object is cut out to slow down the burning process."

\_\_\_\_\_

(Starving method, Smothering method, Interrupting method).

6. State two ways of preventing fire outbreak in a work environment (2mks)

- a) \_\_\_\_\_
- b) \_\_\_\_\_

7. What is "Plain scale" as used in drawing? (2mks)

- a) \_\_\_\_\_
- b) \_\_\_\_\_

8. State what 'R' and 'F' stand for in the ratio R/F as used in plain scale drawing (2mks)

- a) \_\_\_\_\_
- b) \_\_\_\_\_

9. The physical parts of a computer that are tangible are called \_\_\_\_\_ (2mks)

10. State the **four** categories of computer hardware (4mks)

- a) \_\_\_\_\_
- b) \_\_\_\_\_
- c) \_\_\_\_\_
- d) \_\_\_\_\_

11. List **four** common causes of data threats in an electronic device. (4mks)

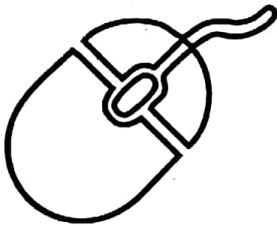
- a) \_\_\_\_\_
- b) \_\_\_\_\_
- c) \_\_\_\_\_
- d) \_\_\_\_\_

12. Give **one** reason as to why we should back up our data in our electronic digital devices (2mks)


\_\_\_\_\_

13. Name each of the following input devices below. (3mks)


a)



b)



c)




\_\_\_\_\_

14. Match each of the following scanning devices with the right function (4mks)

Scanning Device	Function
Optical Character Reader	Reads marked bubbles on a paper form, like answers on a multiple-choice test.
Barcode Reader	Reads special characters printed with magnetic ink, often found on cheques.
Magnetic Ink Character Reader	Scans (a series of lines or other shapes) to retrieve product information.
Optical Mark Reader	Reads printed text and turns it into digital text. It recognizes letters and words on paper.

15. Identify and name each of the computer storage devices shown below. (2mks)

a)



b)



\_\_\_\_\_

16. What is the meaning of the following terms used in business studies? (2mks)

i) Consumer

---

---

ii) Investor

---

---

17. List **three** forms of communication in a work environment (3mks)

a) \_\_\_\_\_

b) \_\_\_\_\_

c) \_\_\_\_\_

18. What are some **two** factors one should consider when selecting a communication channel? (2mks)

a) \_\_\_\_\_

b) \_\_\_\_\_

19. Explain the meaning of the following words used in written communication; (2mks)

i) Memo

---

---

ii) Minutes

---

---

20. Give **one** difference between goods and services. (2mks)

---

---