

**TARGETER WINGS**  
**JUNIOR SCHOOL ASSESSMENT**  
**GRADE 8 - 2024**



**CREATIVE ARTS AND SPORTS**

**TIME: 1 hour 20 mins**

Name _____
School _____
Adm No: _____ Date _____

**Instructions:**

- (a) Write your name, school, admission number and date in the spaces provided above.
- (b) Answer all questions in this question paper.

<b>FOR EXAMINER'S USE ONLY</b>			
<b>Questions</b>	<b>Maximum score</b>	<b>Student's score</b>	<b>Performance scale</b>
1	1		
2	4		
3	4		
4	4		
5	7		
6	3		
7	4		
8	6		
9	4		
10	1		
11	2		
12	5		
13	1		
14	2		
15	2		
<b>Total</b>	<b>50</b>		

1. Samson defined Visual Arts. Write the answer he gave (1mk)

---

---

2. Outline four social roles of Creative Arts and Sports in the society (4 mks)

a) \_\_\_\_\_

b) \_\_\_\_\_

c) \_\_\_\_\_

d) \_\_\_\_\_

3. State four examples of sports in Creative Arts and Sports. (4mks)

a) \_\_\_\_\_

b) \_\_\_\_\_

c) \_\_\_\_\_

d) \_\_\_\_\_

4. List four elements of a dance in Creative Arts and Sports. (4mks)

a) \_\_\_\_\_

b) \_\_\_\_\_

c) \_\_\_\_\_

d) \_\_\_\_\_

5. a) Peter was asked to define the term colour wheel. Write the answer he gave. (1mk)

---

---

b) List three primary colours. (3mks)

a) \_\_\_\_\_

b) \_\_\_\_\_

c) \_\_\_\_\_

c) List three secondary colours. (3mks)

a) \_\_\_\_\_





b) \_\_\_\_\_

c) \_\_\_\_\_

6. Alice and Emmanuel searched for elements of a verse from a digital device. List three elements of a verse that they found (3mks)

- a) \_\_\_\_\_
- b) \_\_\_\_\_
- c) \_\_\_\_\_

7. Write the French rhythmic names of the following musical notes. (4mks)

8. Grade eight learners were collecting and cutting pictures of Creative Arts and Sports in the society.

a) Write three cutting tools they used to cut the pictures. (3mks)

- a) \_\_\_\_\_
- b) \_\_\_\_\_
- c) \_\_\_\_\_

b) Write three locally available adhesives that they improvised to paste the cut pictures on a storyboard.

(3mks)

- a) \_\_\_\_\_
- b) \_\_\_\_\_
- c) \_\_\_\_\_

9. Draw a bass staff and group notes equivalent to three crotchet beats using rhythmic patterns in 4-time.

(4mks).


10. Identify the cleff below.

(1mk).



11. Identify the time signature used below.

(2mks)



12. a) Define pitch as used in Creative Arts and Sports.

(1mk)

---

---

b) Draw a G major scale on a bass staff ledger.

(4mks)

13. Norah was asked to give the meaning of still life drawing. Write the correct answer she gave. (1mk)

---

---


14. Ken wants to obtain a tertiary colour. Briefly describe how he can obtain it. (2mks)


---

---

---

15. Name the following accidentals used in music (2mks)

a)  \_\_\_\_\_

b)  \_\_\_\_\_