

MIRROR SERIES GRADE 7 - YEAR 2024

MONITORING LEARNER ASSESSMENT

SOCIAL STUDIES & R.E

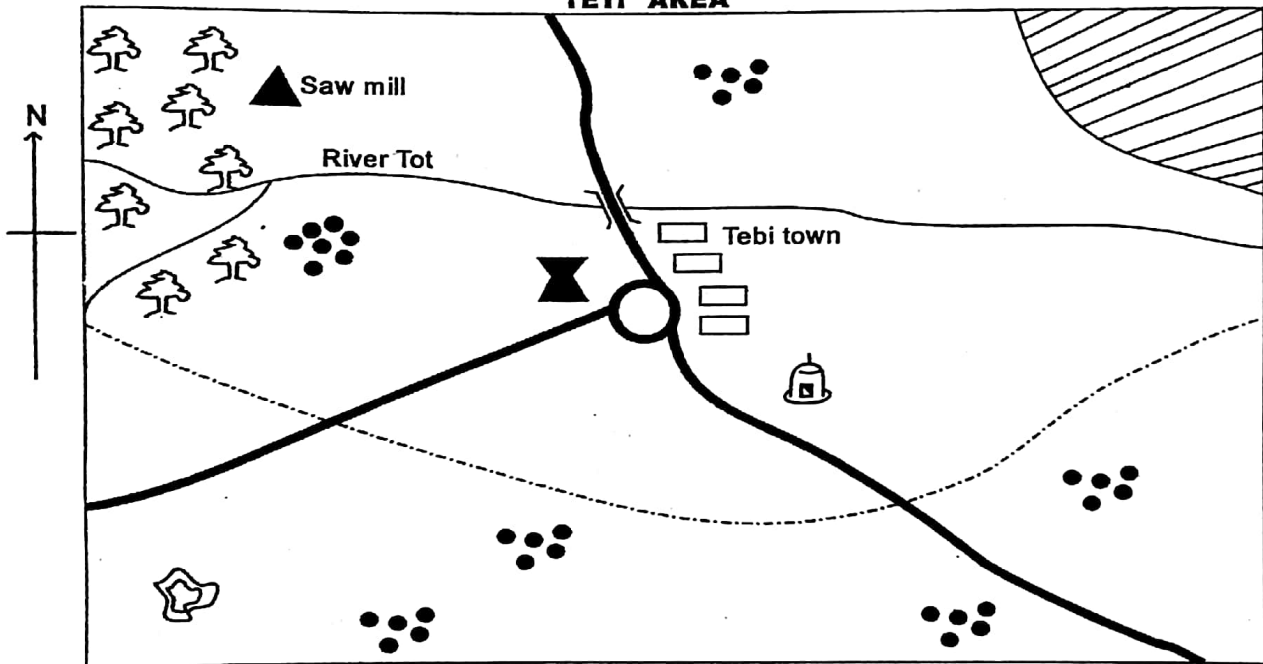
Time: 1Hour 40minutess

Name: _____ Date: _____









Answer ALL the questions in the spaces provided (40mks)

MAP WORK

TETI AREA



KEY

	Forest		County boundary		Game park
	Quarry		Mosque		Governor's monument
	Buildings		Tarmac road		

Study the map of Teti Area above and use it to answer questions 1-5

- State any two economic activities in Teti Area (2mks)
 - _____
 - _____
- What is the general flow of river Tot? _____ (1mk)
- Who is likely to be the head of Teti Area? _____ (1mk)
- Name one historic built environment in the map. _____ (1mk)
- The type of settlement in Teti Area is _____ (1mk)

6. The following are characteristics of a certain type of vegetation:-

- i) Ever green
- ii) Broad leaves
- iii) Tall trees

The type of vegetation described above is likely to be _____ (1mk)

7. State three areas in Eastern Africa that experience equatorial climate. (3mks)

- i) _____
- ii) _____
- iii) _____

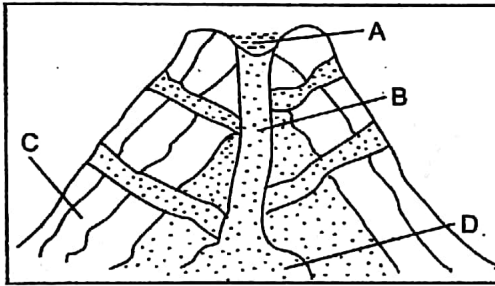
8. State any two characteristics of desert climate in Eastern Africa. (2mks)

- i) _____
- ii) _____

9. Match the following climatic regions with their characteristics. (4mks)

Climate	Characteristics
Mountain climate	Experience two rainy seasons
Tropical climate	High rainfall throughout the year
Equatorial climate	Has two main seasons: wet and dry
Modified Equatorial climate	Low temperatures at the peak of the mountain


10. Below is a diagram showing how volcanic mountain are formed.



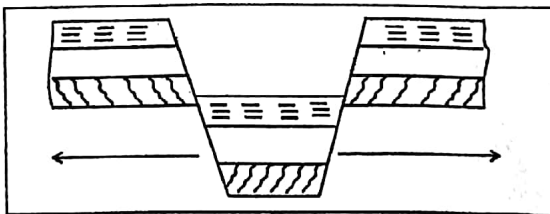
Name the labelled parts. (4mks)

- A _____
- B _____
- C _____
- D _____

11. In the space provided below draw a diagram showing the formation of block mountain.(3mks)



12. Below is a diagram showing formation of certain physical features in Eastern Africa.

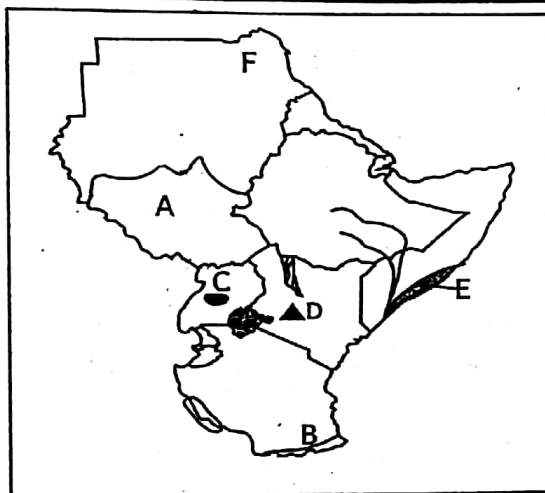


What is the physical feature formed? _____ (1mk)

13. List three examples of block mountains (3mks)

- i) _____
- ii) _____
- iii) _____

14. Block mountains are formed through a process called _____ (1mk)
15. Name one example of Lava dammed lake in Eastern Africa. _____ (1mk)
16. List examples of crater lakes in the following countries. (2mks)
 - i) Kenya: _____
 - ii) Ethiopia: _____
17. Imaginary horizontal lines drawn on the globe or map running from East to West are called _____ (1mk)
18. The largest country in Eastern Africa is _____ (1mk)
19. The most important line of longitude that runs from South to North is called _____ (1mk)
20. Use the map of Eastern Africa drawn below to answer the questions a-f (6mks)



- a) The country marked A is _____
- b) The river marked B is _____
- c) What is the name of the lake marked C? _____
- d) In which country do we find the mountain marked D? _____
- e) What is the name of the plain marked E? _____
- f) The desert marked F is called _____

CHRISTIAN RELIGIOUS EDUCATION (20mks)

1. Name any two authors who were inspired by God to write the Bible? (2mks)
 - i) _____
 - ii) _____
2. Why is it that the Bible is the inspired word of God? _____ (1mk)
3. After creating everything God rested on _____ day. (1mk)
4. State two ways in which you can use your leisure time properly. (2mks)
 - i) _____
 - ii) _____
5. State two passive leisure activities. (2mks)
 - i) _____
 - ii) _____
6. State two active leisure activities. (2mks)
 - i) _____
 - ii) _____

7. What are any two values that can help Christians to use their leisure time properly? (2mks)
 i) _____
 ii) _____
8. List down one way of inappropriate use of leisure time in the society. (1mk)

9. State any one value that you can use to nurture your talents and abilities? (1mk)

10. Our talents and abilities should be used to _____ God. (1mk)
11. Match the following types of marriages and their meaning. (3mks)
- | Type of marriage | Meaning |
|----------------------------|---|
| Civil marriage | Conducted in accordance with the customs of the community. |
| Christian marriage | Conducted at the office of the registrar of marriages |
| African customary marriage | Conducted by a priest or pastor in charge of a place of worship |
12. God created woman out of _____ (1mk)
13. A woman was created to be a man's _____ (1mk)

ISLAMIC RELIGIOUS EDUCATION (20mks)

1. Identify any two major sins mentioned in Surah Al-Humaza (2mks)
 i) _____ ii) _____
2. What is the meaning of the following words in Surah Al-Qariah. (2mks)
 a) Al-Qariah _____
 b) Haawiyah _____
3. Mention any two blessings that we will be questioned about on the Judgement Day. (2mks)
 i) _____ ii) _____
4. According to Surah Al-Qariah, Allah(SWT) will judge people according to their _____ (1mk)

5. Identify three characteristics of people who are successful according to Surah Al-Asr. (3mks)
 i) _____
 ii) _____
 iii) _____
6. List down three things you would do to ensure you use your time well for the benefit in this world and in the hereafter. (3mks)
 i) _____
 ii) _____
 iii) _____
7. Mention any three lessons learnt from Surah Al-Humaza. (3mks)
 i) _____
 ii) _____
 iii) _____
8. Hamza's father has a big shop in town. Most of the weekends he spends all the time in the shop helping his father. During Dhuhr Swalah, he attends to customers until he forgets to pray in time. What advice would you give Hamza's father according to the teaching of Surah At-Takathur? (1mk)

9. Hussein is in Grade six. He spends most of his time at home watching cartoons and football. He doesn't finish his homework and sleeps late. Remembering Surah Al-Asr, what advice would you give Hussein? (1mk)

10. Complete the Hadith. (2mks)
 Abu Hurayrah (RA) narrated that the prophet(SAW) said, "Allah does not look at your appearance or wealth, but rather He looks at your _____ and _____."