



TARGETER WINGS

JUNIOR SCHOOL ASSESSMENT

GRADE 7 - 2024



CREATIVE ARTS AND SPORTS

TIME: 1 hour 20 mins

Name _____
School _____
Adm No: _____ Date _____

Instructions:

- (a) Write your name, school, admission number and date in the spaces provided above.
- (b) Answer all questions in this question paper.

FOR EXAMINER'S USE ONLY			
Questions	Maximum score	Student's score	Performance scale
1	4		
2	4		
3	6		
4	3		
5	3		
6	4		
7	6		
8	4		
9	4		
10	4		
11	4		
12	4		
Total	50		

1. Outline **four** ways on how music and sports are related. (4mks)

2. Amina is a grade 7 athlete who won gold medal for her exemplary performance in sports. List any **four** fitness exercises that enhance coordination and strength that she performs. (4mks)

3. Draw the following music notes. (6mks)

a) Semibreve





b) Minim

c) Crotchet

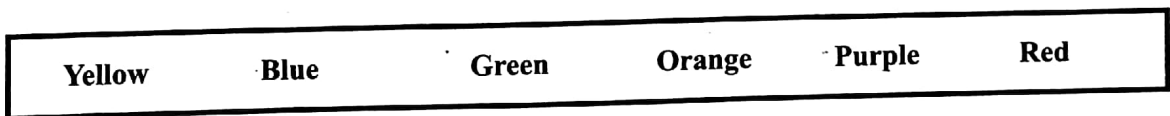
4. List **three** categories of Creative Arts and Sports. (3mks)

5. Draw a treble clef on staff lines. (3mks)

6. The following people are involved in various activities in Creative Arts and Sports . Identify and name each activity. (4mks)

Activity	Name of Activity
<p>a)</p> 	
<p>b)</p> 	
<p>c)</p> 	
<p>d)</p> 	

7. Mwende had the following colours in the box below.



Group the above colours into cool and warm colours in the spaces below. (6mks)





a) Cool colours : _____

b) Warm colours : _____

8. Ken wants to draw a themed composition of a sports activity. List any **four** dry media he can use to draw the composition. (4mks)

9. Outline **four** economic importance of Creative Arts and Sports. (4mks)

10. The following are rest for certain musical notes. Write the name of musical note for each of the following rests. (4mks)

Rest	Name of musical note
	
	
	
	

11. Grade eight learners listed careers that are related to Creative Arts and Sports on a chart. Write **four** careers that they listed. (4mks)

12. List **four** elements of a story. (4mks)
