

DAMUKA OUTSTANDING EXAM

PRE-PRIMARY I YEAR - 2019

NUMBERWORK ACTIVITIES

DAMUKA 004

Name School

Fill in the missing numbers

7, 8, __, __, __, 12, 13, __,

14, 15, 16, 17, __, 19, 20

Draw the balls

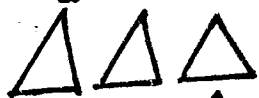
e.g

8 =

9 =

Count and write

e.g ○○○○○ = 5



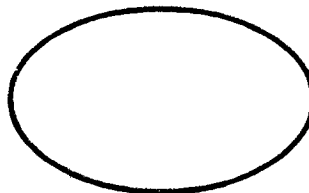
Put together(Add)

$$2 + 3 =$$


$$4 + 1 =$$

$$5 + 2 =$$


Match the shapes and names



Circle



Square



Oval