


STEP FLYER EVALUATION TEST




PRE-PRIMARY 2 - YEAR 2019

PP2

MATHEMATICAL ACTIVITIES

YOUR NAME: SCHOOL: DATE:



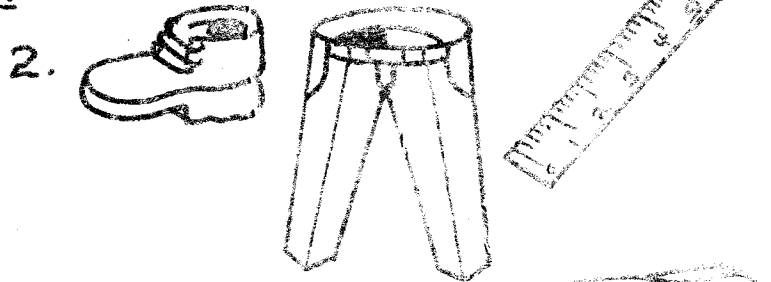
1. Circle the odd one out.



Which is small

Which is big

Which is tall



2. Match and pair by type.



3. Write 1 - 10.
