

GRADE 3
END TERM ASSESSMENT
TERM I 2023
MATHEMATICS ACTIVITIES

Name: _____

School: _____

Grade: _____

Gender: Boy _____ Girl _____

Exceeding Expectation	Meeting Expectation	Approaching Expectation	Below Expectation
50	44-49	30-39	0-29

1. Write down in words.

(2)

373 _____

809 _____

2. What are the missing numbers?

(2)

32, 34, 36, _____, _____, _____

905, 910, 915 _____, _____, _____

3. Take a paper given by the teacher, cut it and then fold it, and finally shade a quarter.(1)

4. Juma has 415 eggs. His sister Agnes gave him 47 more eggs. How many eggs did Juma have altogether?
(1)

5. Mrs. Jane had a Grade 3 teacher shared 48 books among 6 pupils. How many books did each pupil get?
(1)

6. Match the score to the positions.

Name	Score
Dorothy	198
James	261
Mary	305
Abdi	380
Saida	410
Peter	430

What position did Mary take in the test? _____

Who was in the fourth position? _____

What was Saida's position? _____

Arrange the marks scored from the lowest to the highest

(4)

7. A fisherman caught one hundred and twelve fish. He sold twenty seven of them. How many did he remain with? (1)

8. $214 - 108 =$ (1)#

9. One boy has ten fingers. How many fingers will four boys have? (1)

10. Fill in the missing number. (1)

_____ - 5 = 13

11. $162 =$ _____ hundreds _____ tens _____ ones

12. What is the place value of 8 in the following number?

801_____

13. Subtract using the abacus. (1)





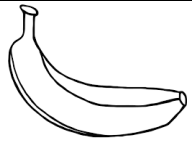
$764 - 13 =$

14. Mary had six mangoes, Rono had eight mangoes and Otieno had nine mangoes. How many mangoes did they have altogether?

15. A year starts in the month of _____

16. How many 50 shillings notes are in 200 shillings?

17. James went to the shop and bought the following.

				
Ksh. 50	Ksh. 10	Ksh. 20	Ksh. 15	Ksh. 5

How much would he pay for:

Bread and an egg? _____

Pencil and an exercise book?

18. What is:

A half of 36 _____

An eighth of 56 _____

What is the time?



Add using a numberline:

$$5 + 3 + 2 =$$

$$6 + 2 + 4 =$$

Which one is heavier? _____

