

GRADE 2
END TERM ASSESSMENT
TERM I 2023
MATHEMATICS ACTIVITIES

Name: _____

School: _____

Grade: _____

Gender: Boy _____ Girl _____

Exceeding Expectation	Meeting Expectation	Approaching Expectation	Below Expectation
18-20 (90% +)	17-15 (88% +)	14-12 (60%+)	11 and below (56%+)

I. Write in words

(4)

17 _____

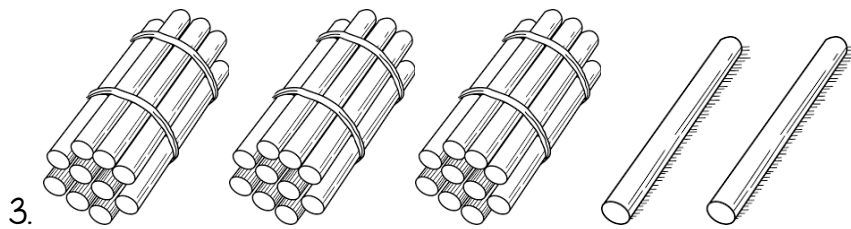
22 _____

41 _____

11 _____

2. Draw and shade a quarter.

(2)



_____ tens _____ ones

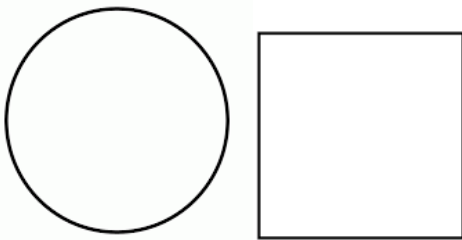
(1)

4. $52 =$ _____ tens _____ ones

(1)

5. Shade a half.

(2)



6. Write the next number.

(4)

13, 12, 11, 10 _____

26, 28, 30 _____

3, 6, 9, 12 _____

4, 8, 12, 16 _____

7. Add

(6)

$$3 + 2 + 7 =$$

Peter has twenty hens. He bought twenty more hens. How many hens will he have altogether?

Mrs. Kiprono has two toys. She received eight more toys. How many toys does she have altogether?

8. Mary had 9 books. She bought 5 more books. How many books does she have altogether? (1)

9. Subtract (4)

$$74 - 22 =$$

A farmer had 78 goats. She sold 65 goats during a dry season. How many goats was the farmer left with? _____

James had Kshs. 98. He gave Kshs. 43 to his friend. How much money was James left with? _____

Subtract 24 from 96 _____

10. Grace had 6 bananas. She ate two bananas. How many bananas were left? _____ (1)

11. What is 65 take away 34? _____ (1)

12. $5 + 5 + 5 = 15$

_____ x _____ = 15

(1)

13. xxx plus xxxxxx _____ + _____ = _____

(2)

14. Fill in the gaps.

(2)

_____ - 7 = 10

_____ - 8 = 28

15. Jamuhuri Day comes in the month of _____

(1)

16. Circle the longest line.

(2)



17. Fill in the gaps.

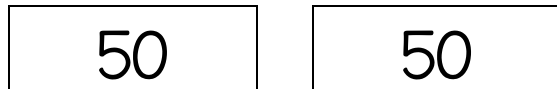
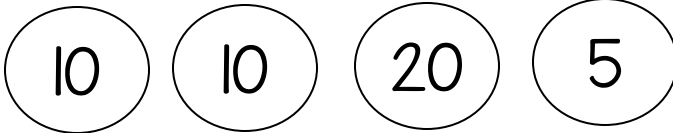
(2)

June, July August, _____, October

January, _____, March

18. How much?

(2)



19. Complete

(3)

7 weeks = _____ days

6 weeks = _____ days

4 weeks = _____ days

20 Fill in the blank with either 'need' or 'want'

(3)

Food _____

Clothes _____

Television _____

21. Draw the following:

(2)

Curved line	Triangle

17. Draw the next shape.

