

GRADE 2
END TERM ASSESSMENT
TERM 2 2023
INTEGRATED ASSESSMENT

1. Environmental Activities
2. Hygiene and nutrition
3. Christian Religious Education

Name: _____

School: _____

Grade: _____

Gender: Boy _____ Girl _____

For official use only

TASK	Exceeding Expectation	Meeting Expectation	Approaching Expectation	Below Expectation
	31-40 (86-100%)	21-30 (76%-85%)	11-20(66%-75%)	0-10(0-65%)
Environmental				
Hygiene and Nutrition				
CRE activities				

ENVIRONMENTAL ACTIVITIES

1. Which season do we plant crops?_____

(1)

2. Draw the picture showing the following weather condition:

Rain falling on a field with maize crops.

3. What weather is best for kites to fly high in the sky?

(1)

4 List down five uses of water.

(5)

a)_____

d)_____

b)_____

e)_____

c)_____

5. Name the 3 types of soil that we learnt about.

(3)

a)_____

c)_____

b)_____

6. Which soil is best for farming?_____

(1)

7. List down the four categories of animals.

(4)

a)_____











c)_____

b)_____

d)_____

Study the weather chart below and answer the questions carefully and correctly.

DAY	WEATHER IN THE MORNING	WEATHER IN THE AFTERNOON
-----	------------------------	--------------------------

Monday		
Tuesday		
Wednesday		
Thursday		
Friday		

8. It was calm on _____ in the morning and _____ in the afternoon. (1)

9. On which days would you wash your clothes in the morning? (2)

a) _____ b) _____

10. Name the days you should carry an umbrella. (2)

a) _____ b) _____ c) _____

11. The animal below is _____ (harmless, harmful) (1)



12. List four ways of handling animals safely. (4)

a) _____ b) _____

c)_____

d)_____

13. What are some of the objects that can form shadows? (5)

a)_____

d)_____

b)_____

e)_____

c)_____

14. Do you know the two types of features that we have learnt? Name them. (2)

a)_____

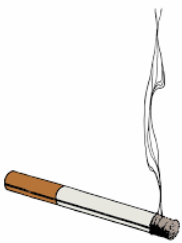
b)_____

15. Name two types of physical and built-up features respectively. (4)

Physical Features		Built up features	

HYGIENE AND NUTRITION ACTIVITIES

1. Name the substance below, that people smoke.



(1)

2. Name three ways in which you can tell someone has been smoking. (3)


a)_____

b)_____

c)_____

3. What is the meaning of the word second hand smoke? (1)

4. Name and colour correctly, the foods that make teeth strong and healthy. (2)





5. Write down four rooms found in your home. (4)


a) _____

c) _____

b) _____

d) _____

6. Draw and name any equipment found in the socializing room. (2)



7. List down four tastes of food that you have learnt. (4)

a) _____

c) _____

b) _____

d) _____

The table below shows sources of food. Fill in the spaces with examples of food we get.

Plants	Animal

9. We should brush our teeth at least _____ times a day. (1)

10. What do we call a thin soft piece of thread used to remove food remains in between our teeth? _____ (1)

11. Raha washed vegetables. She then used the same water to water flowers at home.



a) This is called _____ water. (1)

b) Write other ways the same water can be reused. (3)

a) _____

b) _____ c) _____

12. Which foods do we get from the animals below?



a)

a)

b)

b)

c)

c)

13. Name two materials that you can *improvise* to clean utensils. (2)

a) _____ b) _____

14. What can you use to clean your teeth in case you do not have a toothbrush and toothpaste? (2)

a) _____ b) _____

15. Identify four foods that have the following tastes.

Bitter	Salty	Sweet	Sour

16. Name one type of food that is rich in proteins. _____ (1)

17. What is the meaning of the word contaminate?

(1)

CHRISTIAN RELIGIOUS EDUCATION

1. Name two types of families that you have learnt. Give three examples of the members in each.

(4)

Type of family	Members		

2. What do you call children of your uncles and aunts? _____ (1)

3. What does Psalms 139:13 say? "You created every _____ of _____. You put me together in my _____ womb." (3)

4. Name five items that you share at home. (5)

a) _____




d) _____

b) _____

e) _____

c) _____

5. When did God create the pictures below? (fourth, second) (1)

6. The _____ is the word of God. (1)

7. Name three places where we read the Bible. (3)

a) _____ b) _____ c) _____

8. The Bible is divided into _____ testaments. (1)

9. Write down the first two books of the Bible. (2)

a) _____ b) _____

10. Draw three personal items that you know. (3)

11. God created us in His _____ and _____ (2)
12. God is happy when we _____ our parents at home. (fight,help) (1)
13. The Bible has _____ books in Old Testament and _____ books in the Old Testament. (2)
14. Name the four gospel books of the Bible. (4)
- a)_____ b)_____ c) _____ d)_____
15. God called Samuel _____ times. (two, four) (1)
16. Samuel lived with priest _____ in the temple. (1)
17. We should obey God by _____ (sinning, not sinning) (1)
18. How many people entered Noah's Ark?_____ (twelve, eight) (1)
19. The floods lasted for _____ days and nights, and destroyed everything. (1)
20. We should obey God _____(sometimes, always) (1)
21. How many times should Christians read the Bible?_____ (once, always) (1)
22. Who were the parents of Jesus?_____ and _____ (1)

TOTAL SCORE	
-------------	--