

**LEARNING AREA: SOCIAL STUDIES. GRADE 4**

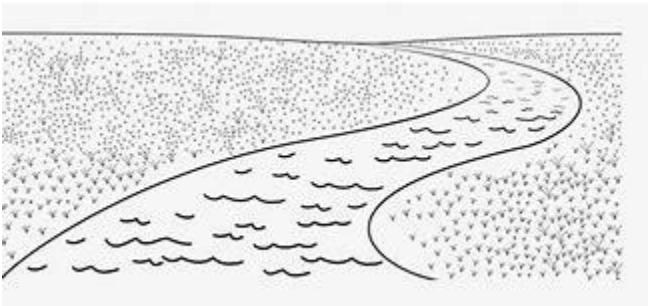
TERM \_\_\_\_\_ (MID) (END) (CONTINUOUS) YEAR \_\_\_\_\_

NAME \_\_\_\_\_ DATE \_\_\_\_\_ ATTENDANCE \_\_\_\_\_ GENDER \_\_\_\_\_ (UPI) \_\_\_\_\_

1. The sun rises in the \_\_\_\_\_ and sets in the \_\_\_\_\_
2. A compass is used to tell the \_\_\_\_\_ of a place and also to show the \_\_\_\_\_ of a place
3. Complete the following sentences;  
My school is located in \_\_\_\_\_ county and in \_\_\_\_\_ subcounty  
There are \_\_\_\_\_ in Kenya  
The head of a county is called a \_\_\_\_\_  
There are \_\_\_\_\_ sub counties in my county
4. Name the physical features (2marks)




\_\_\_\_\_



\_\_\_\_\_

5. Identify the season



6. People prepare their land for planting during the \_\_\_\_\_ season and plant during the \_\_\_\_\_ season
7. Write three ways in which people can take care of historic built environment (3marks)  
a) \_\_\_\_\_  
b) \_\_\_\_\_  
c) \_\_\_\_\_


8. Draw and colour a monument

9. Depending on each other is referred to as \_\_\_\_\_

10. Identify the following population distributions



a) \_\_\_\_\_



b) \_\_\_\_\_



c) \_\_\_\_\_

# LECLERE BARAKA MEMORIAL SCHOOL INTERNAL ASSESSMENTS

11. \_\_\_\_\_ environment refers to living and non-living things that occur naturally while \_\_\_\_\_ environment refers to the human-made environment. (2marks)

12. which country borders Kenya to the

- a) West \_\_\_\_\_
- b) East \_\_\_\_\_
- c) North \_\_\_\_\_
- d) South \_\_\_\_\_

13. define the term population


## CHRISTIAN RELIGIOUS EDUCATION ASSESSMENT

1. List the four gospel books

- a) \_\_\_\_\_
- b) \_\_\_\_\_
- c) \_\_\_\_\_
- d) \_\_\_\_\_

2. God created me in His own \_\_\_\_\_ and \_\_\_\_\_ (2marks)

3. Draw a face expressing sad emotion (1mark)



4. In the family of king David, Amnon forced \_\_\_\_\_ into bed and raped her (1mark)


5. The Bible encourages me to keep my body pure because it is the \_\_\_\_\_ of the Holy Spirit (1mark)

6. Write down three attributes of God (3marks)

- a) \_\_\_\_\_
- b) \_\_\_\_\_
- c) \_\_\_\_\_

7. \_\_\_\_\_ the tax collector climbed a sycamore tree to see Jesus (1mark)

8. Draw and colour Balaam's donkey (2marks)



BE	AE	ME	EE
0-39	40-59	60-89	90-100