

LECLERE BARAKA MEMORIAL SCHOOL INTERNAL ASSESSMENTS

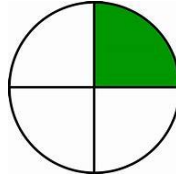
LEARNING AREA: **MATHEMATICAL ACTIVITIES. GRADE 3**


TERM _____ (MID) (END) (CONTINUOUS) YEAR _____

NAME _____ GENDER _____ ATTENDANCE _____ UPI _____

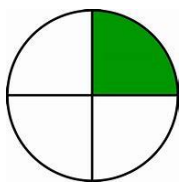
1. What fraction is shaded?



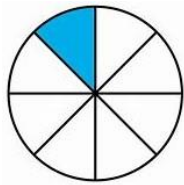




2. Which fraction is smaller?



(a)



(b)



(c)



(d)

3. A quarter of 24 is? _____ (1 mark)
4. A quarter of 36 is? _____ (1 mark)
5. An eighth of 16 is? _____ (1 mark)
6. $\frac{1}{8}$ of 40 is? _____ (1 mark)
7. $\frac{1}{2}$ of 10 is? _____ (1 mark)
8. Addition with and without regrouping (5 marks)

a)
$$\begin{array}{r} 246 \\ +48 \\ \hline \end{array}$$

(b)
$$\begin{array}{r} 367 \\ +24 \\ \hline \end{array}$$

(c) $900+84=$ _____

e) $501+57=$ _____ (f)
$$\begin{array}{r} 848 \\ +13 \\ \hline \end{array}$$

9. Place value

729= _____ hundreds _____ tens _____ ones

845= _____ hundreds _____ tens _____ ones

354= _____ hundreds _____ tens _____ ones

_____ = 3 hundreds 4 tens 9 ones

_____ = 9 hundreds 8 tens 6 ones

10. Match the months with their positions (5 marks)

- | | |
|-----------|-----------------|
| April | 8 th |
| July | 1 st |
| September | 4 th |
| August | 9 th |
| January | 7 th |

LECLERE BARAKA MEMORIAL SCHOOL INTERNAL ASSESSMENTS

11. Write the missing numbers;

- a) $__ - 4 = 3$ b) $__ - 3 = 5$ c) $__ - 7 = 2$ d) $__ - 5 = 1$ e) $__ - 2 =$

12. Subtraction; (5 marks)

- a) Teacher Ann has 9 rubbers. She gives 4 rubbers to Tom. How many rubbers is she left with?

- b) Esther made 7 baskets. She sold 5 baskets. How many baskets was she left with?

- c) Fatuma has 18 books. She gives 3 books to her brother. How many books is Fatuma left with?

- d) Ben had 5 pencils. He gave Peter 3 pencils. How many pencils was Ben left with?

- e) Nduku made 40 chapatis. She sold 30 chapatis. How many chapatis remained?

13. Divide (5 marks)

- a) $6 \div 2 = ______$ b) $9 \div 3 = ______$ c) $4 \div 2 = ______$ d) $8 \div 2 = ______$ e) $10 \div 2 = ______$

2. MEASUREMENT (7 MARKS)

1. Circle the needs

- | | | |
|--------------|--------------|--------------|
| Food | Car | Ball |
| House | Radio | Dress |

2. Price list



Sh. 20



Sh. 20



Sh. 15

How much is;

A ruler and an exercise book? _____ (1 mark)

A pencil and an exercise book? _____ (1 mark)

A ruler, a book and a pencil? _____ (1 mark)

Mary was given Sh. 40 to go and buy a ruler and an exercise book. How much was she left with? _____

3. GEOMETRY (3 MARKS)

Draw a straight line

Make patterns using;

i. Circle, square and triangle

ii. Square, oval and rectangle

BE	AE	ME	EE
0-29	30-49	50-85	86-100