

DISTINCTION UPPER PRIMARY ASSESSMENT



MONITORING LEARNER'S PROGRESS

6

GRADE 6 -2023


PREMIER

001


CREATIVE ARTS, SOCIAL STUDIES & RELIGION

PART 1: Art/Craft



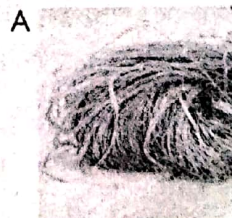
1. What is crayon etching?
A. Cutting and sticking pictures
B. Using dots to shade a picture
C. Scratching off paint or ink from a layer of brightly coloured crayons
D. Mixing wax with various colouring materials
2. The process of adding different coloured paints to make a picture is called _____.
A. carving
B. painting
C. montage
D. crayon etching
3. Why should one avoid working in direct sunlight when crayon etching?
A. To make smooth picture
B. To avoid sweating
C. To ensure gradual blending of colours
D. The wax may melt and spoil the picture
4. What is the name of the picture shown below?




- A. Tonal gradation strip
B. Montage composition
C. Shading
D. Printing
5. Which of the following pictures shows a properly balanced image?



6. In montage, _____ involves putting one picture cut-out on top of another to enable the picture at the back to be partly seen.
A. cutting
B. painting
C. overlapping
D. drawing
7. Using more dots on a drawing shows that the picture has _____ texture.
A. rough
B. smooth
C. soft
D. beautiful
8. An artist will shade a drawing of an object to make it look _____.
A. 3-D
B. lighter
C. brighter
D. darker
9. The following are primary colours expect _____.
A. red
B. orange
C. blue
D. yellow
10. A collage is _____.
A. a picture made by gluing different materials like paper and fabric shapes onto a flat background
B. where you go to school after high school
C. a picture made by drawing with a pencil
D. a good picture
11. Which one of the following materials is not used in weaving?



12. The process of making the leather strips marked x is called _____.



- A. cutting
B. preservation
C. thonging
D. beading
13. Give one way of conserving the environment during leatherwork.
A. Re-using old leather materials
B. Cleaning your working area
C. Disposing of water properly
D. Working with others to make leather items
14. You can use a _____ to make holes in your piece of leather.
A. paper punch
B. nail
C. hammer
D. pliers
15. The technique of using dots to create texture in a drawing is called _____.
A. shading
B. stippling
C. colouring
D. etching

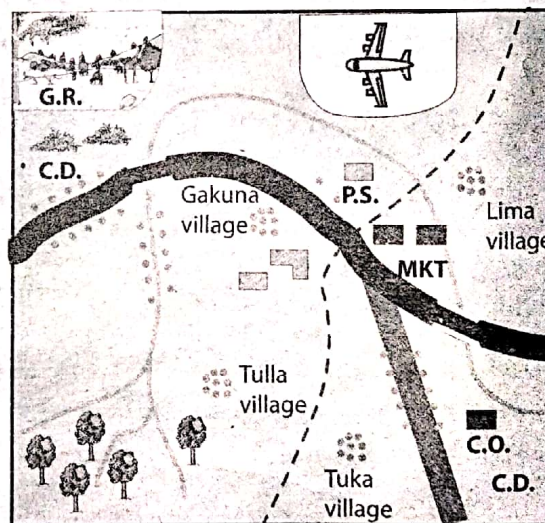
PART 2: Music

16. Which one is not a type of Kenyan indigenous instrument?
A. Percussion
B. String
C. Wind
D. Strumming
17. What kind of instruments are horn, flute, descant recorder and tubular bells?
A. Percussion
B. Shakers
C. String
D. Wind
18. Which of the following is a role in a folk song?
A. Adjudicator
B. Soloist
C. Audience
D. Composer
19. Young boys and girls sing as they play. What type of songs do they sing?
A. Lullabies
B. Sacred
C. Patriotic
D. Singing games
20. In Kenya, traditional costumes and instruments show,
A. How primitive Kenyans are
B. Our cultural heritage
C. How beautiful Kenyans are
D. Our music

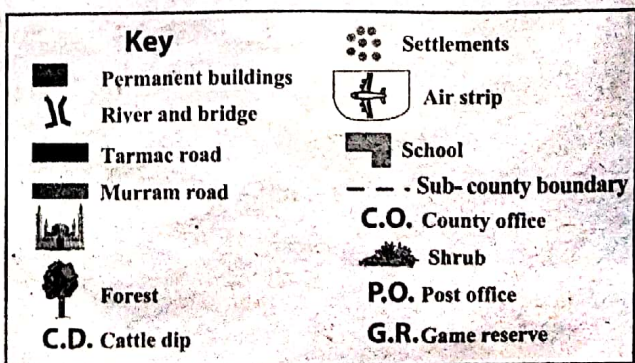
21. During a traditional dance, you noticed the dancers wearing rings, bangles and beads all over their bodies. What could all these be called?
A. Costumes
B. Ornaments
C. Accompaniments
D. Shakers
22. How many strings does a fiddle have?
A. 3
B. 8
C. 5
D. 1
23. Which one of the following is a string instrument?
A. Animal horns
B. Shiriri
C. Descant recorder
D. Bamboo flute
24. What do we call the person who leads a song in a choral performance?
A. Response group
B. Soloist
C. Instrumentalist
D. Audience
25. Which one is not an aspect of folk song?
A. Participants
B. Occasion
C. Instruments
D. Audience

PART 3: Social Studies.

Map of Gakuru Area



Scale 0 1 2 3 4 5 6 7 8 9 10 11 12



Study the map of Gakuru area and answer questions 26 - 28.

26. Gakuru area is likely to be a _____.
- A. Sub county
 - B. Sub-location
 - C. County
 - D. Location
27. The general flow of the river in Gakuru area is likely to be _____.
- A. East
 - B. West
 - C. South West
 - D. North West
28. The population settlement pattern in Gakuru area is _____.
- A. Sparse
 - B. Dense
 - C. Scarce
 - D. Light shade
29. My name is Hajji. I come from Wajir County. Our region experiences low and unreliable rainfall. Temperatures are very high. The climatic region is _____.
- A. Semi-desert
 - B. Desert
 - C. South Montane
 - D. Modified Equatorial
30. Neymar wants to know the human activities that are carried out in plains and plateaus. Which one is it?
- A. Pastoral farming
 - B. Tea and coffee growing
 - C. Sports activities
 - D. None of the above
31. A country that is North West of Kenya is _____.
- A. Tanzania
 - B. Somalia
 - C. South Sudan
 - D. Ethiopia

36. Muchogu was listing the examples of relief features. Which of the following was **not** correct?
- A. Plains
 - B. Mountains
 - C. Swamps
 - D. Valleys
37. In traditional African communities, some of the games and sports were played in the following special events **except** one. Which one is it?
- A. Marriage
 - B. Birth
 - C. Worshipping
 - D. Initiation
38. Kenya has several neighbouring countries. It is surrounded by Uganda to the _____.
- A. North East
 - B. East
 - C. South West
 - D. West
39. Which one of the following is **not** a physical feature?
- A. Hill
 - B. A Lake
 - C. A river
 - D. Elephant
40. Amina wanted to find the direction of school from home on the map. What element of a map was she likely to use?
- A. Map
 - B. Key
 - C. Frame
 - D. Compass

PART 4: Christian Religious Education.

41. Why did Eve agree to eat the forbidden fruit? _____
- A. She wanted to be wise like God
 - B. She did not know it was forbidden
 - C. She wanted to be foolish
 - D. She was not hungry
42. Which one of the following **cannot** increase family unity? _____
- A. Spending time with each other
 - B. Appreciating every family member
 - C. Sharing family responsibilities

- A. God is our creator
 B. God is our provider
 C. God is our protector
 D. God is our redeemer
45. How does a doctor use his abilities to fulfil God's purpose?
 A. By treating patients
 B. By charging a lot of money
 C. By making friends
 D. By greeting the patients
46. Which of these children has been denied their rights?
 A. Annete – Arranging the books on the shelf
 B. Brenda – Helping with chores around the house
 C. Imelda- She works in a coffee plantation during school hours
 D. Charles- He can play together with his friends.
47. Sharon was told by her teacher to be careful as she played outside. Sharon did not listen. A few minutes later, Sharon fell down the stairs and got hurt. What is the result of Sharon choosing not to listen to her teacher?
 A. When she disobeyed, she pleased her teacher
 B. She fell down and hurt herself
 C. She was pleased with herself
 D. She received many blessings
48. Which one of the following is a negative emotion?
 A. Happiness
 B. Excitement
 C. Anxiety
 D. Satisfaction
49. Which one of the following is not a value?
 A. Kindness
 B. Hatred
 C. Respect
 D. Integrity
50. Marriage is meant for _____
 A. Children who are less than eighteen years
 B. Children who are still in school
 C. Children who are not educated
 D. People who are above eighteen who are ready for commitment

PART 4: Islamic Religious Education

41. Which surah is an uncle of the prophet cursed?
 A. Masad
 B. Fil
 C. Quraysh
 D. Maun
42. Which city of surah Al-Nasr revealed?
 A. Taif
 B. Makkah
 C. Madina
 D. Hijaz
43. Which one of the following is a verse from surah Al-Kafirun?
 A. "You alone we worship and you alone we ask for help"
 B. "Nor are you worshippers of what I worship"
 C. "Say He is Allah the one"
 D. "From the mischief of those who practice secret art"
44. Faruqdeen, a Grade 5 learner, likes showing off while praying and reciting the Quran. The act is strongly discouraged in Surah _____.
 A. Falaq
 B. Takathur
 C. Humaza
 D. Maun
45. Rahma, a grade 4 learner, was asked by her I.R.E teacher to name the surah that promises the prophet a river in paradise. Which surah do you think she mentioned?
 A. Fatiha
 B. Kauthar
 C. Humaza
 D. Fil
46. When Zubeir, a Grade 6 learner, arrived in the mosque for Dhuhr swalat, he found the imam talking about the events that took place in the year of the elephant. He also mentioned the birth of the prophet. Which surah was the imam discussing?
 A. Fil
 B. Maun
 C. Fatiha
 D. Kauthar
47. Which month was the Qur'an revealed?
 A. Dhul Qaada
 B. Dhul-Hijjah
 C. Muharram
 D. Ramadhan
48. Learners of Grade 5 at Kwashee Primary School were asked to name the favours of Allah to the Quraysh. Who among them was right?
 A. Juma: They were given the custody of the Kaabah
 B. Zakaria: They were given the money
 C. Zuleikha: They were given rain
 D. Zulfa: They were given the Kaabah
49. Backbiting and rumour mongering are vices discouraged in Surah
 A. Humaza
 B. Fatiha
 C. Quraysh
 D. Asr
50. Jamal, a Grade 4 learner, has a habit of not being patient as well as lying to people. Which surah would you advise him to read?
 A. Qariah
 B. Ikhlas
 C. Asr
 D. Humaza