

# REVEALED NATIONAL EXAMINATIONS

## JUNIOR SECONDARY SCHOOL

### GRADE SEVEN **SERIES 001**

Name:

Grade:

School:

Ass. No


### Grade 7 Examination 2023

### COMPUTER SCIENCE

Time: 1 hour 20 minutes plus 10 minutes for reading

#### INSTRUCTION TO CANDIDATE:

- Write your name, candidate number, class and school in the boxes above.
- Do not open this booklet until you are told to do so.
- You are given 10 minutes to read through the questions. Do not start writing until you are told to do so.
- Read each question carefully.
- Answer ALL questions
- Write your answers, in either blue or black ink, in the spaces provided in the booklet.


#### FOR THE USE OF MARKERS ONLY

MARKS	
Total Score	
Out of	50
Percentage	

Email: [info@pinpointpublishers.co.ke](mailto:info@pinpointpublishers.co.ke)



1. Name the parts of a desktop computer (2mks)


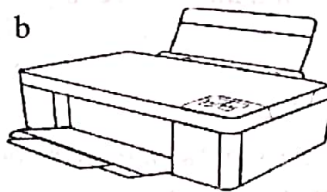
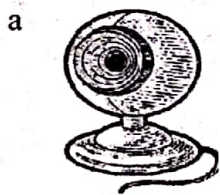


- (i) \_\_\_\_\_
- (ii) \_\_\_\_\_
- (iii) \_\_\_\_\_
- (iv) \_\_\_\_\_

2. Write the three main components of the computer system. (3mrks)

- (a) \_\_\_\_\_
- (b) \_\_\_\_\_
- (c) \_\_\_\_\_

3. Name the following computer parts. (6mks)



(Printer, Flash disk, Webcam)

Group the above devices into;

Output	input	storage
_____	_____	_____

4. Write the meaning of the following as used by the computer. (3mks)

- (i) G.U.I \_\_\_\_\_
- (ii) R.A.M \_\_\_\_\_
- (iii) C.P.U \_\_\_\_\_



5. A software created to detect, present and remove hardware is called \_\_\_\_\_

(1mk)

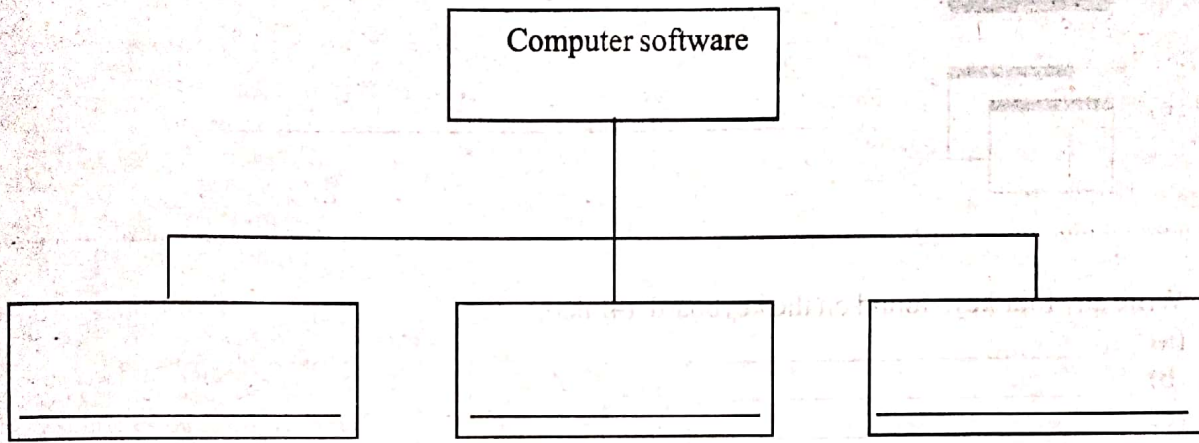
Name two examples of antivirus. (2mks)

(a) \_\_\_\_\_

(b) \_\_\_\_\_

6. Computer software is made up of three main types.

Complete the diagram below.



7. Name four examples of word processing data? (4mks)

(a) \_\_\_\_\_

(b) \_\_\_\_\_

(c) \_\_\_\_\_

(d) \_\_\_\_\_

Write four different versions of microsoft word process. (4mks)

(a) \_\_\_\_\_


(b) \_\_\_\_\_

(c) \_\_\_\_\_

(d) \_\_\_\_\_



8. In word document, write the name of the following symbols. (5mks)



9. Write any four keys found on the keyboard. (4mks)

- (a) \_\_\_\_\_
- (b) \_\_\_\_\_
- (c) \_\_\_\_\_
- (d) \_\_\_\_\_

10. A program used in computer for doing Maths is called \_\_\_\_\_ (1 mk)

11. Name four classification of computers by their size. (4mks)

- (a) \_\_\_\_\_
- (b) \_\_\_\_\_
- (c) \_\_\_\_\_
- (d) \_\_\_\_\_

12. Write two games you can play on the computer. (2mks)

- (a) \_\_\_\_\_
- (b) \_\_\_\_\_

13. State four safety measures to observe when using computing devices (4mks)

- (i) \_\_\_\_\_
- (ii) \_\_\_\_\_
- (iii) \_\_\_\_\_
- (iv) \_\_\_\_\_