



GRADE I
MID TERM ASSESSMENT
TERM I 2023
MATHEMATICS ACTIVITIES

Name: _____

School: _____

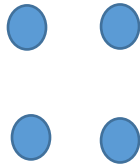
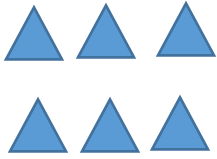
Grade: _____

Gender: Boy _____ Girl _____


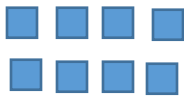
Exceeding Expectation	Meeting Expectation	Approaching Expectation	Below Expectation
22-25 (90% +)	20-22 (88% +)	20-15 (60%+)	0-14 (56%+)

1. Circle the group with less objects.


a)



b)



c)



2. Fill in the missing numbers

a) 10, ____, 12, ____, 14, _____

b) 8, _____, 10, 11, _____, _____ 14

c) 4, _____, _____, _____, 8

3. Add

a) $5+6=$

b) $8+2=$

c) $4+3=$

4. Draw the number of circles

a) 9=

b) 6=

c) 10=

d) 5=

5. Take away

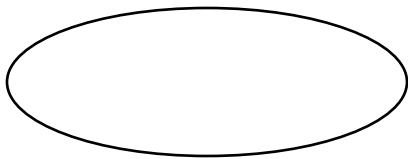
a) $10 - 3 =$

b) $\begin{array}{r} 7 \\ -2 \\ \hline \end{array}$

c) $\begin{array}{r} 3 \\ -1 \\ \hline \\ \hline \end{array}$

d) $||||| - || - | =$

6. Name the shape



7. Write in words

a) 2 _____

b) 3 _____

c) 1 _____

d) 6 _____