



GRADE I
MID TERM ASSESSMENT
TERM I 2023

1. Environmental Activities
2. Hygiene and Nutrition Activities
3. Christian Religious Education (CRE)

Name: _____

School: _____

Grade: _____


Gender: Boy _____ Girl _____

For official use only

TASK	Exceeding Expectation	Meeting Expectation	Approaching Expectation	Below Expectation
	13-15	10-12	7-9	0-6
Environmental				
Hygiene and Nutrition				
CRE activities				

ENVIRONMENTAL ACTIVITIES

1. Identify the weather symbols drawn below:





2. List two places we can get water

a) _____

b) _____

3. Identify one use of water at home. _____

4. Name the following sources of water:





5. Name two plants found around your home

a) _____

b) _____

6. Which animals give us food at home?

a) _____

b) _____

7. Draw the following animals

cat	dog	hen

8. A cow eats _____ (trees, grass).

TOTAL SCORE

HYGIENE AND NUTRITION

1. Name two of your body parts.

a) _____




b) _____

2. Grade one learners at Tumaini Primary School were learning about unhealthy foods. List two unhealthy foods we eat at home.

a) _____

b) _____

3. Identify the following food that makes our bodies healthy.



4. Aisha wanted to take a
bath. Name three materials that she will need to clean her body.

a) _____

b) _____

c) _____

5. Complete the following sentences correctly.

a) Dirty latrines smell _____ (bad, good)

b) We should bathe _____ (daily, weekly)

TOTAL SCORE	
-------------	--

CHRISTIAN RELIGIOUS EDUCATION

1. God is our _____ (creator, enemy).

2. God knows me by my _____ (name, picture)

3. How many times did God call Samuel? _____

4. We should _____ one another (love, hate)

5. A nuclear family has a father, mother and _____ (people, children).

6. God has written my name in his _____ (palm, legs)

7. List two body parts that God created.

8. Prayer is talking to _____ (satan, Jesus)

9. Name two animals that were created by God.

a) _____ b) _____

TOTAL SCORE	
-------------	--